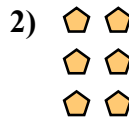




Запишите каждую совокупность в виде суммы и решите ее.






ОТВЕТЫ

об. 2+2=4

1. _____

2. _____

3. _____




4. _____

5. _____

6. _____

7. _____

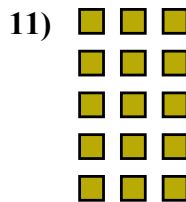



8. _____

9. _____

10. _____


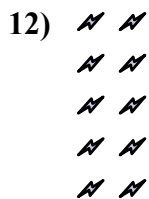
11. _____



12. _____


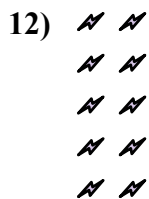
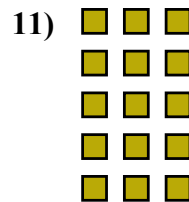





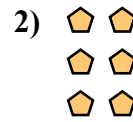
13. _____

14. _____





Запишите каждую совокупность в виде суммы и решите ее.

ОТВЕТЫ

об. $2+2=4$

1. $3+3+3=9$

2. $2+2+2=6$

3. $3+3+3+3=12$

4. $4+4+4=12$

5. $2+2+2+2=8$

6. $4+4+4+4=16$

7. $5+5+5=15$

8. $5+5+5+5=20$

9. $4+4=8$

10. $3+3=6$

11. $3+3+3+3+3=15$

12. $2+2+2+2+2=10$

13. $5+5=10$

14. $4+4+4+4+4=20$