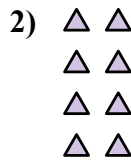
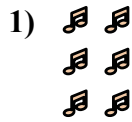
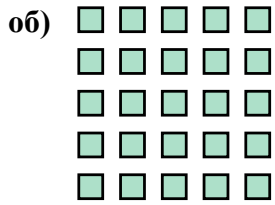




Запишите каждую совокупность в виде суммы и решите ее.

ОТВЕТЫ



об. 5+5+5+5+5=25

1. _____

2. _____

3. _____

4. _____

5. _____

6. _____

7. _____

8. _____

9. _____

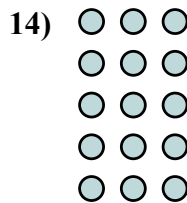
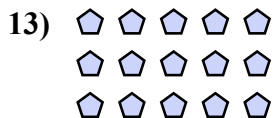
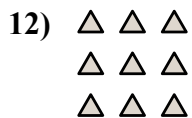
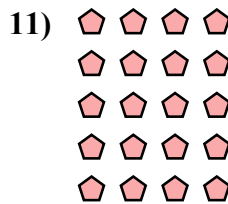


10. _____

11. _____

12. _____

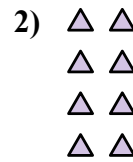
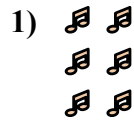
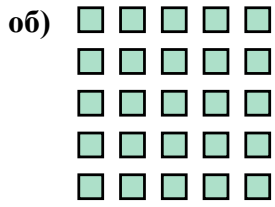
13. _____

14. _____





Запишите каждую совокупность в виде суммы и решите ее.



об. $5+5+5+5+5=25$

1. $2+2+2=6$

2. $2+2+2+2=8$

3. $3+3=6$

4. $5+5+5+5=20$

5. $2+2+2+2+2=10$

6. $2+2=4$

7. $4+4+4=12$

8. $5+5=10$

9. $3+3+3+3=12$

10. $4+4+4+4=16$

11. $4+4+4+4+4=20$

12. $3+3+3=9$

13. $5+5+5=15$

14. $3+3+3+3+3=15$

