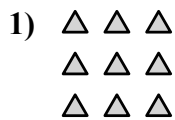
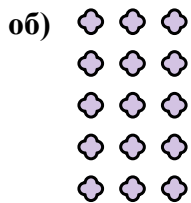




Запишите каждую совокупность в виде суммы и решите ее.

**ОТВЕТЫ**





об. 3+3+3+3+3=15

1. \_\_\_\_\_

2. \_\_\_\_\_

3. \_\_\_\_\_




4. \_\_\_\_\_

5. \_\_\_\_\_

6. \_\_\_\_\_


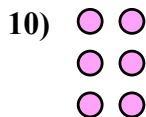
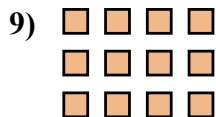
7. \_\_\_\_\_



8. \_\_\_\_\_

9. \_\_\_\_\_

10. \_\_\_\_\_

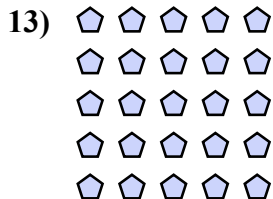


11. \_\_\_\_\_

12. \_\_\_\_\_

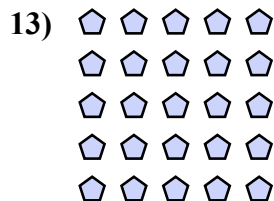
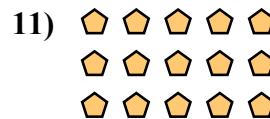
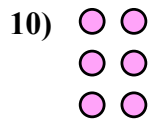
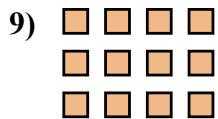



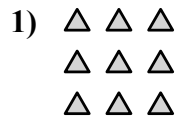
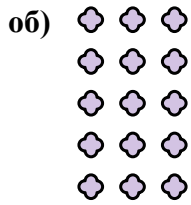
13. \_\_\_\_\_

14. \_\_\_\_\_





Запишите каждую совокупность в виде суммы и решите ее.

ОТВЕТЫ

об.  $3+3+3+3+3=15$

1.  $3+3+3=9$

2.  $3+3=6$

3.  $2+2+2+2=8$

4.  $4+4+4+4=16$

5.  $5+5=10$

6.  $4+4=8$

7.  $3+3+3+3=12$

8.  $4+4+4+4+4=20$

9.  $4+4+4=12$

10.  $2+2+2=6$

11.  $5+5+5=15$

12.  $5+5+5+5=20$

13.  $5+5+5+5+5=25$

14.  $2+2=4$