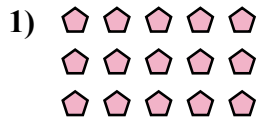




Запишите каждую совокупность в виде суммы и решите ее.

**ОТВЕТЫ**

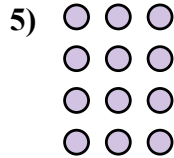



об. 3+3=6

1. \_\_\_\_\_

2. \_\_\_\_\_

3. \_\_\_\_\_

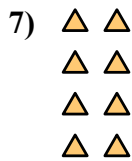
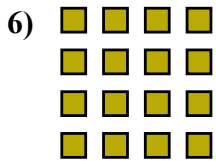


4. \_\_\_\_\_

5. \_\_\_\_\_

6. \_\_\_\_\_

7. \_\_\_\_\_

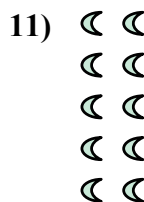




8. \_\_\_\_\_

9. \_\_\_\_\_

10. \_\_\_\_\_

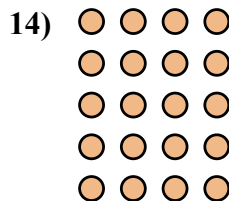
11. \_\_\_\_\_



12. \_\_\_\_\_

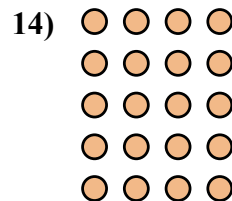
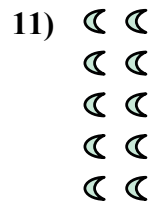



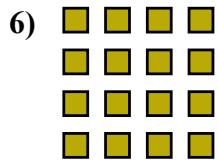
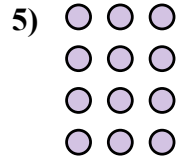


13. \_\_\_\_\_

14. \_\_\_\_\_





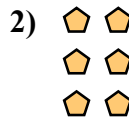
Запишите каждую совокупность в виде суммы и решите ее.

ОТВЕТЫоб.  $3+3=6$ 1.  $5+5+5=15$ 2.  $3+3+3=9$ 3.  $5+5=10$ 4.  $2+2+2=6$ 5.  $3+3+3+3=12$ 6.  $4+4+4+4=16$ 7.  $2+2+2+2=8$ 8.  $4+4+4=12$ 9.  $5+5+5+5+5=25$ 10.  $5+5+5+5=20$ 11.  $2+2+2+2+2=10$ 12.  $4+4=8$ 13.  $2+2=4$ 14.  $4+4+4+4+4=20$



Запишите каждую совокупность в виде суммы и решите ее.

**ОТВЕТЫ**






об. 2+2=4

1. \_\_\_\_\_

2. \_\_\_\_\_

3. \_\_\_\_\_





4. \_\_\_\_\_

5. \_\_\_\_\_

6. \_\_\_\_\_

7. \_\_\_\_\_

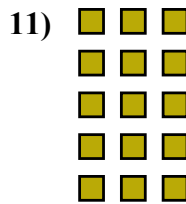



8. \_\_\_\_\_

9. \_\_\_\_\_

10. \_\_\_\_\_


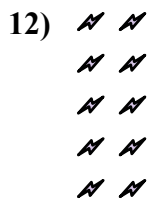
11. \_\_\_\_\_



12. \_\_\_\_\_



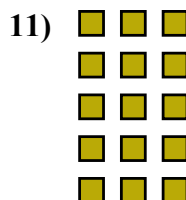



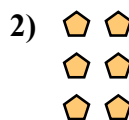
13. \_\_\_\_\_

14. \_\_\_\_\_





Запишите каждую совокупность в виде суммы и решите ее.

ОТВЕТЫ

об.  $2+2=4$

1.  $3+3+3=9$

2.  $2+2+2=6$

3.  $3+3+3+3=12$

4.  $4+4+4=12$

5.  $2+2+2+2=8$

6.  $4+4+4+4=16$

7.  $5+5+5=15$

8.  $5+5+5+5=20$

9.  $4+4=8$

10.  $3+3=6$

11.  $3+3+3+3+3=15$

12.  $2+2+2+2+2=10$

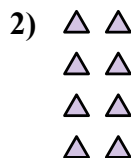
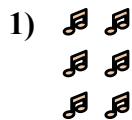
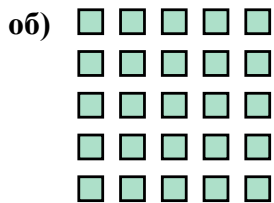
13.  $5+5=10$

14.  $4+4+4+4+4=20$



Запишите каждую совокупность в виде суммы и решите ее.

ОТВЕТЫ





об. 5+5+5+5+5=25

1. \_\_\_\_\_

2. \_\_\_\_\_

3. \_\_\_\_\_



4. \_\_\_\_\_

5. \_\_\_\_\_

6. \_\_\_\_\_

7. \_\_\_\_\_

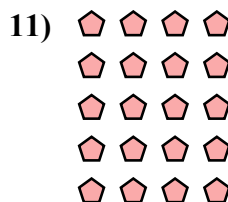
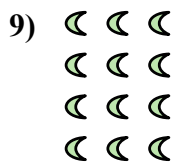


8. \_\_\_\_\_

9. \_\_\_\_\_

10. \_\_\_\_\_

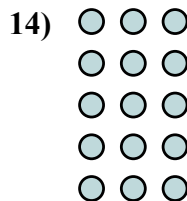
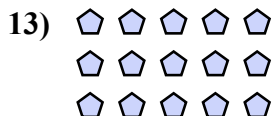
11. \_\_\_\_\_



12. \_\_\_\_\_

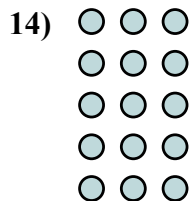
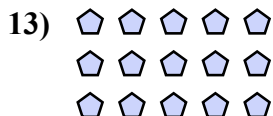
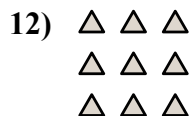
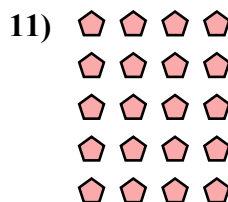
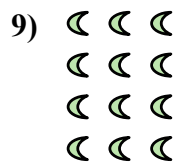


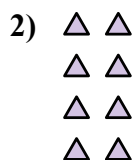
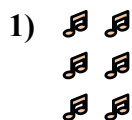
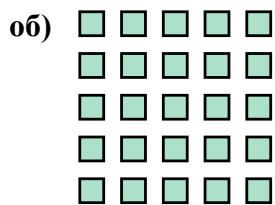
13. \_\_\_\_\_

14. \_\_\_\_\_





Запишите каждую совокупность в виде суммы и решите ее.

**ОТВЕТЫ**

об.  $5+5+5+5+5=25$

1.  $2+2+2=6$

2.  $2+2+2+2=8$

3.  $3+3=6$

4.  $5+5+5+5=20$

5.  $2+2+2+2+2=10$

6.  $2+2=4$

7.  $4+4+4=12$

8.  $5+5=10$

9.  $3+3+3+3=12$

10.  $4+4+4+4=16$

11.  $4+4+4+4+4=20$

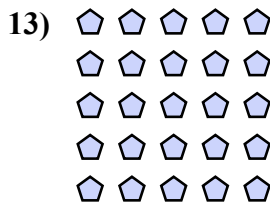

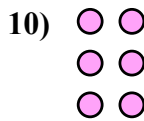
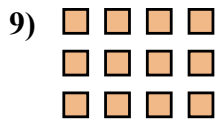
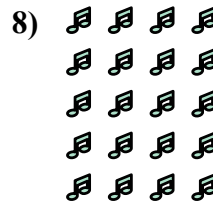


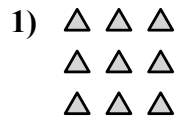
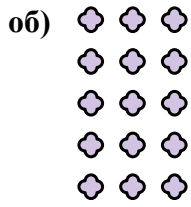
12.  $3+3+3=9$

13.  $5+5+5=15$

14.  $3+3+3+3=15$



Запишите каждую совокупность в виде суммы и решите ее.

ОТВЕТЫоб.  $3+3+3+3+3=15$ 

1. \_\_\_\_\_

2. \_\_\_\_\_

3. \_\_\_\_\_

4. \_\_\_\_\_

5. \_\_\_\_\_

6. \_\_\_\_\_

7. \_\_\_\_\_

8. \_\_\_\_\_

9. \_\_\_\_\_

10. \_\_\_\_\_

11. \_\_\_\_\_

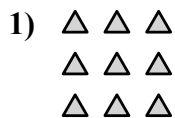
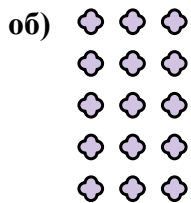
12. \_\_\_\_\_

13. \_\_\_\_\_

14. \_\_\_\_\_



Запишите каждую совокупность в виде суммы и решите ее.



об.  $3+3+3+3+3=15$

1.  $3+3+3=9$

2.  $3+3=6$

3.  $2+2+2+2=8$

4.  $4+4+4+4=16$

5.  $5+5=10$

6.  $4+4=8$

7.  $3+3+3+3=12$

8.  $4+4+4+4+4=20$

9.  $4+4+4=12$

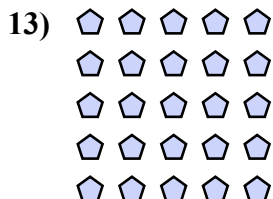

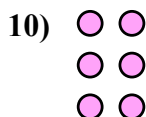
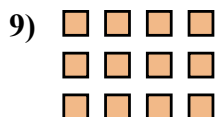



10.  $2+2+2=6$

11.  $5+5+5=15$

12.  $5+5+5+5=20$

13.  $5+5+5+5+5=25$

14.  $2+2=4$

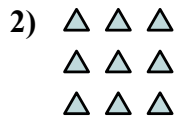





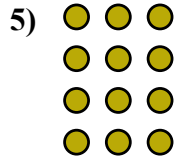
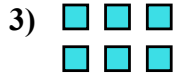


Запишите каждую совокупность в виде суммы и решите ее.

ОТВЕТЫ



об. 2+2=4



1. \_\_\_\_\_

2. \_\_\_\_\_

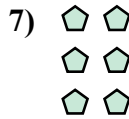

3. \_\_\_\_\_

4. \_\_\_\_\_

5. \_\_\_\_\_

6. \_\_\_\_\_

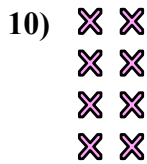
7. \_\_\_\_\_



8. \_\_\_\_\_

9. \_\_\_\_\_

10. \_\_\_\_\_

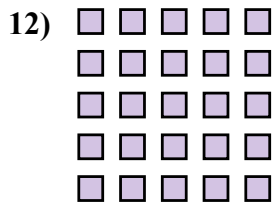


11. \_\_\_\_\_

12. \_\_\_\_\_


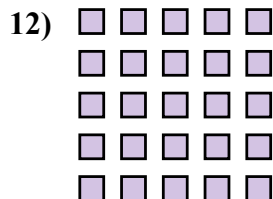
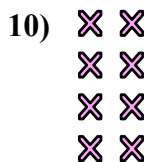

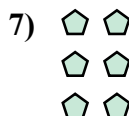

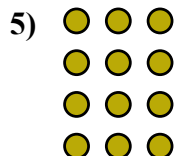
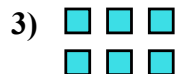
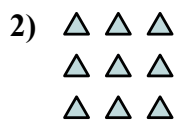
13. \_\_\_\_\_

14. \_\_\_\_\_







Запишите каждую совокупность в виде суммы и решите ее.

ОТВЕТЫоб. 2+2=41. 2+2+2+2+2=102. 3+3+3=93. 3+3=64. 4+4+4=125. 3+3+3+3=126. 4+4+4+4+4=207. 2+2+2=68. 3+3+3+3+3=159. 5+5=1010. 2+2+2+2=811. 5+5+5=1512. 5+5+5+5+5=2513. 4+4=814. 4+4+4+4=16



Запишите каждую совокупность в виде суммы и решите ее.

**ОТВЕТЫ**




об. 4+4+4+4=16

1. \_\_\_\_\_

2. \_\_\_\_\_

3. \_\_\_\_\_

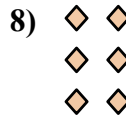



4. \_\_\_\_\_

5. \_\_\_\_\_

6. \_\_\_\_\_

7. \_\_\_\_\_


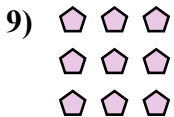


8. \_\_\_\_\_

9. \_\_\_\_\_

10. \_\_\_\_\_


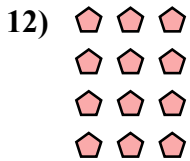
11. \_\_\_\_\_



12. \_\_\_\_\_


13. \_\_\_\_\_

14. \_\_\_\_\_





Запишите каждую совокупность в виде суммы и решите ее.

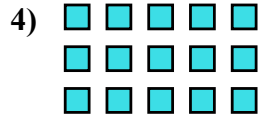


об.  $4+4+4+4=16$

1.  $4+4=8$

2.  $2+2+2+2+2=10$

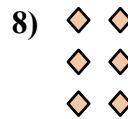

3.  $4+4+4=12$



4.  $5+5+5=15$

5.  $3+3=6$

6.  $5+5+5+5=20$



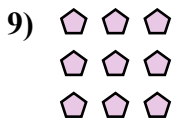


7.  $3+3+3+3+3=15$

8.  $2+2+2=6$

9.  $3+3+3=9$

10.  $5+5+5+5+5=25$


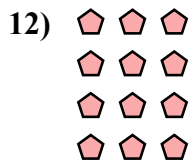


11.  $4+4+4+4+4=20$

12.  $3+3+3+3=12$

13.  $2+2=4$


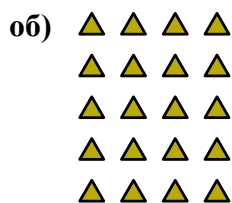
14.  $5+5=10$





Запишите каждую совокупность в виде суммы и решите ее.

**ОТВЕТЫ**

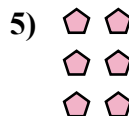


об. 4+4+4+4+4=20

1. \_\_\_\_\_

2. \_\_\_\_\_

3. \_\_\_\_\_


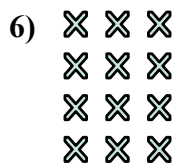


4. \_\_\_\_\_

5. \_\_\_\_\_

6. \_\_\_\_\_



7. \_\_\_\_\_



8. \_\_\_\_\_

9. \_\_\_\_\_

10. \_\_\_\_\_

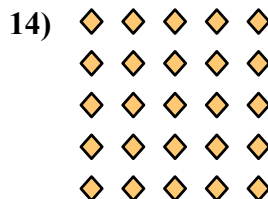


11. \_\_\_\_\_

12. \_\_\_\_\_

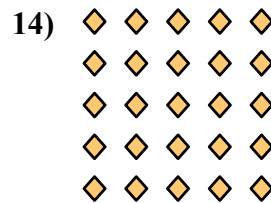
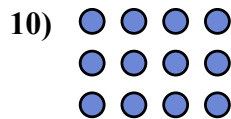


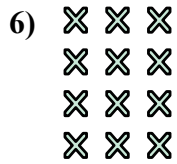
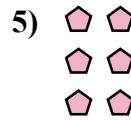

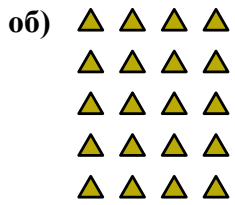
13. \_\_\_\_\_

14. \_\_\_\_\_





Запишите каждую совокупность в виде суммы и решите ее.

ОТВЕТЫ

об.  $4+4+4+4+4=20$

1.  $2+2+2+2=8$

2.  $2+2=4$

3.  $3+3+3+3+3=15$

4.  $4+4+4+4=16$

5.  $2+2+2=6$

6.  $3+3+3+3=12$

7.  $2+2+2+2+2=10$

8.  $3+3+3=9$

9.  $3+3=6$

10.  $4+4+4=12$

11.  $5+5=10$



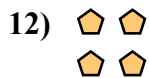

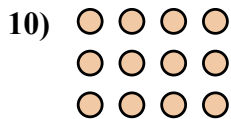
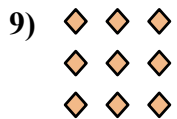
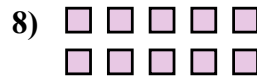
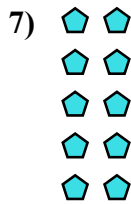
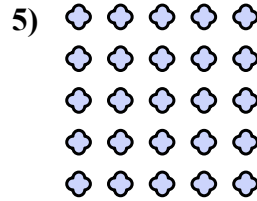

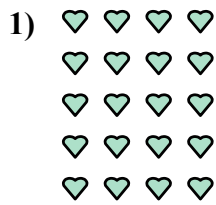

12.  $4+4=8$

13.  $5+5+5=15$

14.  $5+5+5+5+5=25$



Запишите каждую совокупность в виде суммы и решите ее.



**ОТВЕТЫ**

об.  $4+4+4+4=16$

1. \_\_\_\_\_

2. \_\_\_\_\_

3. \_\_\_\_\_

4. \_\_\_\_\_

5. \_\_\_\_\_

6. \_\_\_\_\_

7. \_\_\_\_\_

8. \_\_\_\_\_

9. \_\_\_\_\_

10. \_\_\_\_\_

11. \_\_\_\_\_

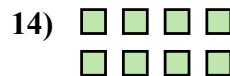

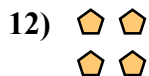


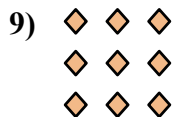
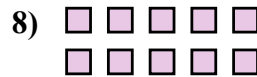
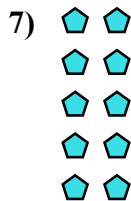
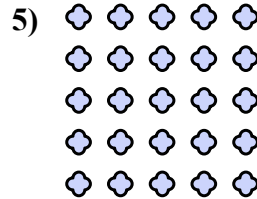

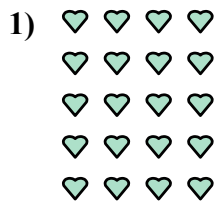

12. \_\_\_\_\_

13. \_\_\_\_\_

14. \_\_\_\_\_



Запишите каждую совокупность в виде суммы и решите ее.

**ОТВЕТЫ**

об.  $4+4+4+4=16$

1.  $4+4+4+4+4=20$

2.  $5+5+5+5=20$

3.  $3+3=6$

4.  $3+3+3+3=12$

5.  $5+5+5+5+5=25$

6.  $5+5+5=15$

7.  $2+2+2+2+2=10$

8.  $5+5=10$

9.  $3+3+3=9$

10.  $4+4+4=12$

11.  $2+2+2+2=8$

12.  $2+2=4$

13.  $2+2+2=6$

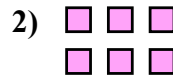
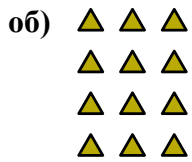
14.  $4+4=8$





Запишите каждую совокупность в виде суммы и решите ее.

**ОТВЕТЫ**

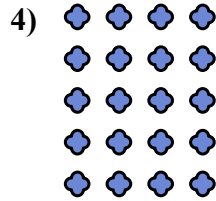



об.  $3+3+3+3=12$

1. \_\_\_\_\_

2. \_\_\_\_\_

3. \_\_\_\_\_

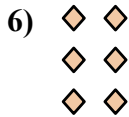


4. \_\_\_\_\_

5. \_\_\_\_\_

6. \_\_\_\_\_

7. \_\_\_\_\_

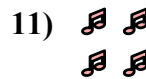
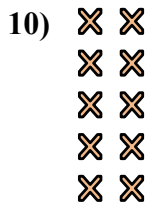
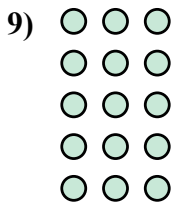


8. \_\_\_\_\_

9. \_\_\_\_\_

10. \_\_\_\_\_




11. \_\_\_\_\_



12. \_\_\_\_\_




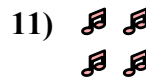
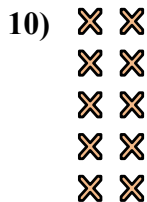
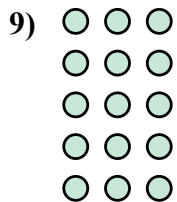
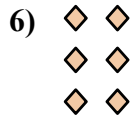
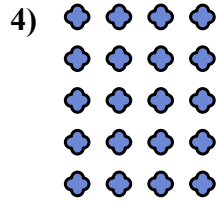

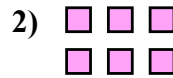
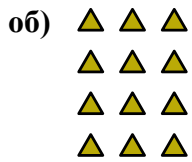
13. \_\_\_\_\_

14. \_\_\_\_\_





Запишите каждую совокупность в виде суммы и решите ее.

ОТВЕТЫ

об.  $3+3+3+3=12$

1.  $3+3+3=9$

2.  $3+3=6$

3.  $4+4+4=12$

4.  $4+4+4+4+4=20$

5.  $5+5=10$

6.  $2+2+2=6$

7.  $4+4=8$

8.  $4+4+4+4=16$

9.  $3+3+3+3+3=15$

10.  $2+2+2+2+2=10$

11.  $2+2=4$

12.  $5+5+5+5=20$

13.  $5+5+5=15$

14.  $2+2+2+2=8$



Запишите каждую совокупность в виде суммы и решите ее.






**ОТВЕТЫ**

об. 4+4+4=12

1. \_\_\_\_\_

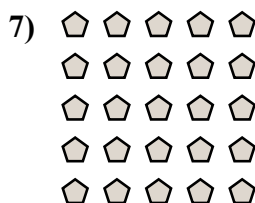
2. \_\_\_\_\_

3. \_\_\_\_\_



4. \_\_\_\_\_

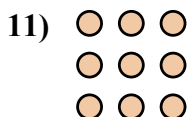

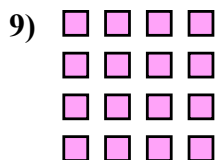
5. \_\_\_\_\_



6. \_\_\_\_\_

7. \_\_\_\_\_

8. \_\_\_\_\_



9. \_\_\_\_\_

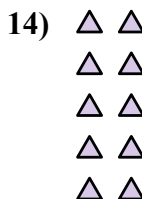
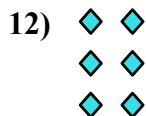
10. \_\_\_\_\_

11. \_\_\_\_\_

12. \_\_\_\_\_

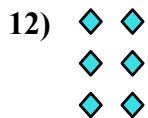
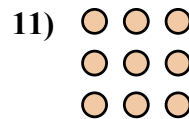

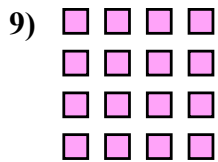

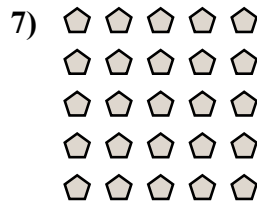
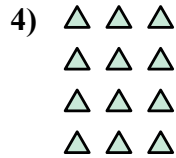


13. \_\_\_\_\_

14. \_\_\_\_\_





Запишите каждую совокупность в виде суммы и решите ее.

**ОТВЕТЫ**об. 4+4+4=121. 5+5=102. 5+5+5=153. 5+5+5+5=204. 3+3+3+3=125. 3+3+3+3+3=156. 3+3=67. 5+5+5+5+5=258. 2+2=49. 4+4+4+4=1610. 2+2+2+2=811. 3+3+3=912. 2+2+2=613. 4+4=814. 2+2+2+2+2=10