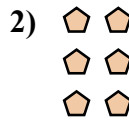
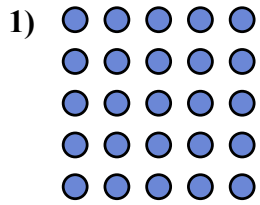




Запишите каждую совокупность в виде суммы и решите ее.

**ОТВЕТЫ**




об. 5+5+5+5=20

1. \_\_\_\_\_

2. \_\_\_\_\_

3. \_\_\_\_\_

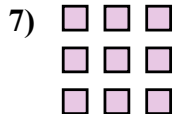


4. \_\_\_\_\_

5. \_\_\_\_\_

6. \_\_\_\_\_

7. \_\_\_\_\_


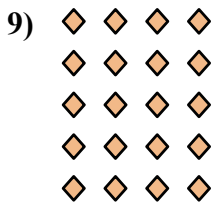


8. \_\_\_\_\_

9. \_\_\_\_\_

10. \_\_\_\_\_

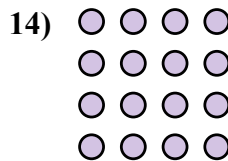
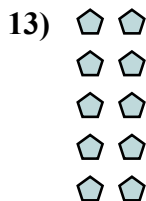
11. \_\_\_\_\_



12. \_\_\_\_\_

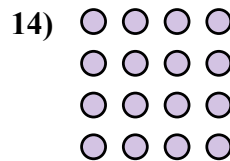
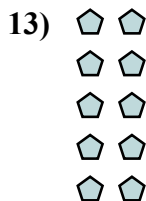

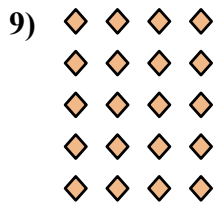
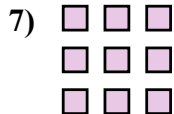

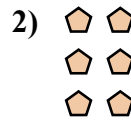
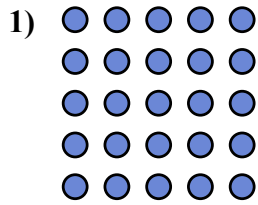
13. \_\_\_\_\_

14. \_\_\_\_\_





Запишите каждую совокупность в виде суммы и решите ее.

**ОТВЕТЫ**

об.  $5+5+5+5=20$

1.  $5+5+5+5+5=25$

2.  $2+2+2=6$

3.  $3+3+3+3=12$

4.  $3+3+3+3+3=15$

5.  $4+4=8$

6.  $5+5+5=15$

7.  $3+3+3=9$

8.  $4+4+4=12$

9.  $4+4+4+4+4=20$

10.  $3+3=6$

11.  $2+2+2+2=8$

12.  $2+2=4$

13.  $2+2+2+2+2=10$

14.  $4+4+4+4=16$