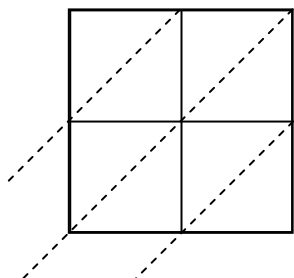




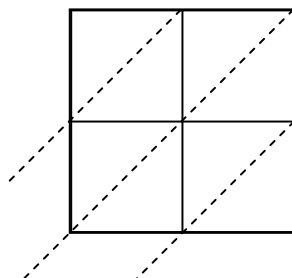
Используйте пространственную решетку для умножения, чтобы решить задачу.

ОТВЕТЫ

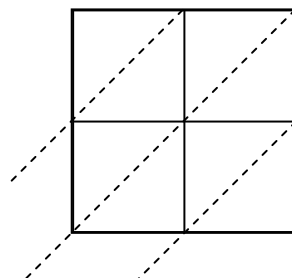
1) $99 \times 31 =$



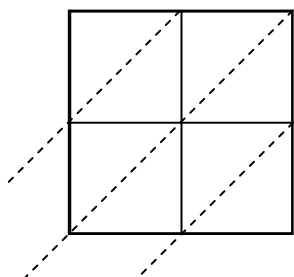
2) $93 \times 58 =$



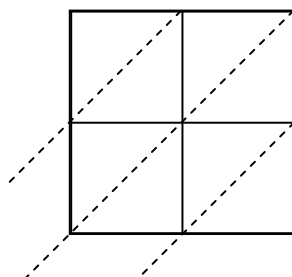
3) $46 \times 16 =$



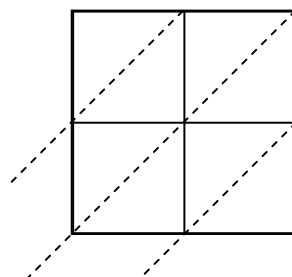
4) $74 \times 35 =$



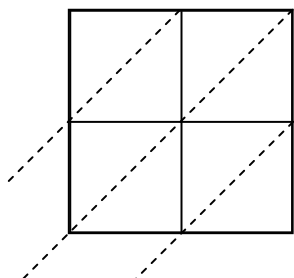
5) $96 \times 28 =$



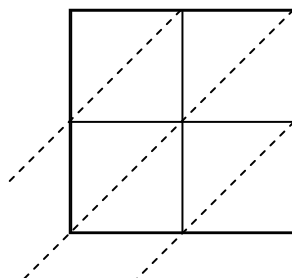
6) $30 \times 84 =$



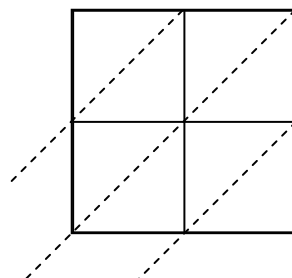
7) $55 \times 37 =$



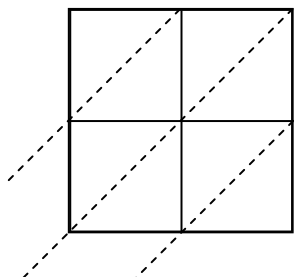
8) $43 \times 91 =$



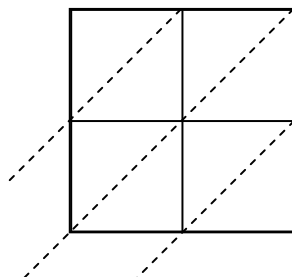
9) $78 \times 20 =$



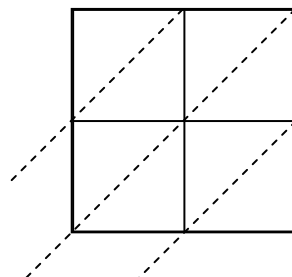
10) $84 \times 10 =$



11) $61 \times 10 =$



12) $47 \times 15 =$

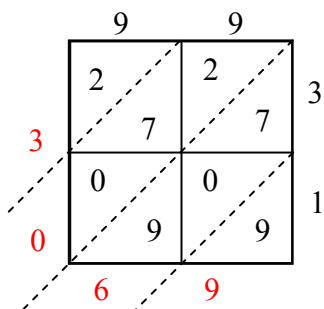


1. _____
2. _____
3. _____
4. _____
5. _____
6. _____
7. _____
8. _____
9. _____
10. _____
11. _____
12. _____

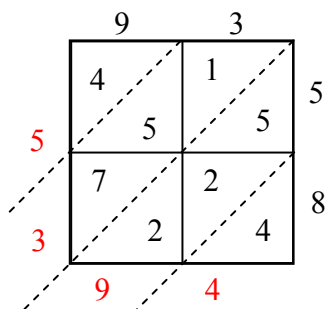


Используйте пространственную решетку для умножения, чтобы решить задачу.

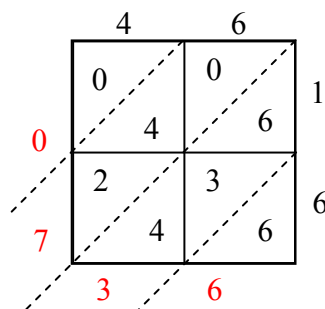
1) $99 \times 31 =$



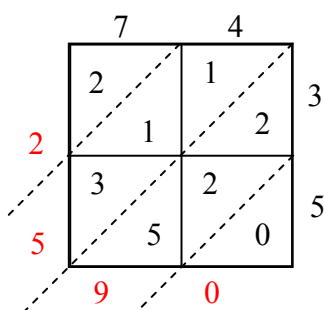
2) $93 \times 58 =$



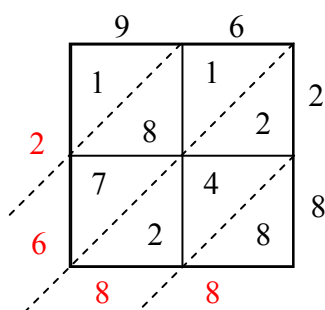
3) $46 \times 16 =$



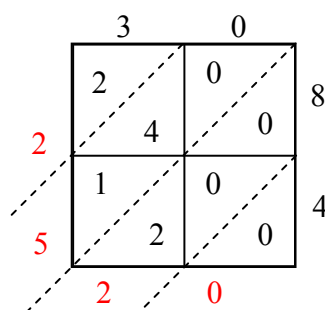
4) $74 \times 35 =$



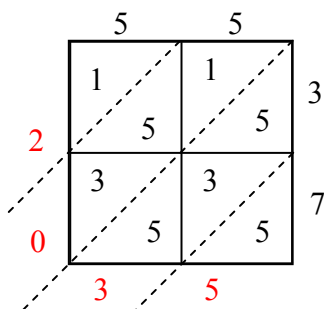
5) $96 \times 28 =$



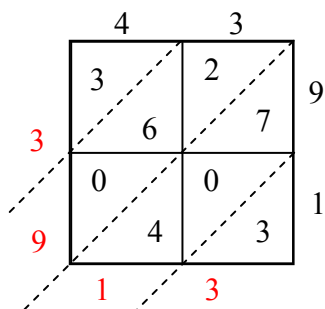
6) $30 \times 84 =$



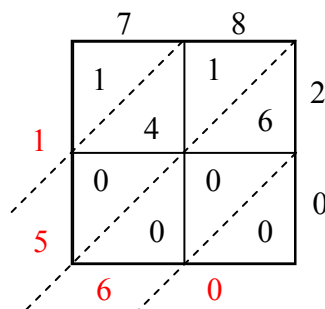
7) $55 \times 37 =$



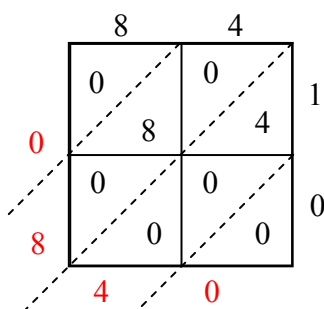
8) $43 \times 91 =$



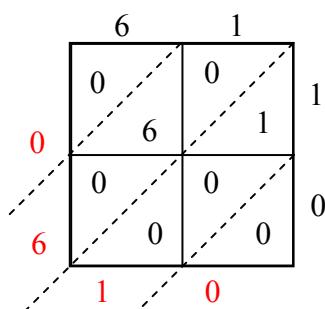
9) $78 \times 20 =$



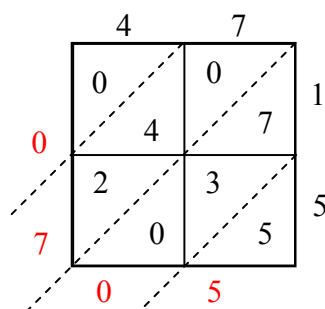
10) $84 \times 10 =$



11) $61 \times 10 =$



12) $47 \times 15 =$



ОТВЕТЫ

1. 3 069
2. 5 394
3. 736
4. 2 590
5. 2 688
6. 2 520
7. 2 035
8. 3 913
9. 1 560
10. 840
11. 610
12. 705