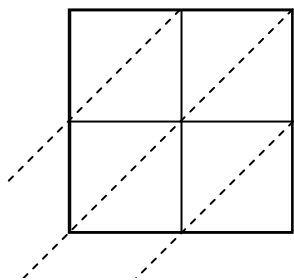


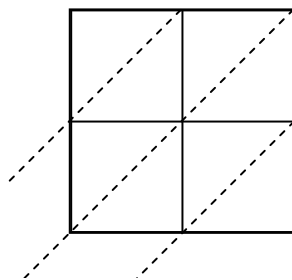


Используйте пространственную решетку для умножения, чтобы решить задачу.

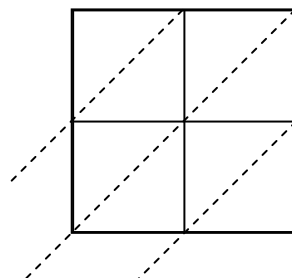
1) $27 \times 78 =$



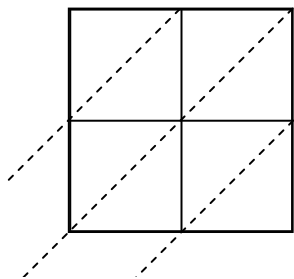
2) $39 \times 51 =$



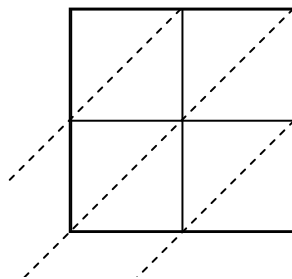
3) $54 \times 95 =$



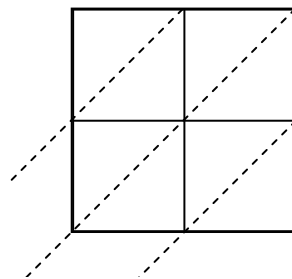
4) $79 \times 28 =$



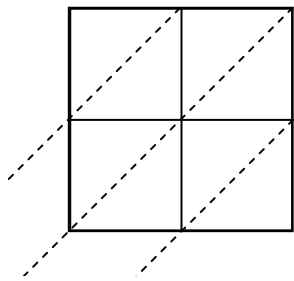
5) $56 \times 14 =$



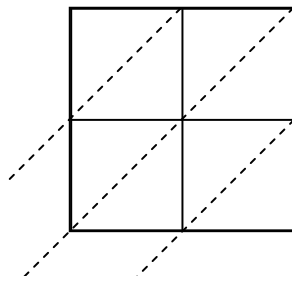
6) $23 \times 46 =$



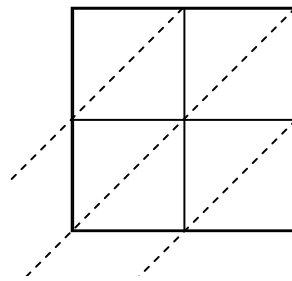
7) $49 \times 10 =$



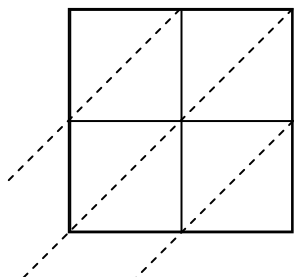
8) $49 \times 15 =$



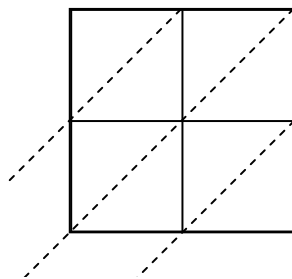
9) $22 \times 85 =$



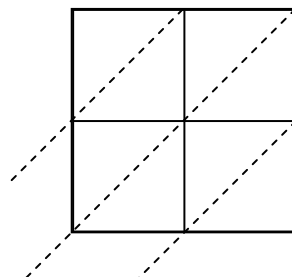
10) $62 \times 17 =$



11) $92 \times 41 =$



12) $85 \times 63 =$



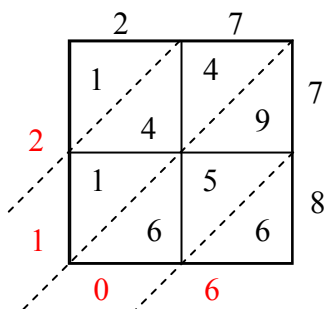
ОТВЕТЫ

1. _____
2. _____
3. _____
4. _____
5. _____
6. _____
7. _____
8. _____
9. _____
10. _____
11. _____
12. _____

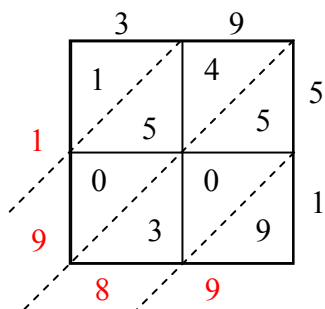


Используйте пространственную решетку для умножения, чтобы решить задачу.

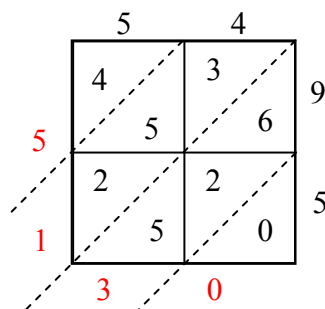
1) $27 \times 78 =$



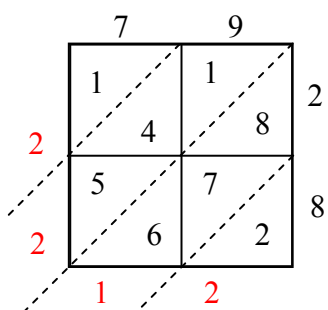
2) $39 \times 51 =$



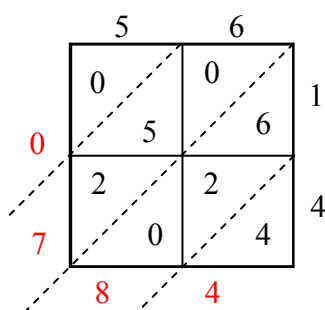
3) $54 \times 95 =$



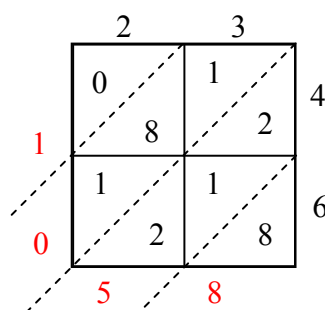
4) $79 \times 28 =$



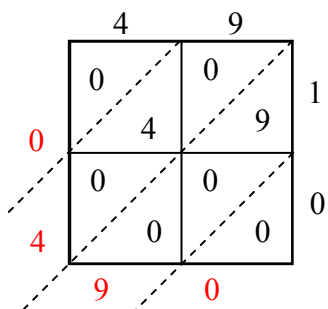
5) $56 \times 14 =$



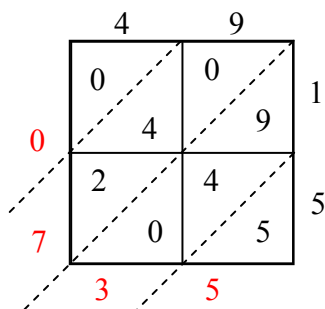
6) $23 \times 46 =$



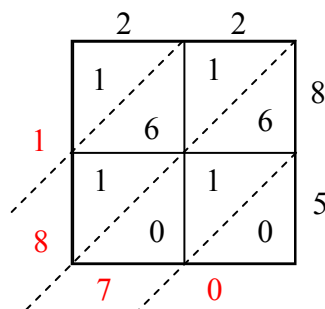
7) $49 \times 10 =$



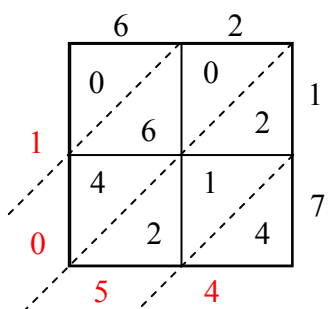
8) $49 \times 15 =$



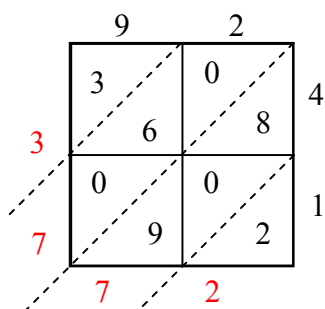
9) $22 \times 85 =$



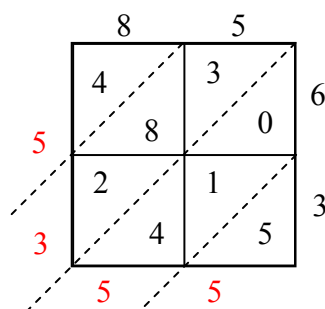
10) $62 \times 17 =$



11) $92 \times 41 =$



12) $85 \times 63 =$



ОТВЕТЫ

1. 2 106
2. 1 989
3. 5 130
4. 2 212
5. 784
6. 1 058
7. 490
8. 735
9. 1 870
10. 1 054
11. 3 772
12. 5 355