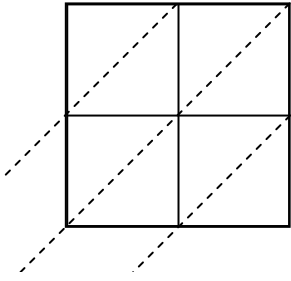




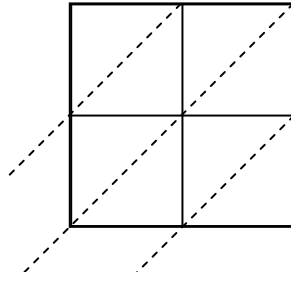
Используйте пространственную решетку для умножения, чтобы решить задачу.

ОТВЕТЫ

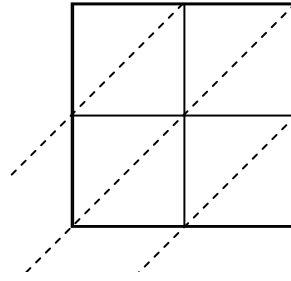
1) $61 \times 44 =$



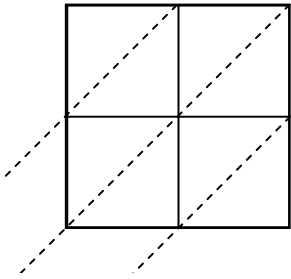
2) $81 \times 36 =$



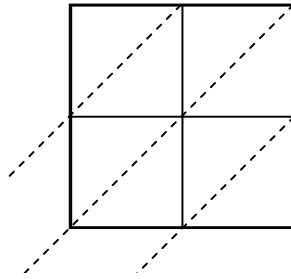
3) $87 \times 96 =$



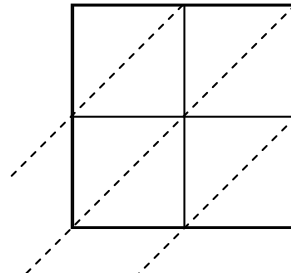
4) $65 \times 45 =$



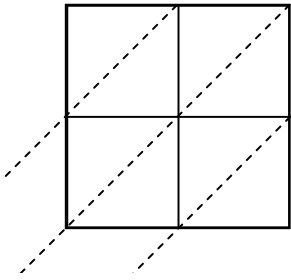
5) $97 \times 95 =$



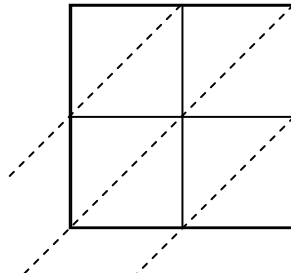
6) $85 \times 62 =$



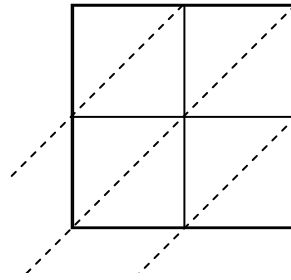
7) $51 \times 32 =$



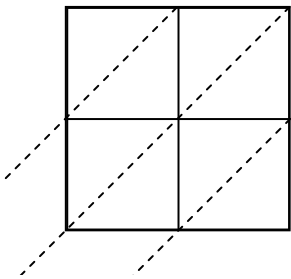
8) $46 \times 91 =$



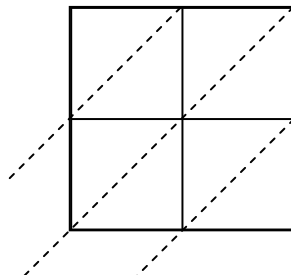
9) $93 \times 52 =$



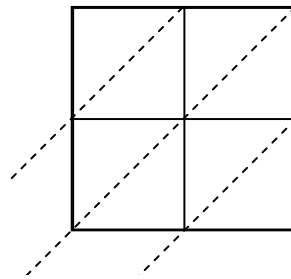
10) $10 \times 67 =$



11) $62 \times 99 =$



12) $34 \times 74 =$

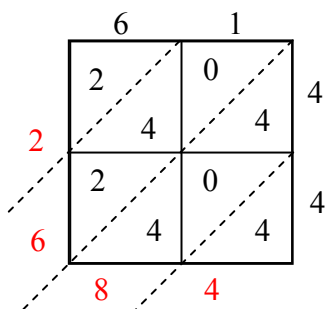


1. _____
2. _____
3. _____
4. _____
5. _____
6. _____
7. _____
8. _____
9. _____
10. _____
11. _____
12. _____

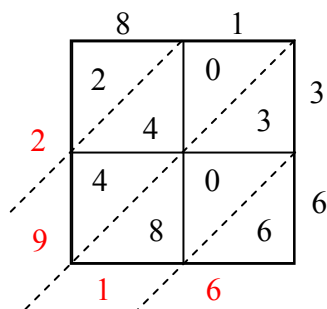


Используйте пространственную решетку для умножения, чтобы решить задачу.

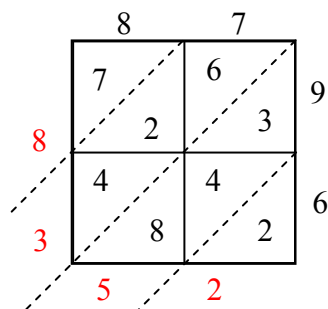
1) $61 \times 44 =$



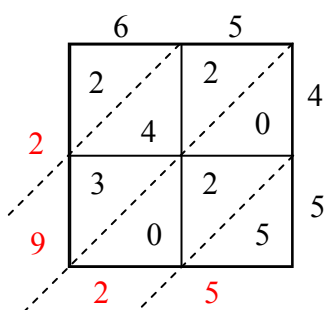
2) $81 \times 36 =$



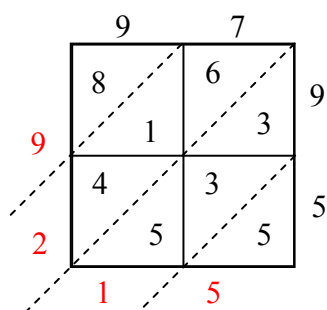
3) $87 \times 96 =$



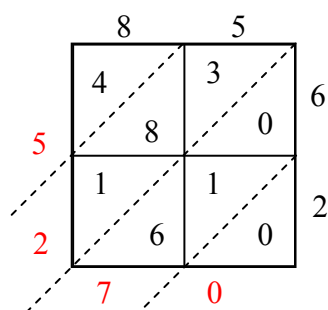
4) $65 \times 45 =$



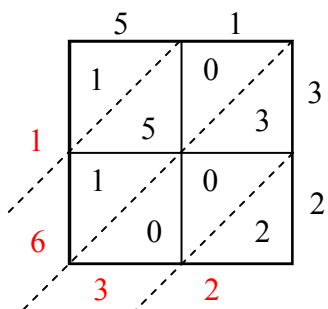
5) $97 \times 95 =$



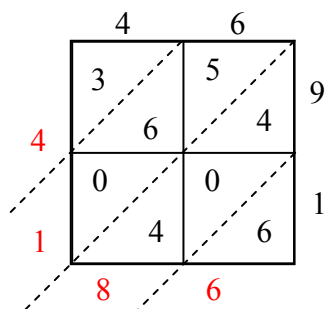
6) $85 \times 62 =$



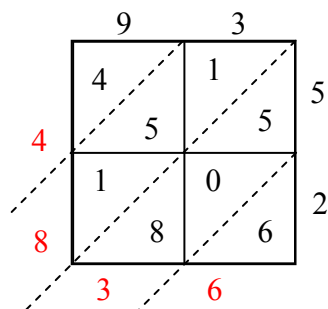
7) $51 \times 32 =$



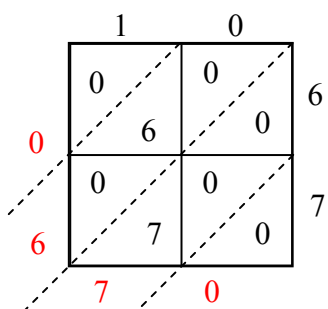
8) $46 \times 91 =$



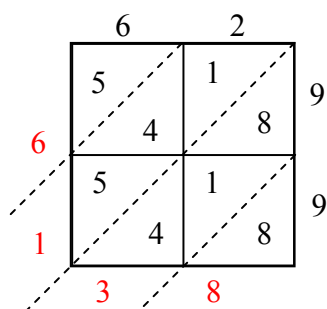
9) $93 \times 52 =$



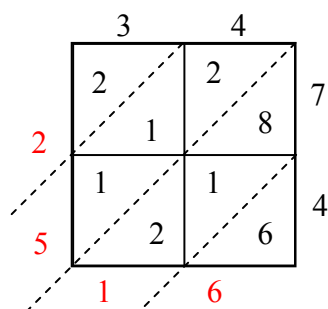
10) $10 \times 67 =$



11) $62 \times 99 =$



12) $34 \times 74 =$



ОТВЕТЫ

1. 2 684
2. 2 916
3. 8 352
4. 2 925
5. 9 215
6. 5 270
7. 1 632
8. 4 186
9. 4 836
10. 670
11. 6 138
12. 2 516