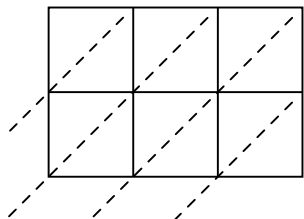


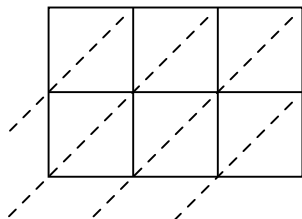


Используйте пространственную решетку для умножения, чтобы решить задачу.

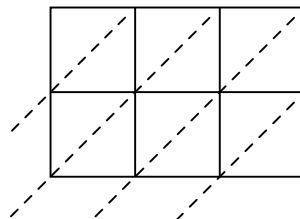
1)  $485 \times 11 =$



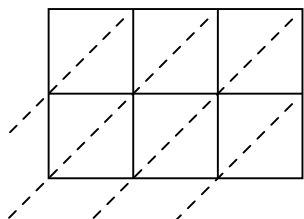
2)  $401 \times 55 =$



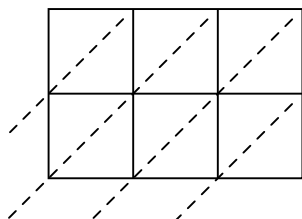
3)  $665 \times 39 =$



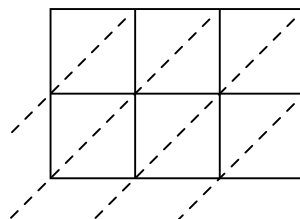
4)  $257 \times 58 =$



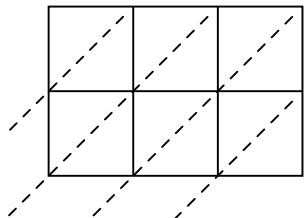
5)  $242 \times 51 =$



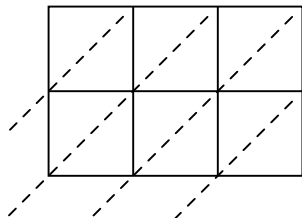
6)  $338 \times 18 =$



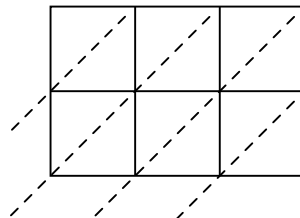
7)  $690 \times 32 =$



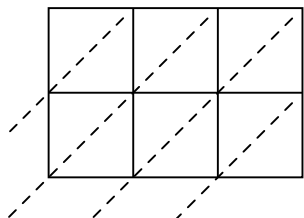
8)  $309 \times 90 =$



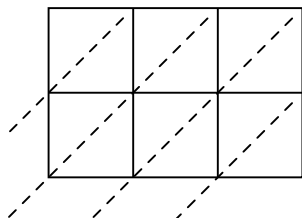
9)  $211 \times 95 =$



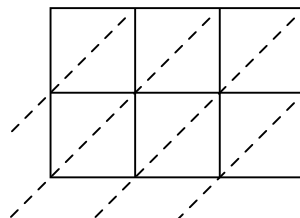
10)  $226 \times 83 =$



11)  $329 \times 59 =$



12)  $306 \times 62 =$



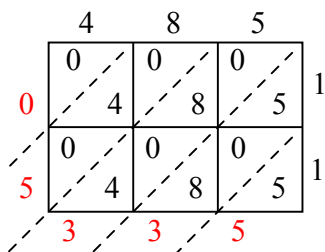
**ОТВЕТЫ**

1. \_\_\_\_\_
2. \_\_\_\_\_
3. \_\_\_\_\_
4. \_\_\_\_\_
5. \_\_\_\_\_
6. \_\_\_\_\_
7. \_\_\_\_\_
8. \_\_\_\_\_
9. \_\_\_\_\_
10. \_\_\_\_\_
11. \_\_\_\_\_
12. \_\_\_\_\_

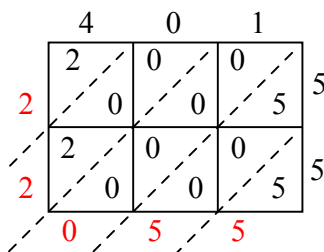


Используйте пространственную решетку для умножения, чтобы решить задачу.

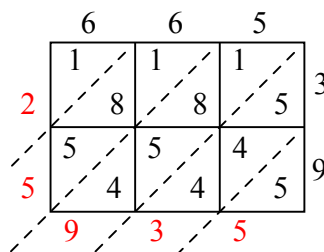
1)  $485 \times 11 =$



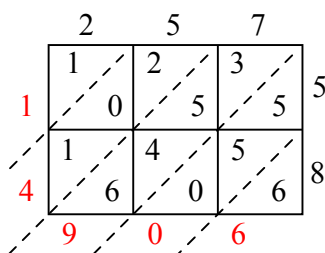
2)  $401 \times 55 =$



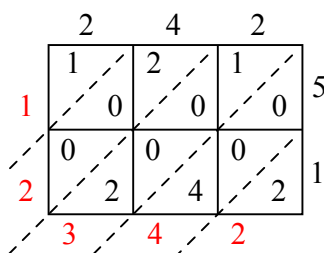
3)  $665 \times 39 =$



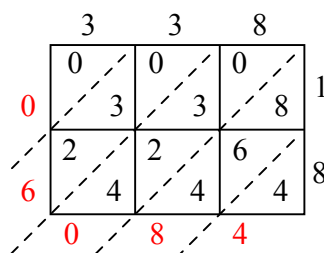
4)  $257 \times 58 =$



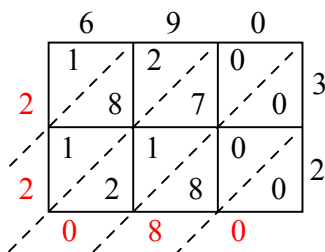
5)  $242 \times 51 =$



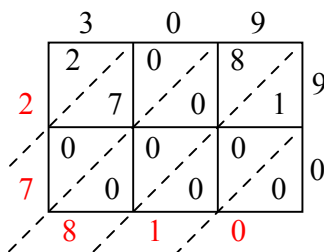
6)  $338 \times 18 =$



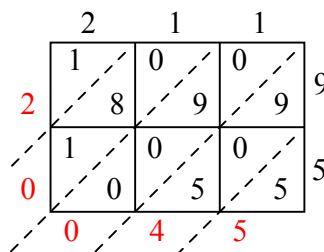
7)  $690 \times 32 =$



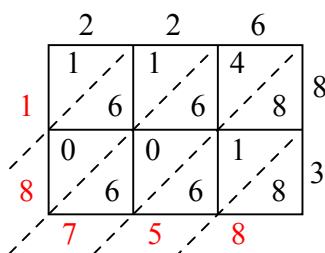
8)  $309 \times 90 =$



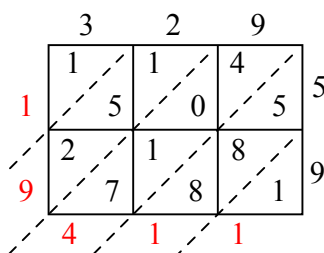
9)  $211 \times 95 =$



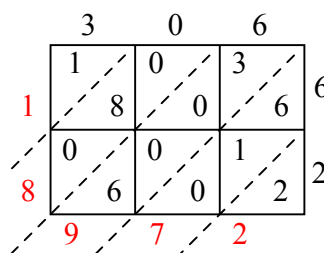
10)  $226 \times 83 =$



11)  $329 \times 59 =$



12)  $306 \times 62 =$



**Ответы**

1. 5 335

2. 22 055

3. 25 935

4. 14 906

5. 12 342

6. 6 084

7. 22 080

8. 27 810

9. 20 045

10. 18 758

11. 19 411

12. 18 972