



Используйте пространственную решетку для умножения, чтобы решить задачу.

1) $828 \times 35 =$



2) $953 \times 85 =$



3) $706 \times 55 =$



4) $862 \times 57 =$



5) $350 \times 99 =$



6) $488 \times 19 =$



7) $543 \times 53 =$



8) $387 \times 83 =$



9) $702 \times 60 =$



10) $244 \times 16 =$



11) $848 \times 21 =$



12) $673 \times 70 =$



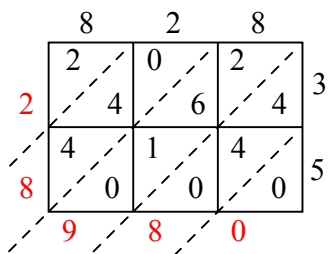
ОТВЕТЫ

1. _____
2. _____
3. _____
4. _____
5. _____
6. _____
7. _____
8. _____
9. _____
10. _____
11. _____
12. _____

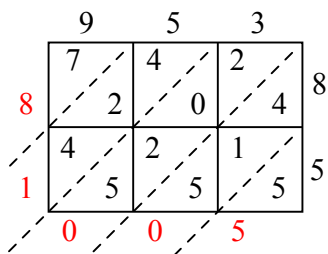


Используйте пространственную решетку для умножения, чтобы решить задачу.

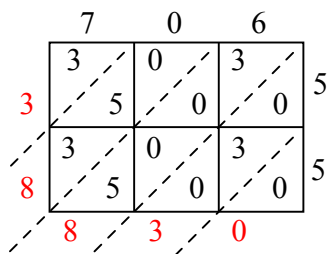
1) $828 \times 35 =$



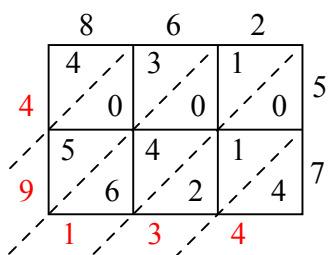
2) $953 \times 85 =$



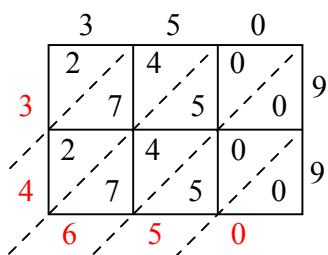
3) $706 \times 55 =$



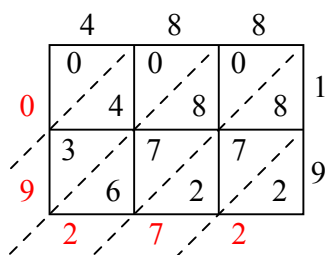
4) $862 \times 57 =$



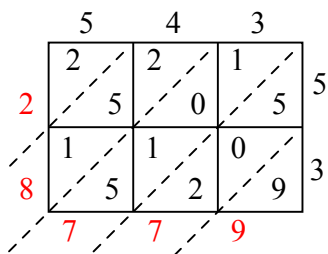
5) $350 \times 99 =$



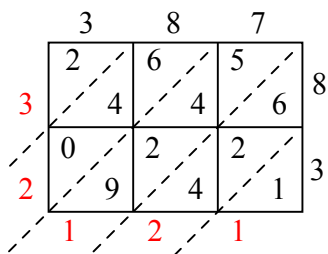
6) $488 \times 19 =$



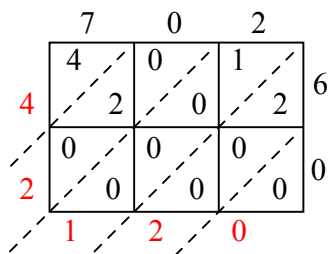
7) $543 \times 53 =$



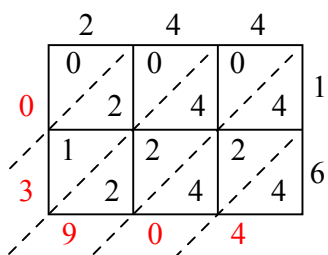
8) $387 \times 83 =$



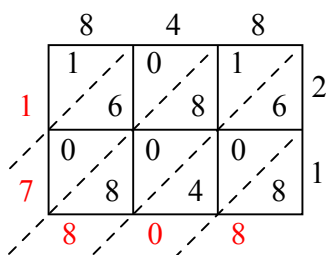
9) $702 \times 60 =$



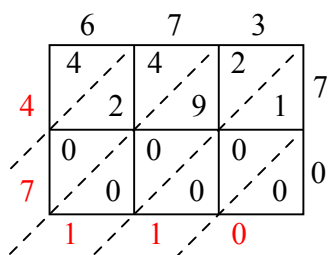
10) $244 \times 16 =$



11) $848 \times 21 =$



12) $673 \times 70 =$



Ответы

1. 28 980

2. 81 005

3. 38 830

4. 49 134

5. 34 650

6. 9 272

7. 28 779

8. 32 121

9. 42 120

10. 3 904

11. 17 808

12. 47 110