

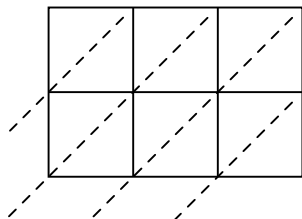


Используйте пространственную решетку для умножения, чтобы решить задачу.

1) $189 \times 31 =$



2) $633 \times 58 =$



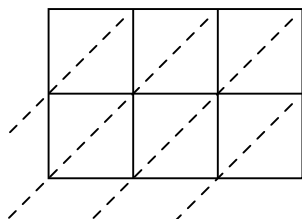
3) $856 \times 16 =$



4) $254 \times 35 =$



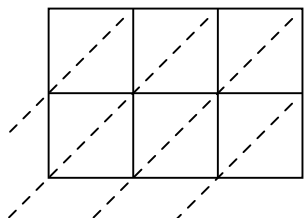
5) $186 \times 28 =$



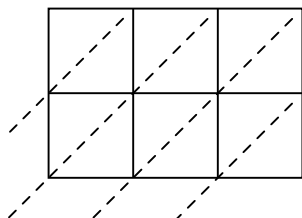
6) $390 \times 84 =$



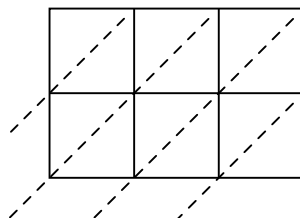
7) $325 \times 37 =$



8) $493 \times 91 =$



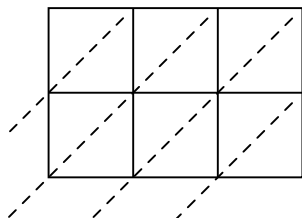
9) $348 \times 20 =$



10) $894 \times 10 =$



11) $961 \times 10 =$



12) $317 \times 15 =$



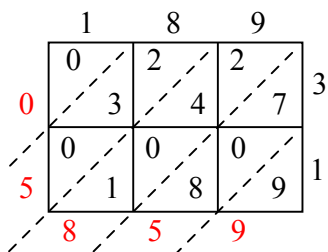
Отвeты

1. _____
2. _____
3. _____
4. _____
5. _____
6. _____
7. _____
8. _____
9. _____
10. _____
11. _____
12. _____

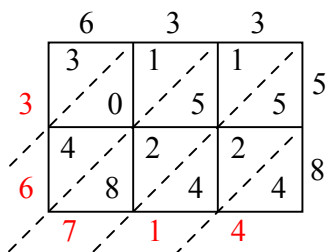


Используйте пространственную решетку для умножения, чтобы решить задачу.

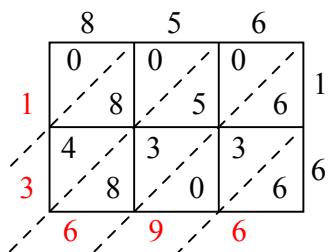
1) $189 \times 31 =$



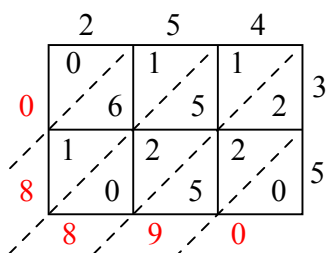
2) $633 \times 58 =$



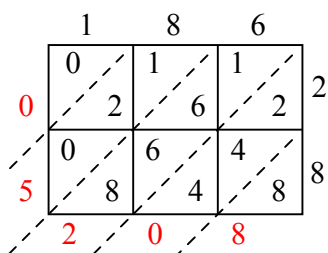
3) $856 \times 16 =$



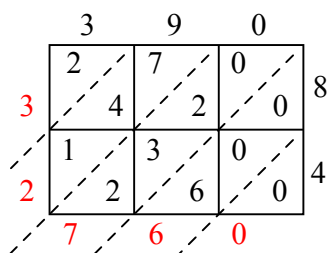
4) $254 \times 35 =$



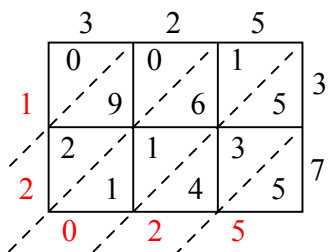
5) $186 \times 28 =$



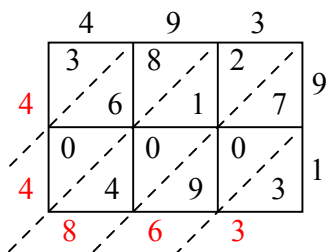
6) $390 \times 84 =$



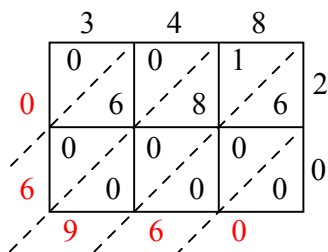
7) $325 \times 37 =$



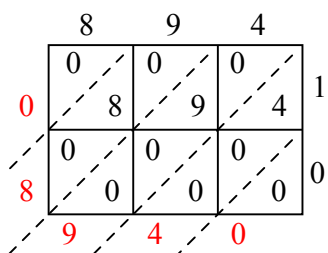
8) $493 \times 91 =$



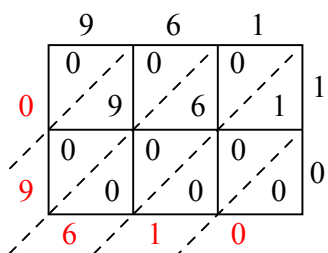
9) $348 \times 20 =$



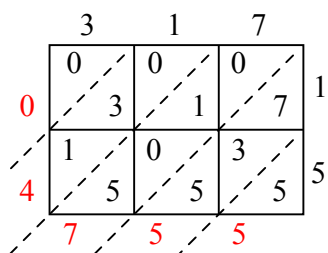
10) $894 \times 10 =$



11) $961 \times 10 =$



12) $317 \times 15 =$



Ответы

1. 5 859

2. 36 714

3. 13 696

4. 8 890

5. 5 208

6. 32 760

7. 12 025

8. 44 863

9. 6 960

10. 8 940

11. 9 610

12. 4 755