

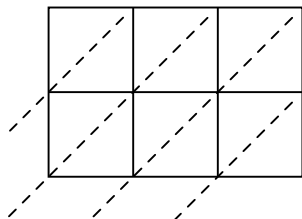


Используйте пространственную решетку для умножения, чтобы решить задачу.

1) $617 \times 36 =$



2) $902 \times 60 =$



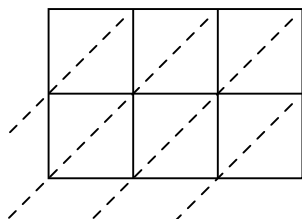
3) $936 \times 11 =$



4) $506 \times 97 =$



5) $375 \times 92 =$



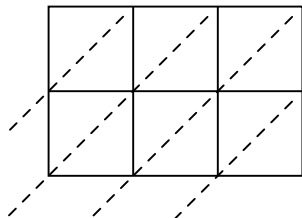
6) $944 \times 94 =$



7) $773 \times 32 =$



8) $444 \times 54 =$



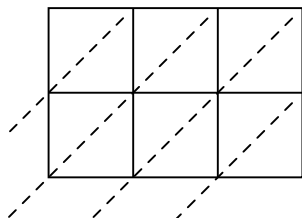
9) $950 \times 35 =$



10) $608 \times 49 =$



11) $289 \times 74 =$



12) $530 \times 32 =$



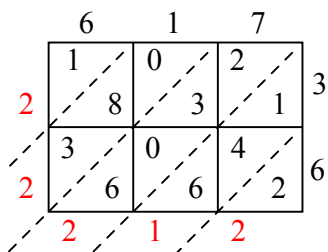
ОТВЕТЫ

1. _____
2. _____
3. _____
4. _____
5. _____
6. _____
7. _____
8. _____
9. _____
10. _____
11. _____
12. _____

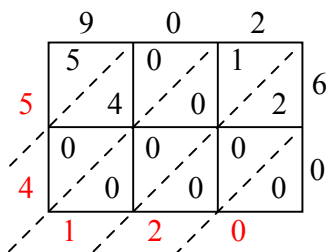


Используйте пространственную решетку для умножения, чтобы решить задачу.

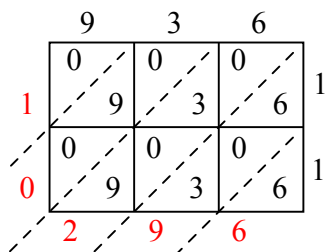
1) $617 \times 36 =$



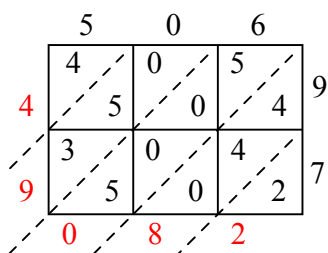
2) $902 \times 60 =$



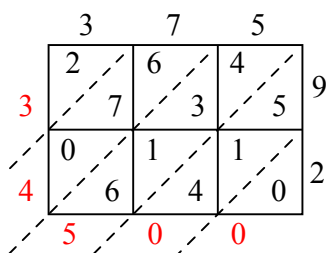
3) $936 \times 11 =$



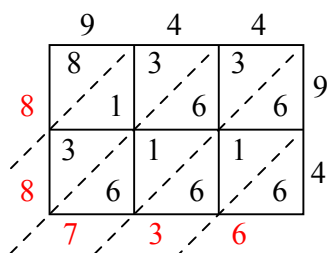
4) $506 \times 97 =$



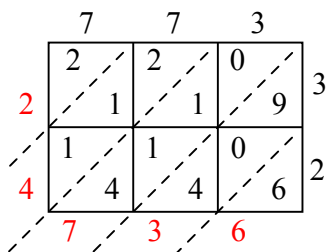
5) $375 \times 92 =$



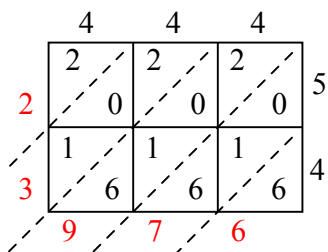
6) $944 \times 94 =$



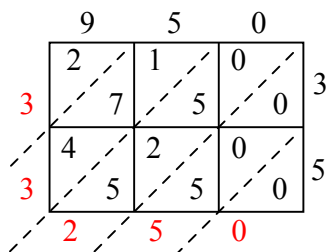
7) $773 \times 32 =$



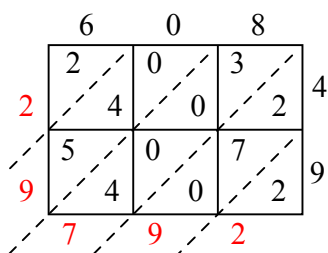
8) $444 \times 54 =$



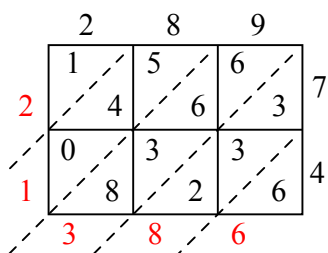
9) $950 \times 35 =$



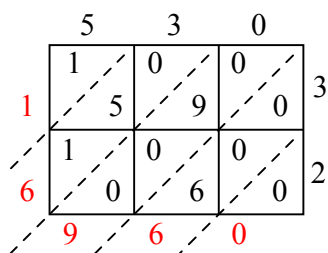
10) $608 \times 49 =$



11) $289 \times 74 =$



12) $530 \times 32 =$



Отвѣты

1. 22 212

2. 54 120

3. 10 296

4. 49 082

5. 34 500

6. 88 736

7. 24 736

8. 23 976

9. 33 250

10. 29 792

11. 21 386

12. 16 960