

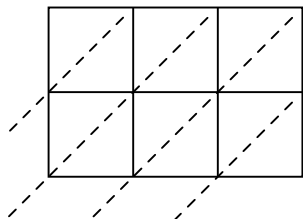


Используйте пространственную решетку для умножения, чтобы решить задачу.

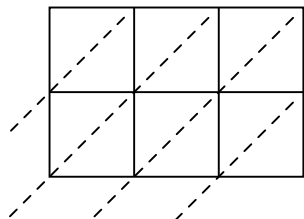
1) $341 \times 47 =$



2) $768 \times 31 =$



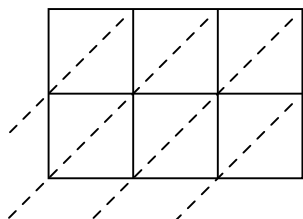
3) $166 \times 52 =$



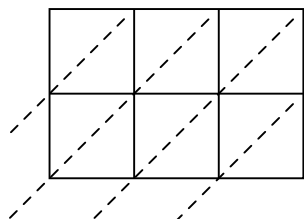
4) $126 \times 82 =$



5) $130 \times 86 =$



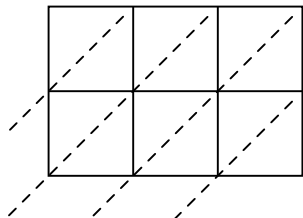
6) $692 \times 58 =$



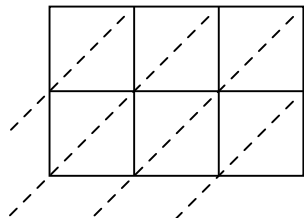
7) $268 \times 37 =$



8) $535 \times 68 =$



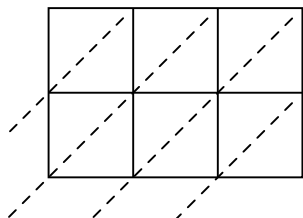
9) $631 \times 39 =$



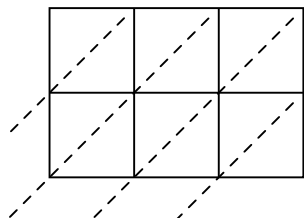
10) $404 \times 13 =$



11) $173 \times 57 =$



12) $394 \times 75 =$



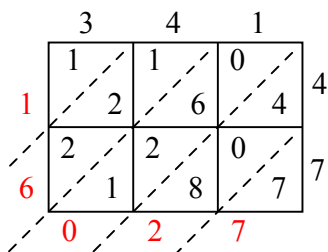
ОТВЕТЫ

1. _____
2. _____
3. _____
4. _____
5. _____
6. _____
7. _____
8. _____
9. _____
10. _____
11. _____
12. _____

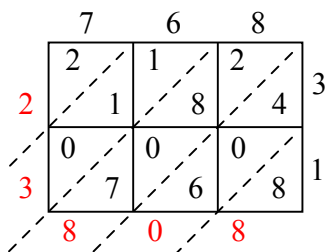


Используйте пространственную решетку для умножения, чтобы решить задачу.

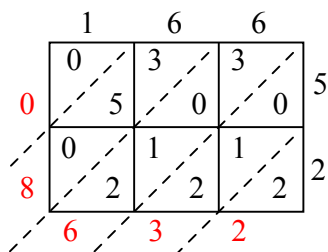
1) $341 \times 47 =$



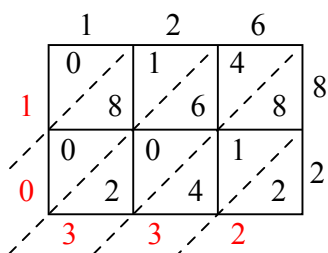
2) $768 \times 31 =$



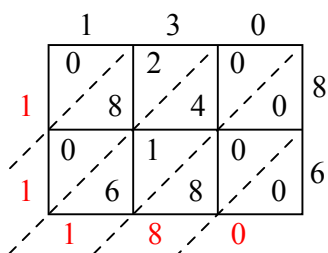
3) $166 \times 52 =$



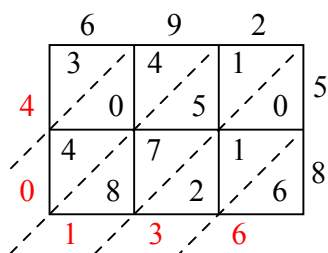
4) $126 \times 82 =$



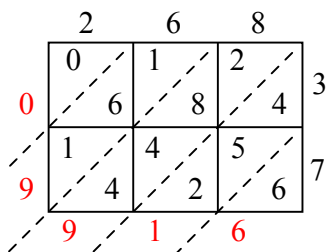
5) $130 \times 86 =$



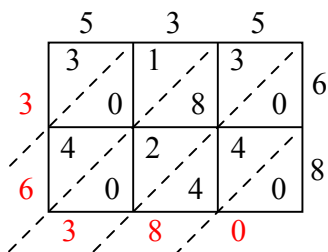
6) $692 \times 58 =$



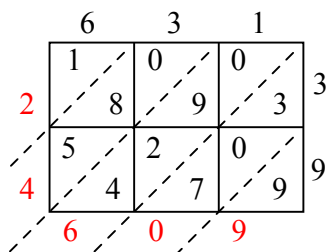
7) $268 \times 37 =$



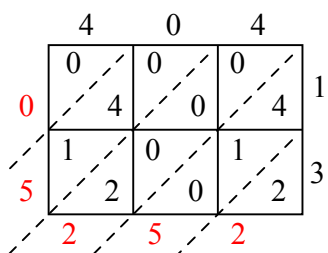
8) $535 \times 68 =$



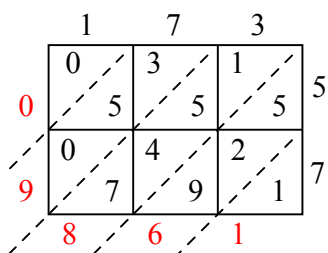
9) $631 \times 39 =$



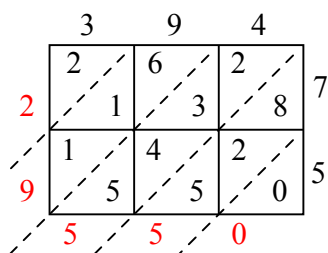
10) $404 \times 13 =$



11) $173 \times 57 =$



12) $394 \times 75 =$



Отвѣты

1. 16 027

2. 23 808

3. 8 632

4. 10 332

5. 11 180

6. 40 136

7. 9 916

8. 36 380

9. 24 609

10. 5 252

11. 9 861

12. 29 550