

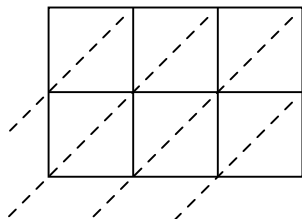


Используйте пространственную решетку для умножения, чтобы решить задачу.

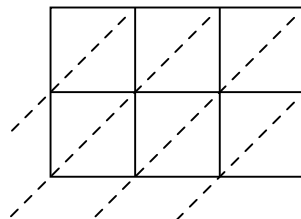
1) $636 \times 32 =$



2) $339 \times 54 =$



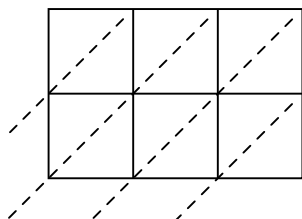
3) $637 \times 28 =$



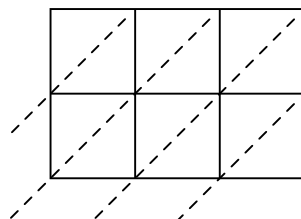
4) $525 \times 91 =$



5) $768 \times 79 =$



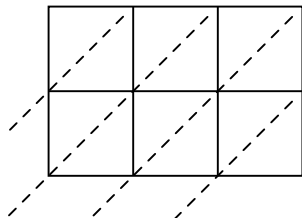
6) $686 \times 73 =$



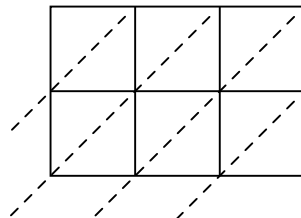
7) $675 \times 69 =$



8) $714 \times 45 =$



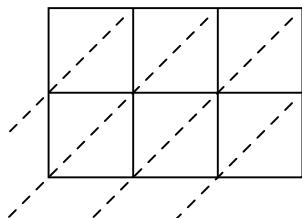
9) $389 \times 41 =$



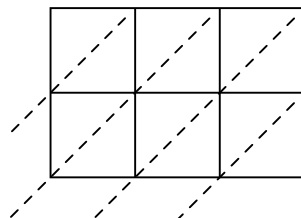
10) $135 \times 24 =$



11) $363 \times 59 =$



12) $417 \times 39 =$



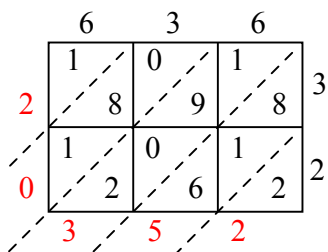
Отвeты

1. _____
2. _____
3. _____
4. _____
5. _____
6. _____
7. _____
8. _____
9. _____
10. _____
11. _____
12. _____

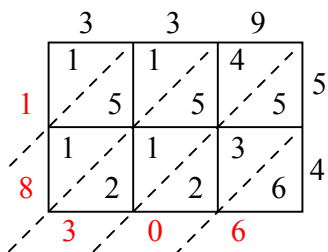


Используйте пространственную решетку для умножения, чтобы решить задачу.

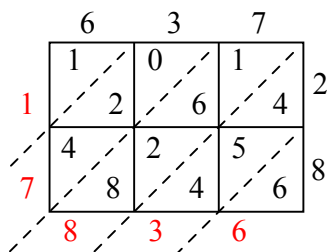
1) $636 \times 32 =$



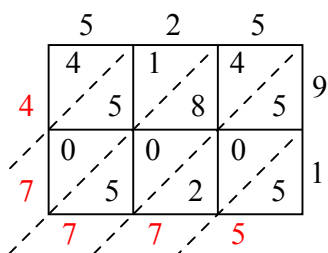
2) $339 \times 54 =$



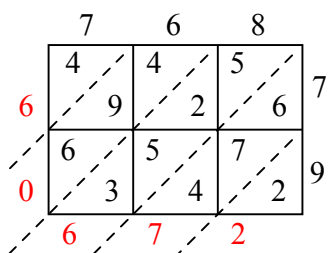
3) $637 \times 28 =$



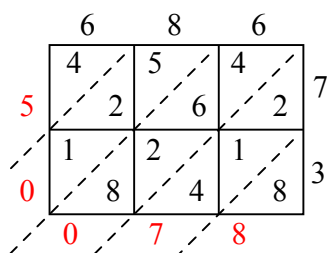
4) $525 \times 91 =$



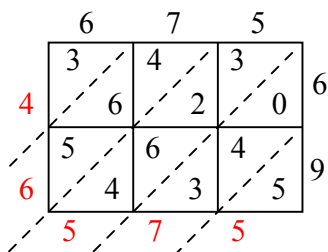
5) $768 \times 79 =$



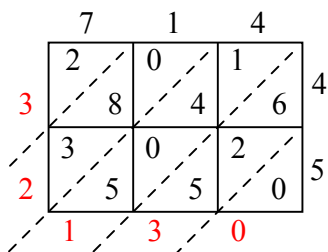
6) $686 \times 73 =$



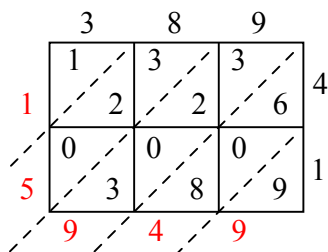
7) $675 \times 69 =$



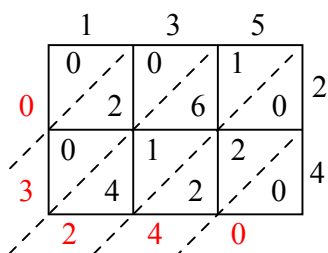
8) $714 \times 45 =$



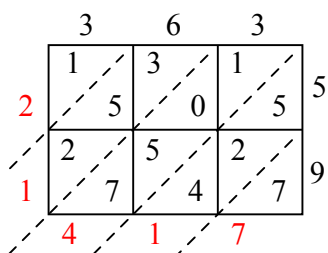
9) $389 \times 41 =$



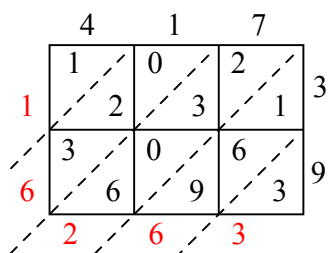
10) $135 \times 24 =$



11) $363 \times 59 =$



12) $417 \times 39 =$



Отвѣты

1. 20 352

2. 18 306

3. 17 836

4. 47 775

5. 60 672

6. 50 078

7. 46 575

8. 32 130

9. 15 949

10. 3 240

11. 21 417

12. 16 263