

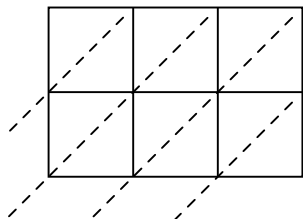


Используйте пространственную решетку для умножения, чтобы решить задачу.

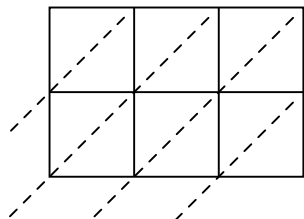
1)  $718 \times 14 =$



2)  $428 \times 34 =$



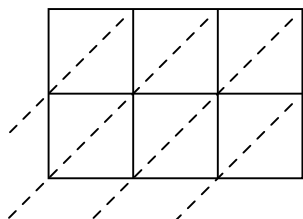
3)  $823 \times 37 =$



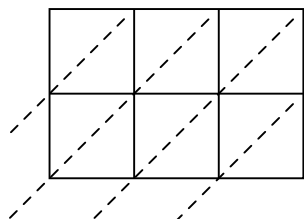
4)  $171 \times 34 =$



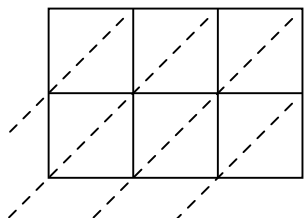
5)  $745 \times 82 =$



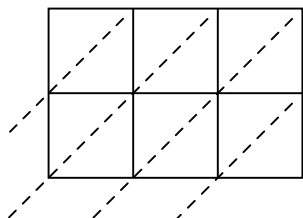
6)  $314 \times 99 =$



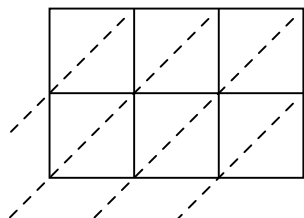
7)  $920 \times 70 =$



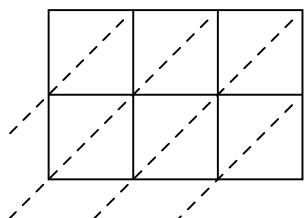
8)  $664 \times 98 =$



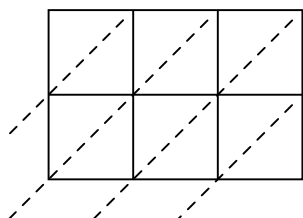
9)  $281 \times 53 =$



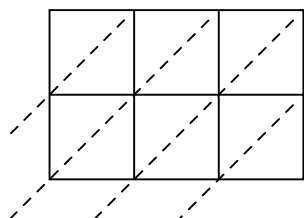
10)  $530 \times 53 =$



11)  $104 \times 75 =$



12)  $375 \times 51 =$



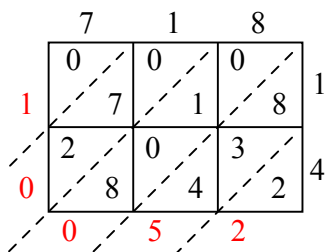
**ОТВЕТЫ**

1. \_\_\_\_\_
2. \_\_\_\_\_
3. \_\_\_\_\_
4. \_\_\_\_\_
5. \_\_\_\_\_
6. \_\_\_\_\_
7. \_\_\_\_\_
8. \_\_\_\_\_
9. \_\_\_\_\_
10. \_\_\_\_\_
11. \_\_\_\_\_
12. \_\_\_\_\_

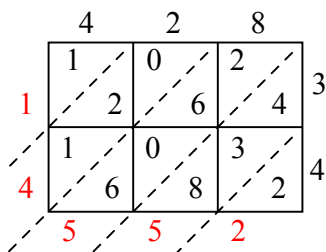


Используйте пространственную решетку для умножения, чтобы решить задачу.

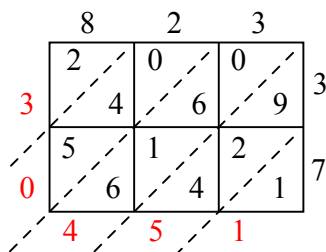
1)  $718 \times 14 =$



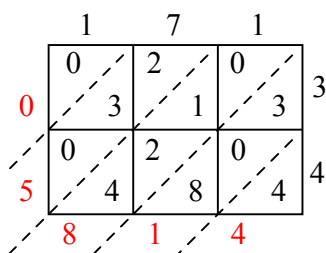
2)  $428 \times 34 =$



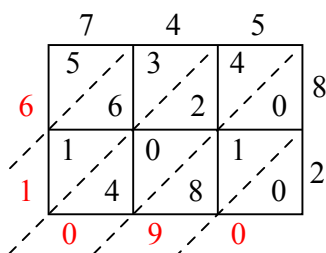
3)  $823 \times 37 =$



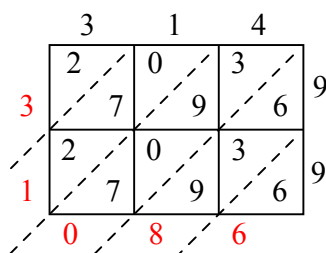
4)  $171 \times 34 =$



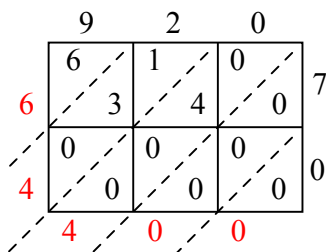
5)  $745 \times 82 =$



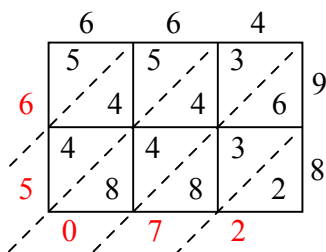
6)  $314 \times 99 =$



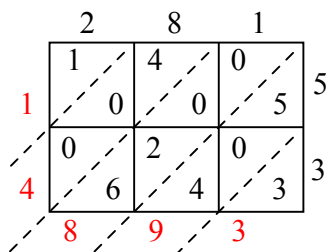
7)  $920 \times 70 =$



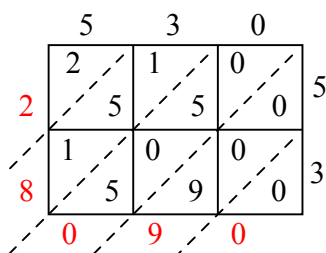
8)  $664 \times 98 =$



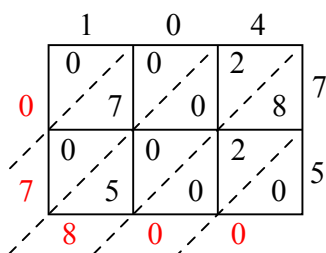
9)  $281 \times 53 =$



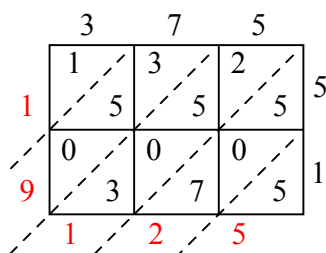
10)  $530 \times 53 =$



11)  $104 \times 75 =$



12)  $375 \times 51 =$



**Отвѣты**

1. 10 052

2. 14 552

3. 30 451

4. 5 814

5. 61 090

6. 31 086

7. 64 400

8. 65 072

9. 14 893

10. 28 090

11. 7 800

12. 19 125