

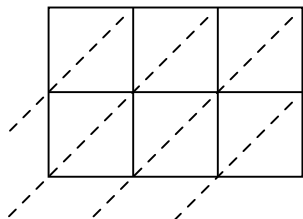


Используйте пространственную решетку для умножения, чтобы решить задачу.

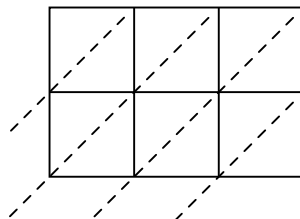
1) $591 \times 54 =$



2) $722 \times 75 =$



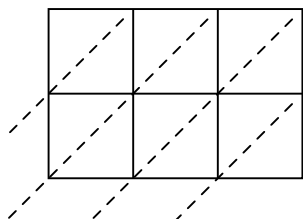
3) $524 \times 33 =$



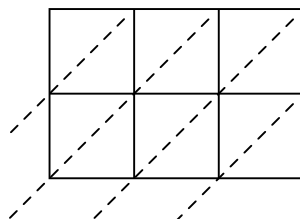
4) $698 \times 33 =$



5) $447 \times 39 =$



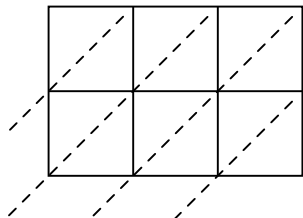
6) $111 \times 53 =$



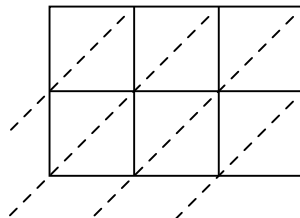
7) $696 \times 63 =$



8) $568 \times 79 =$



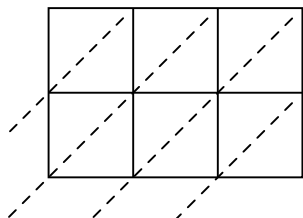
9) $907 \times 26 =$



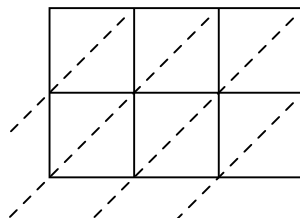
10) $399 \times 30 =$



11) $798 \times 26 =$



12) $712 \times 46 =$



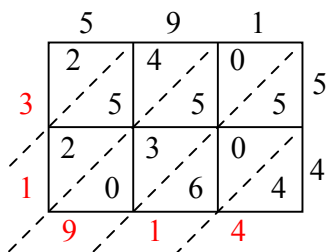
Ответы

1. _____
2. _____
3. _____
4. _____
5. _____
6. _____
7. _____
8. _____
9. _____
10. _____
11. _____
12. _____

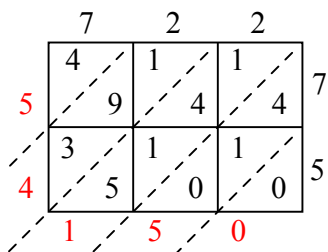


Используйте пространственную решетку для умножения, чтобы решить задачу.

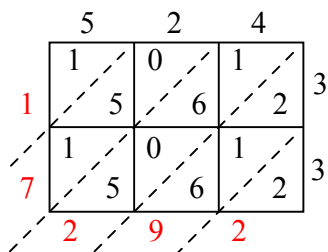
1) $591 \times 54 =$



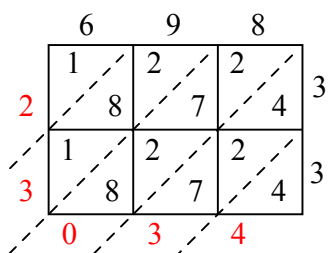
2) $722 \times 75 =$



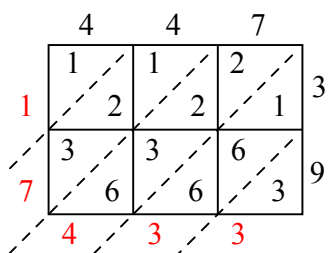
3) $524 \times 33 =$



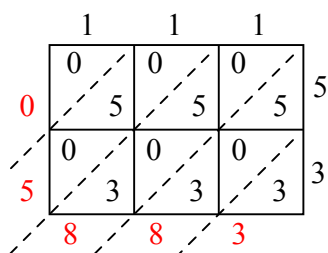
4) $698 \times 33 =$



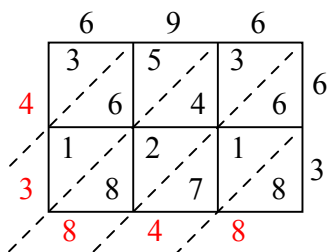
5) $447 \times 39 =$



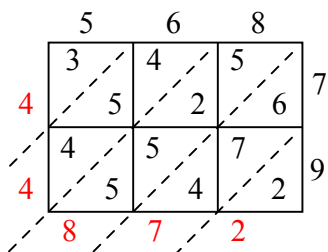
6) $111 \times 53 =$



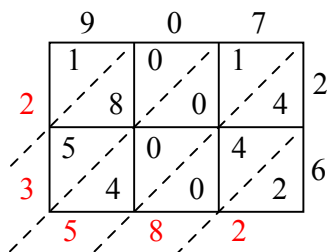
7) $696 \times 63 =$



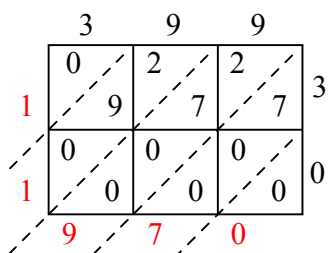
8) $568 \times 79 =$



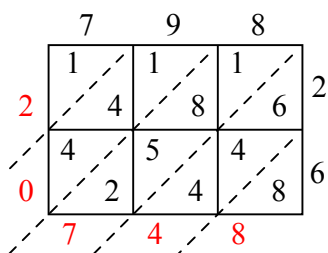
9) $907 \times 26 =$



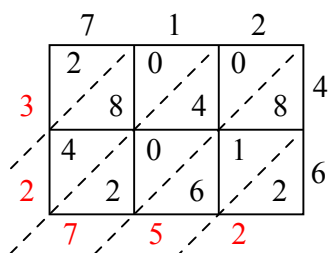
10) $399 \times 30 =$



11) $798 \times 26 =$



12) $712 \times 46 =$



Ответы

1. 31 914

2. 54 150

3. 17 292

4. 23 034

5. 17 433

6. 5 883

7. 43 848

8. 44 872

9. 23 582

10. 11 970

11. 20 748

12. 32 752