

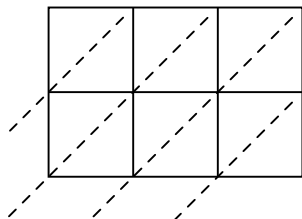


Используйте пространственную решетку для умножения, чтобы решить задачу.

1) $133 \times 55 =$



2) $680 \times 53 =$



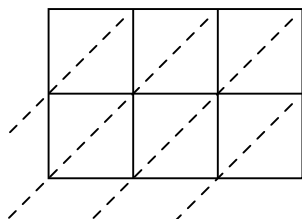
3) $362 \times 51 =$



4) $703 \times 44 =$



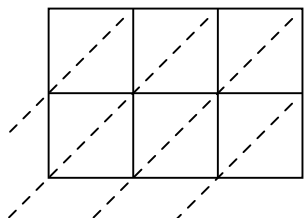
5) $560 \times 57 =$



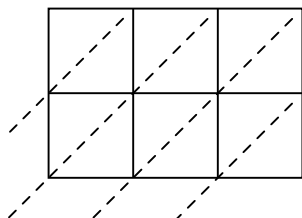
6) $637 \times 90 =$



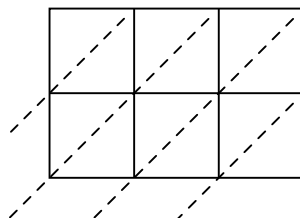
7) $711 \times 62 =$



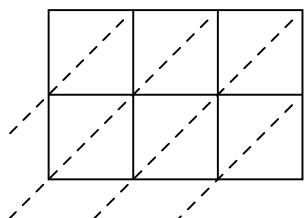
8) $361 \times 36 =$



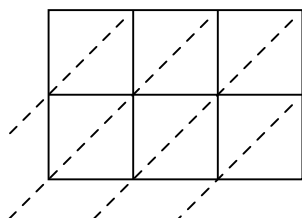
9) $743 \times 53 =$



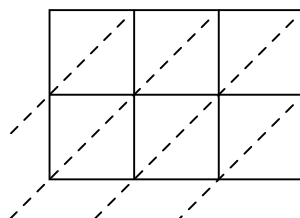
10) $344 \times 41 =$



11) $279 \times 94 =$



12) $862 \times 89 =$



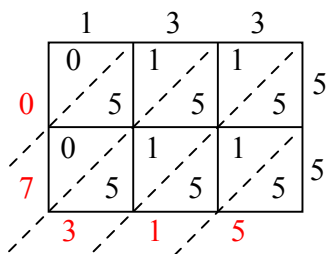
ОТВЕТЫ

1. _____
2. _____
3. _____
4. _____
5. _____
6. _____
7. _____
8. _____
9. _____
10. _____
11. _____
12. _____

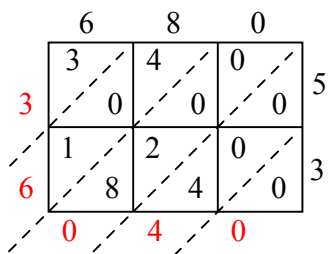


Используйте пространственную решетку для умножения, чтобы решить задачу.

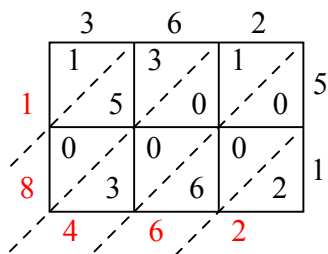
1) $133 \times 55 =$



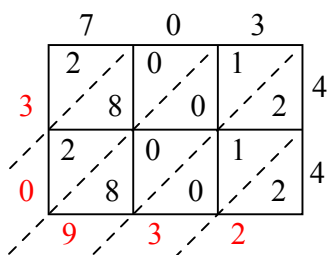
2) $680 \times 53 =$



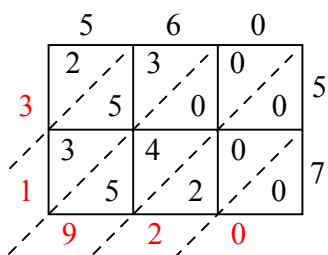
3) $362 \times 51 =$



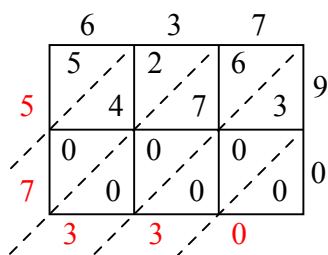
4) $703 \times 44 =$



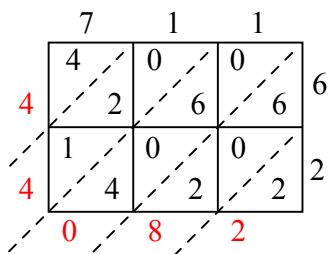
5) $560 \times 57 =$



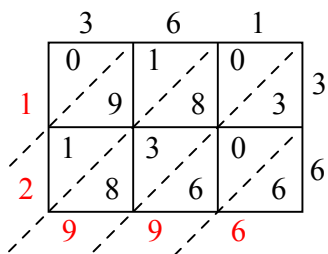
6) $637 \times 90 =$



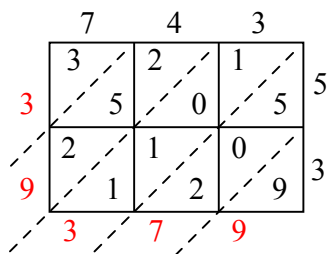
7) $711 \times 62 =$



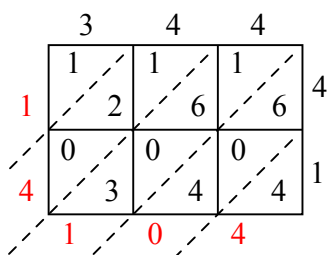
8) $361 \times 36 =$



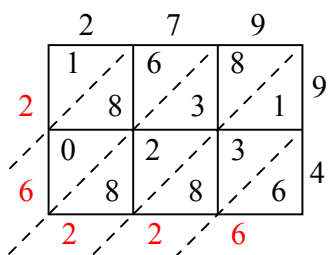
9) $743 \times 53 =$



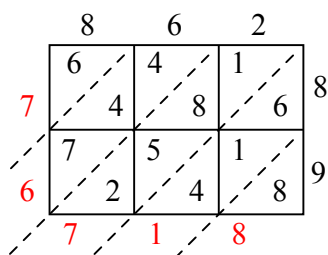
10) $344 \times 41 =$



11) $279 \times 94 =$



12) $862 \times 89 =$



Отвѣты

1. 7 315
2. 36 040
3. 18 462
4. 30 932
5. 31 920
6. 57 330
7. 44 082
8. 12 996
9. 39 379
10. 14 104
11. 26 226
12. 76 718