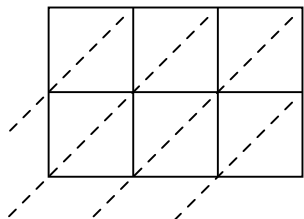




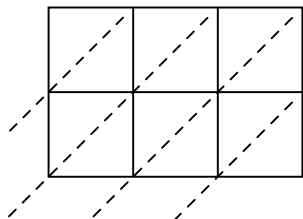
Используйте пространственную решетку для умножения, чтобы решить задачу.

ОТВЕТЫ

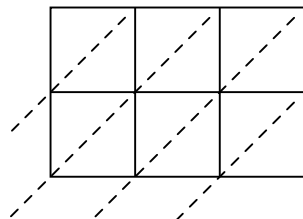
1) $327 \times 91 =$



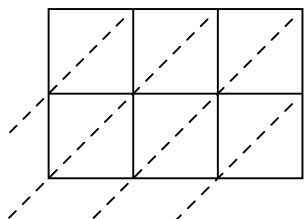
2) $391 \times 95 =$



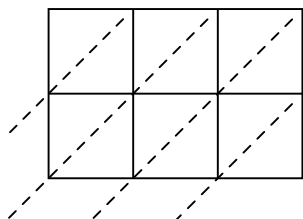
3) $847 \times 52 =$



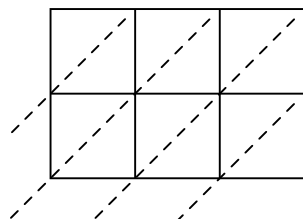
4) $855 \times 13 =$



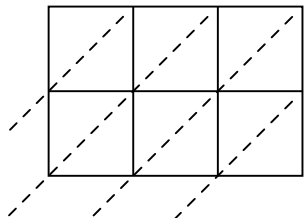
5) $316 \times 32 =$



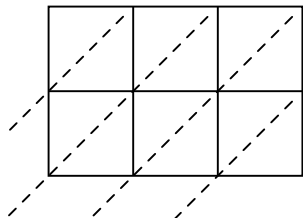
6) $242 \times 38 =$



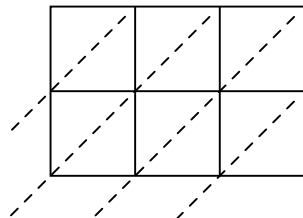
7) $700 \times 53 =$



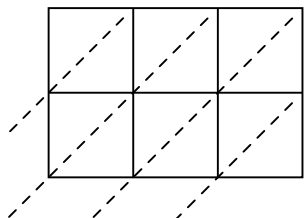
8) $117 \times 89 =$



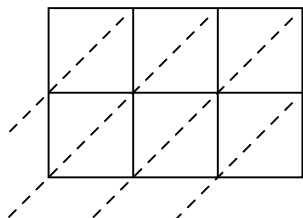
9) $539 \times 54 =$



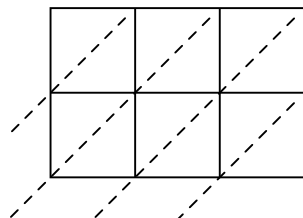
10) $489 \times 67 =$



11) $927 \times 46 =$



12) $899 \times 59 =$

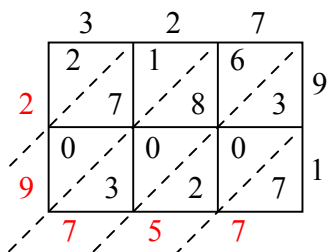


1. _____
2. _____
3. _____
4. _____
5. _____
6. _____
7. _____
8. _____
9. _____
10. _____
11. _____
12. _____

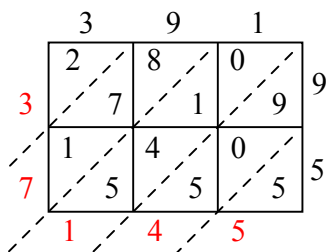


Используйте пространственную решетку для умножения, чтобы решить задачу.

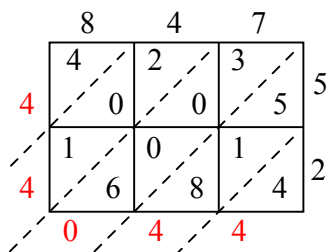
1) $327 \times 91 =$



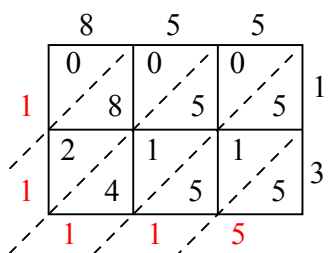
2) $391 \times 95 =$



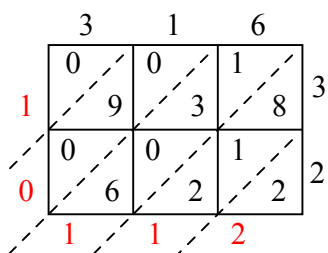
3) $847 \times 52 =$



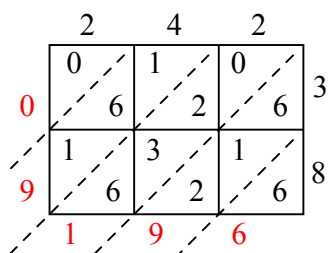
4) $855 \times 13 =$



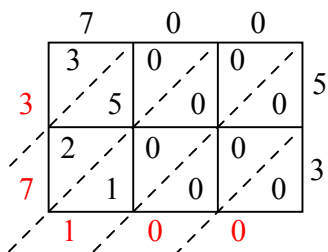
5) $316 \times 32 =$



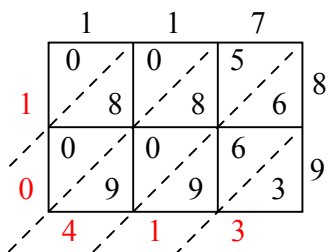
6) $242 \times 38 =$



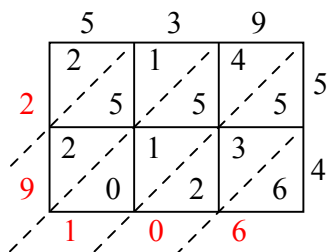
7) $700 \times 53 =$



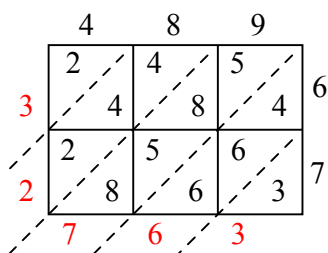
8) $117 \times 89 =$



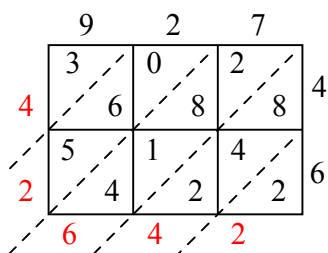
9) $539 \times 54 =$



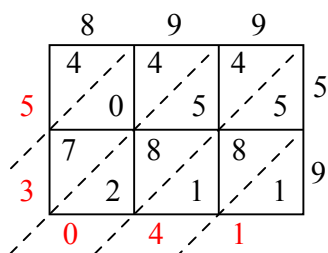
10) $489 \times 67 =$



11) $927 \times 46 =$



12) $899 \times 59 =$



Отвeты

1. **29 757**

2. **37 145**

3. **44 044**

4. **11 115**

5. **10 112**

6. **9 196**

7. **37 100**

8. **10 413**

9. **29 106**

10. **32 763**

11. **42 642**

12. **53 041**