





Напишите уравнение для выражения таблицы и затем найдите количество фигур.

Ответы


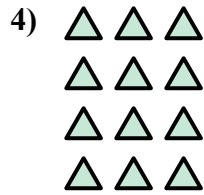



об. $3 \times 4 = 12$

1. _____

2. _____

3. _____

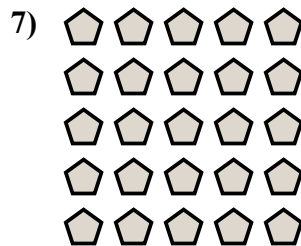


4. _____

5. _____

6. _____

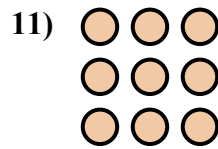
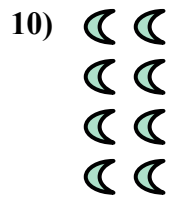

7. _____



8. _____

9. _____

10. _____

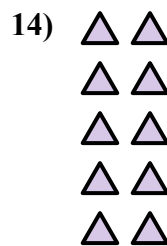
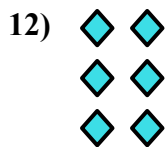


11. _____

12. _____

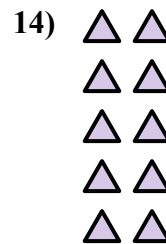
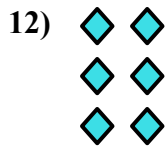
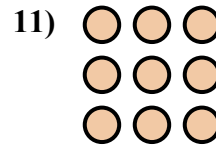
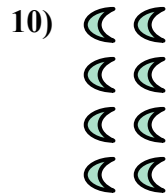

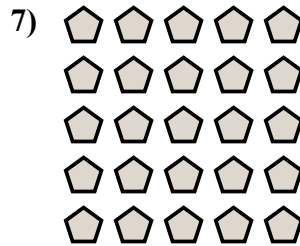

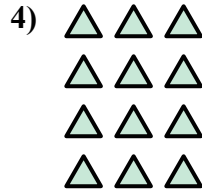



13. _____

14. _____





Напишите уравнение для выражения таблицы и затем найдите количество фигур.



Ответы

об. $3 \times 4 = 12$

1. $2 \times 5 = 10$

2. $3 \times 5 = 15$

3. $4 \times 5 = 20$

4. $4 \times 3 = 12$

5. $5 \times 3 = 15$

6. $2 \times 3 = 6$

7. $5 \times 5 = 25$

8. $2 \times 2 = 4$

9. $4 \times 4 = 16$

10. $4 \times 2 = 8$

11. $3 \times 3 = 9$

12. $3 \times 2 = 6$

13. $2 \times 4 = 8$

14. $5 \times 2 = 10$