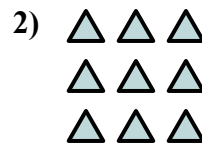




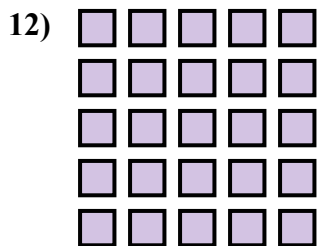
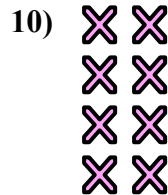
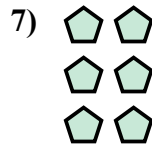

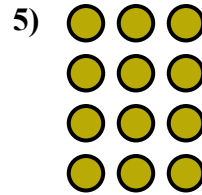



Напишите уравнение для выражения таблицы и затем найдите количество фигур.

Ответы




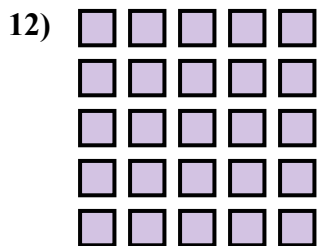
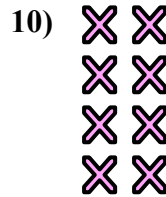
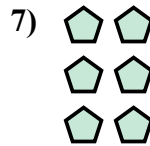

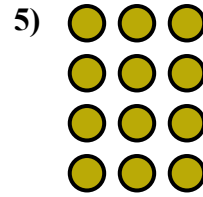

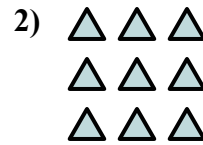

об. $2 \times 2 = 4$



- 1. _____
- 2. _____
- 3. _____
- 4. _____
- 5. _____
- 6. _____
- 7. _____
- 8. _____
- 9. _____
- 10. _____
- 11. _____
- 12. _____
- 13. _____
- 14. _____



Напишите уравнение для выражения таблицы и затем найдите количество фигур.



Ответы

об. $2 \times 2 = 4$

1. $5 \times 2 = 10$

2. $3 \times 3 = 9$

3. $2 \times 3 = 6$

4. $3 \times 4 = 12$

5. $4 \times 3 = 12$

6. $5 \times 4 = 20$

7. $3 \times 2 = 6$

8. $5 \times 3 = 15$

9. $2 \times 5 = 10$

10. $4 \times 2 = 8$

11. $3 \times 5 = 15$

12. $5 \times 5 = 25$

13. $2 \times 4 = 8$

14. $4 \times 4 = 16$