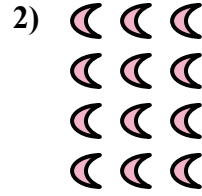
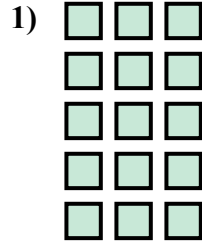





Напишите уравнение для выражения таблицы и затем найдите количество фигур.

Отвeты



об. $3 \times 3 = 9$

1. _____

2. _____

3. _____

4. _____

5. _____

6. _____

7. _____

8. _____

9. _____




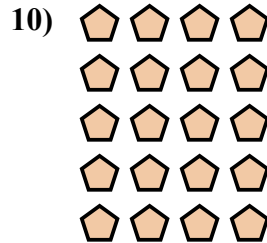


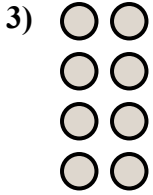
10. _____

11. _____

12. _____

13. _____

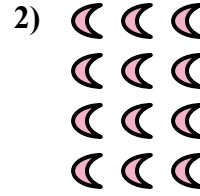
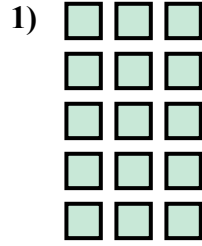

14. _____





Напишите уравнение для выражения таблицы и затем найдите количество фигур.

Ответы



об. $3 \times 3 = 9$

1. $5 \times 3 = 15$

2. $4 \times 3 = 12$

3. $4 \times 2 = 8$

4. $2 \times 3 = 6$

5. $5 \times 2 = 10$

6. $3 \times 4 = 12$

7. $4 \times 4 = 16$

8. $3 \times 2 = 6$

9. $2 \times 5 = 10$

10. $5 \times 4 = 20$

11. $5 \times 5 = 25$

12. $2 \times 4 = 8$

13. $4 \times 5 = 20$

14. $2 \times 2 = 4$

