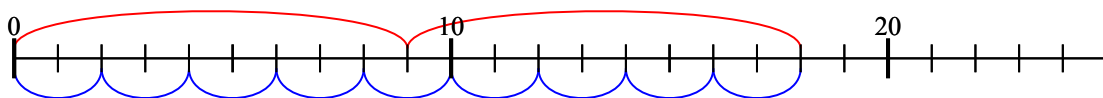




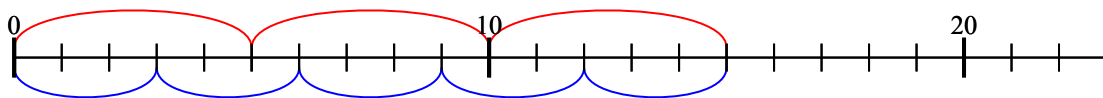
Используйте числовую прямую для решения задачи.

1) $2 \times 9 =$
 $9 \times 2 =$



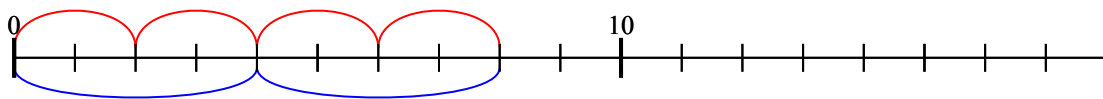
1. 18

2) $3 \times 5 =$
 $5 \times 3 =$



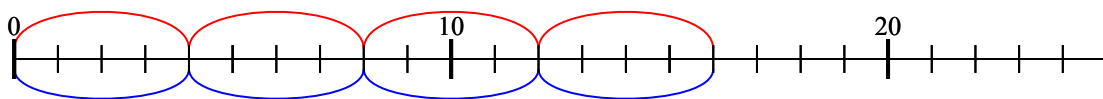
2. 15

3) $4 \times 2 =$
 $2 \times 4 =$



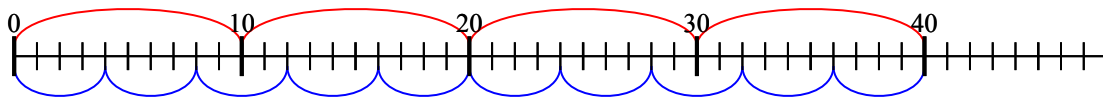
3. 8

4) $4 \times 4 =$
 $4 \times 4 =$



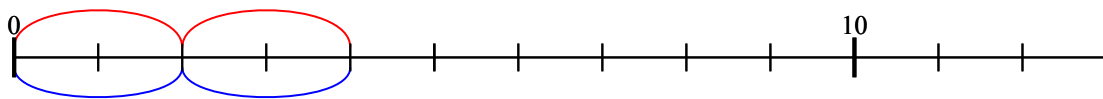
4. 16

5) $4 \times 10 =$
 $10 \times 4 =$



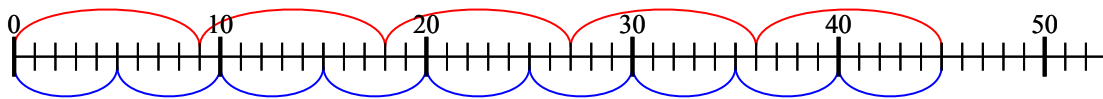
5. 40

6) $2 \times 2 =$
 $2 \times 2 =$



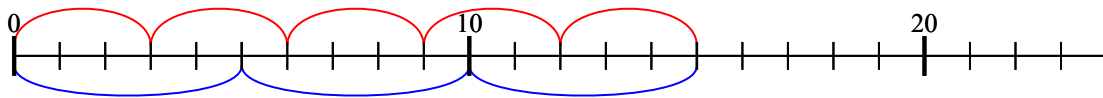
6. 4

7) $5 \times 9 =$
 $9 \times 5 =$



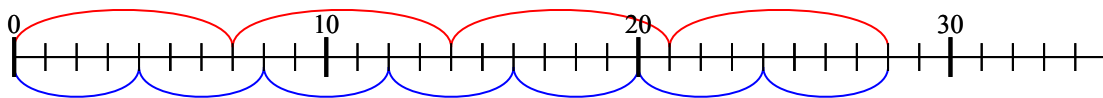
7. 45

8) $5 \times 3 =$
 $3 \times 5 =$



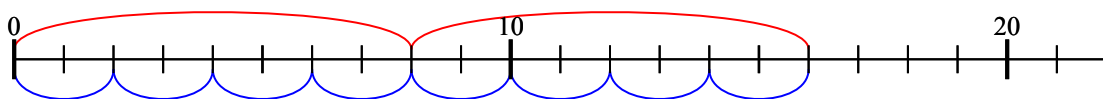
8. 15

9) $4 \times 7 =$
 $7 \times 4 =$



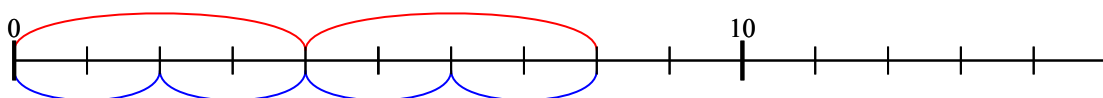
9. 28

10) $2 \times 8 =$
 $8 \times 2 =$



10. 16

11) $2 \times 4 =$
 $4 \times 2 =$



11. 8

ОТВЕТЫ