





Используйте матрицу для решения задачи.


1) $16 \times 20 =$




2) $16 \times 10 =$




3) $17 \times 10 =$




4) $10 \times 15 =$



5) $10 \times 17 =$



6) $19 \times 10 =$



Ответы

1. _____

2. _____

3. _____

4. _____

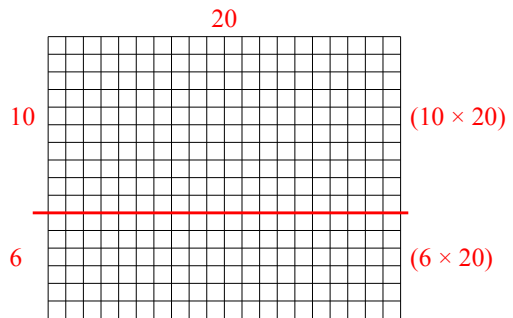
5. _____

6. _____

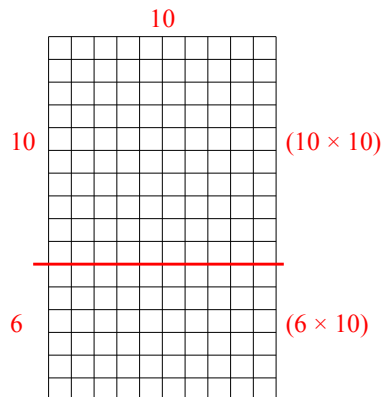


Используйте матрицу для решения задачи.

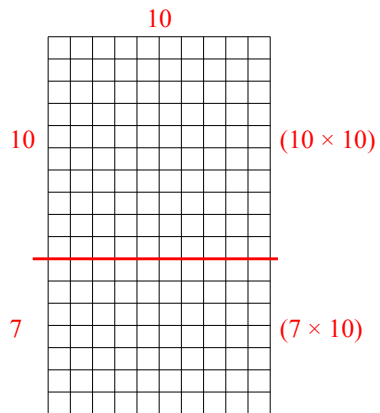
1) $16 \times 20 =$



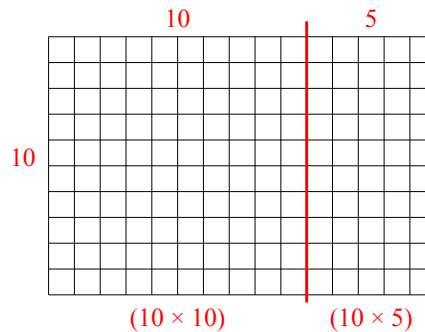
2) $16 \times 10 =$



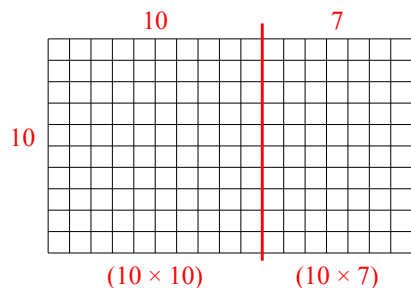
3) $17 \times 10 =$



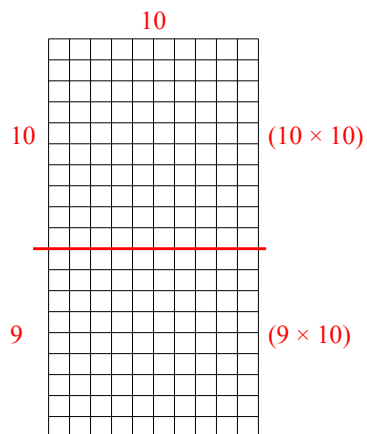
4) $10 \times 15 =$



5) $10 \times 17 =$



6) $19 \times 10 =$



Ответы

1. 320

2. 160

3. 170

4. 150

5. 170

6. 190