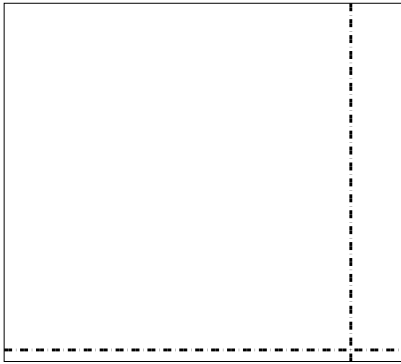





Используйте матрицу для решения задачи.


1) $62 \times 69 =$



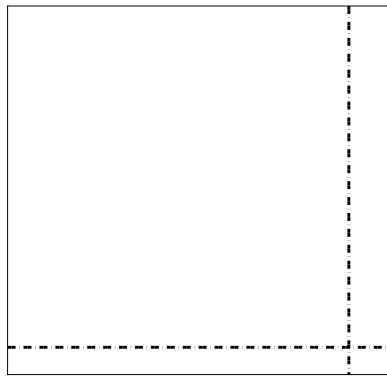
2) $53 \times 39 =$



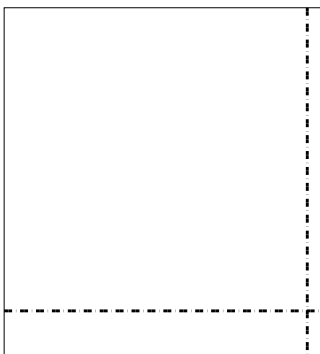
3) $57 \times 66 =$




4) $54 \times 57 =$



5) $46 \times 42 =$



6) $34 \times 27 =$



Отвeты

1. _____

2. _____

3. _____

4. _____

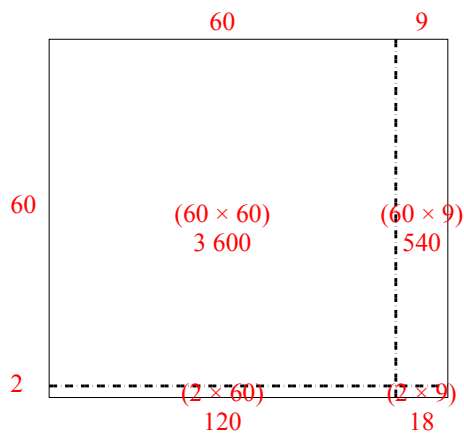
5. _____

6. _____

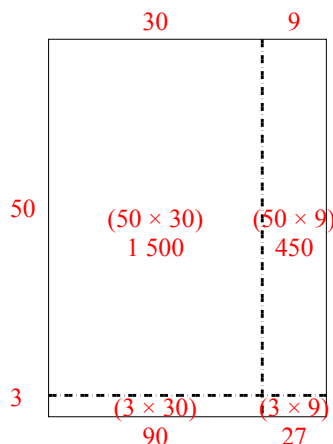


Используйте матрицу для решения задачи.

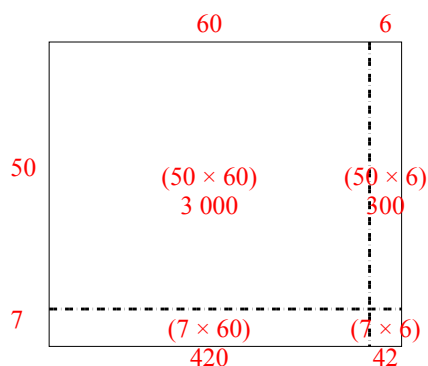
1) $62 \times 69 =$



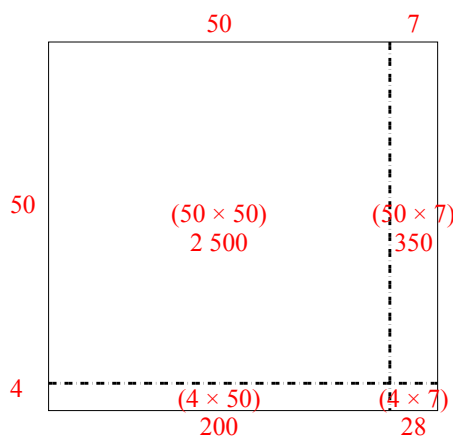
2) $53 \times 39 =$



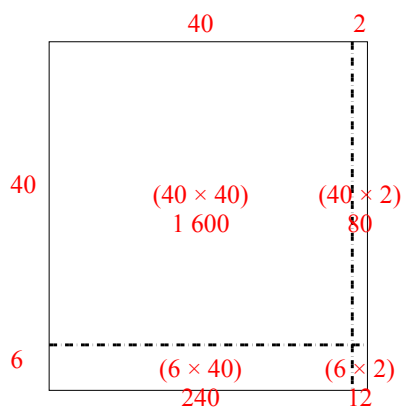
3) $57 \times 66 =$



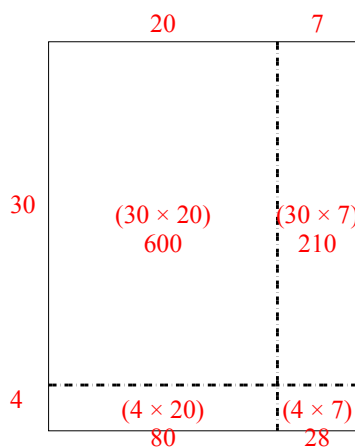
4) $54 \times 57 =$



5) $46 \times 42 =$



6) $34 \times 27 =$



Отвѣты

1. 4 278

2. 2 067

3. 3 762

4. 3 078

5. 1 932

6. 918