





Используйте матрицу для решения задачи.


1)  $38 \times 22 =$




2)  $36 \times 44 =$




3)  $48 \times 45 =$



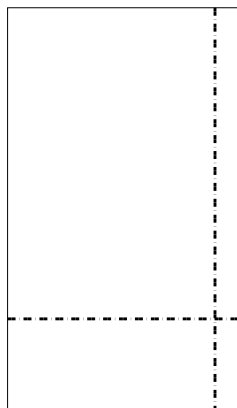
4)  $49 \times 54 =$



5)  $43 \times 29 =$



6)  $39 \times 23 =$



Ответы

1. \_\_\_\_\_

2. \_\_\_\_\_

3. \_\_\_\_\_

4. \_\_\_\_\_

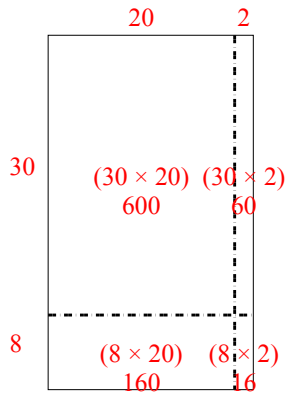
5. \_\_\_\_\_

6. \_\_\_\_\_

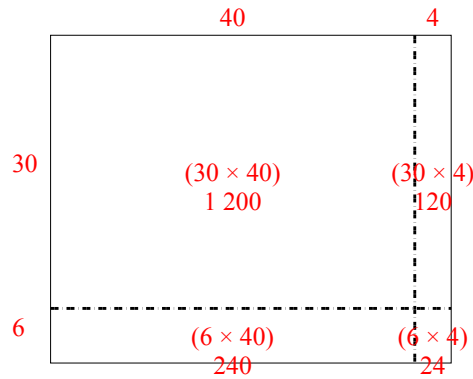


Используйте матрицу для решения задачи.

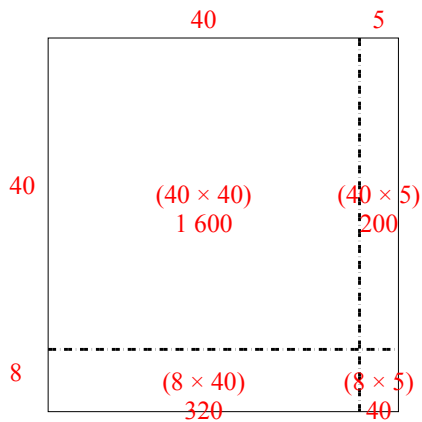
1)  $38 \times 22 =$



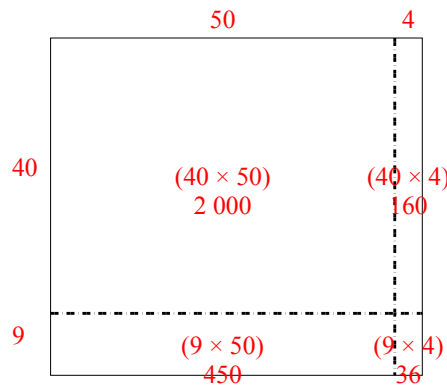
2)  $36 \times 44 =$



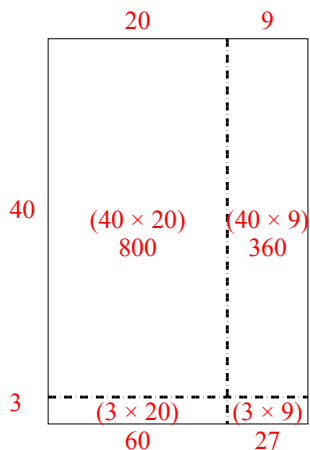
3)  $48 \times 45 =$



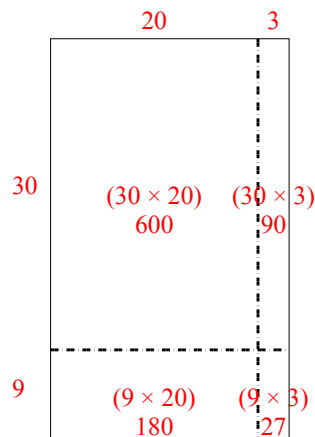
4)  $49 \times 54 =$



5)  $43 \times 29 =$



6)  $39 \times 23 =$



**Ответы**

1. 836
2. 1 584
3. 2 160
4. 2 646
5. 1 247
6. 897