





Используйте матрицу для решения задачи.


1) $43 \times 36 =$




2) $37 \times 43 =$



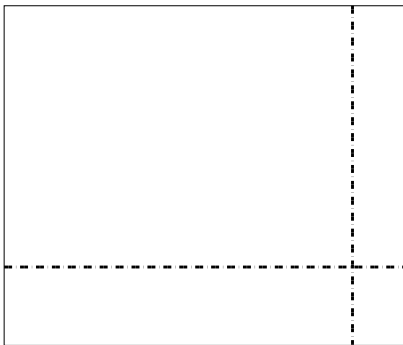
3) $33 \times 22 =$




4) $34 \times 45 =$



5) $39 \times 46 =$



6) $36 \times 35 =$



Ответы

1. _____

2. _____

3. _____

4. _____

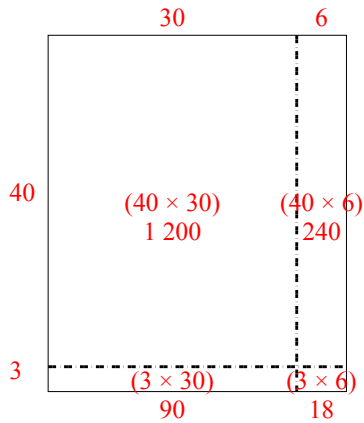
5. _____

6. _____

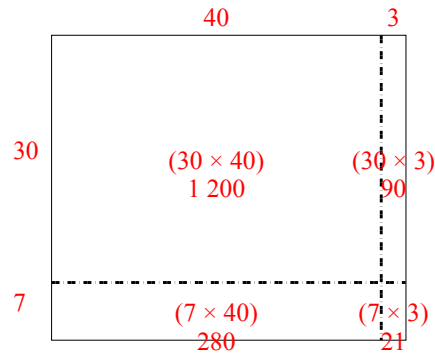


Используйте матрицу для решения задачи.

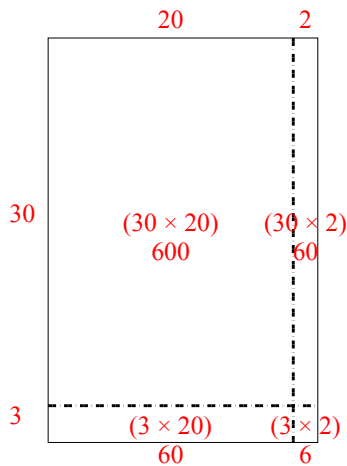
1) $43 \times 36 =$



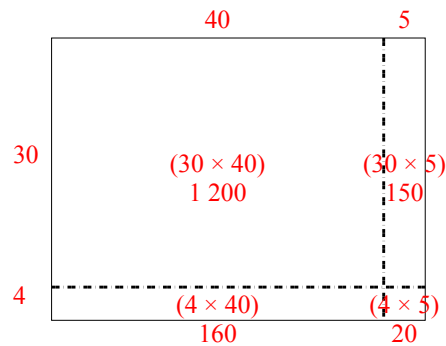
2) $37 \times 43 =$



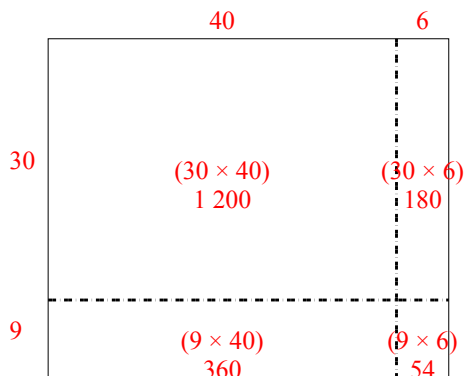
3) $33 \times 22 =$



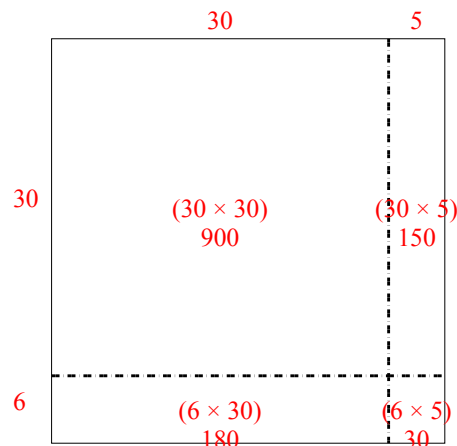
4) $34 \times 45 =$



5) $39 \times 46 =$



6) $36 \times 35 =$

**Отвeты**1. 1 5482. 1 5913. 7264. 1 5305. 1 7946. 1 260