





Используйте матрицу для решения задачи.


1) $39 \times 30 =$




2) $28 \times 20 =$




3) $21 \times 20 =$




4) $27 \times 20 =$



5) $20 \times 28 =$



6) $20 \times 21 =$



Отвeты

1. _____

2. _____

3. _____

4. _____

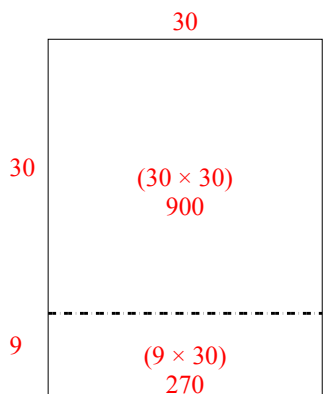
5. _____

6. _____

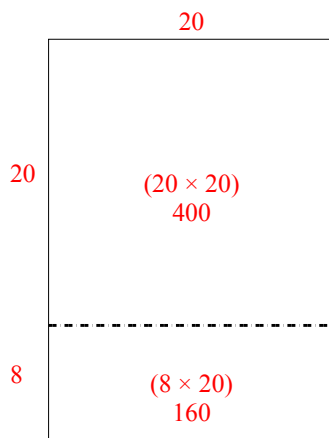


Используйте матрицу для решения задачи.

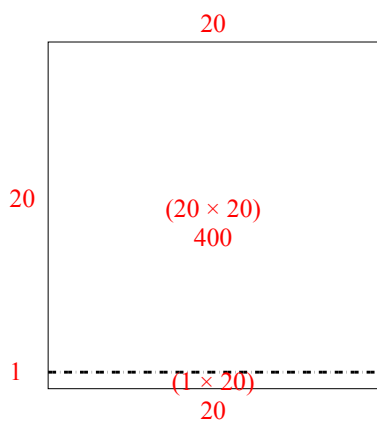
1) $39 \times 30 =$



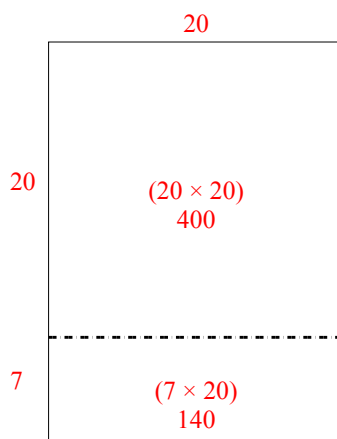
2) $28 \times 20 =$



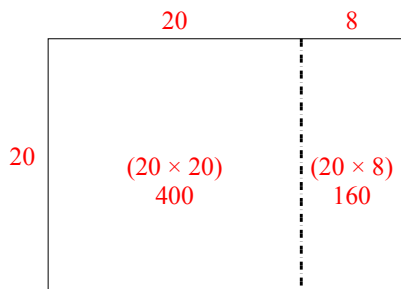
3) $21 \times 20 =$



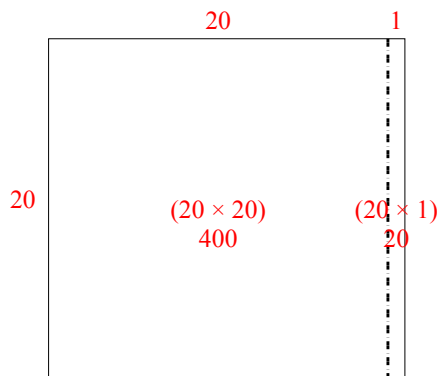
4) $27 \times 20 =$



5) $20 \times 28 =$



6) $20 \times 21 =$



Ответы

1. 1 170

2. 560

3. 420

4. 540

5. 560

6. 420