




Используйте матрицу для решения задачи.


1) $33 \times 30 =$




2) $20 \times 23 =$




3) $20 \times 21 =$



4) $20 \times 27 =$



5) $20 \times 26 =$



6) $29 \times 20 =$



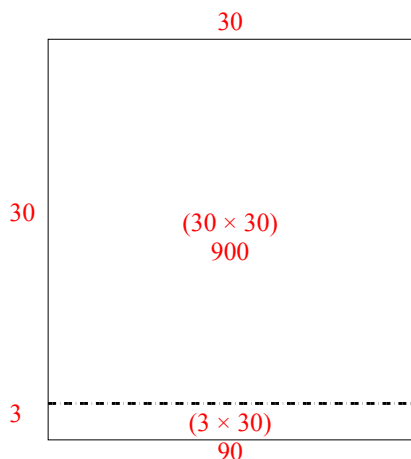
Отвeты

- 1. _____
- 2. _____
- 3. _____
- 4. _____
- 5. _____
- 6. _____

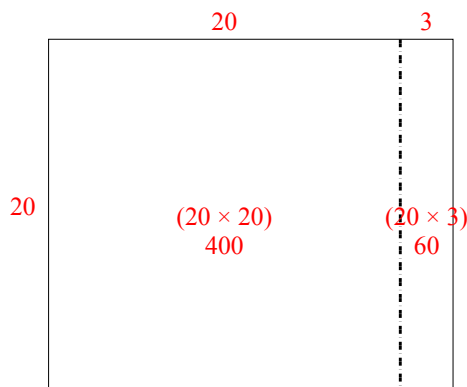


Используйте матрицу для решения задачи.

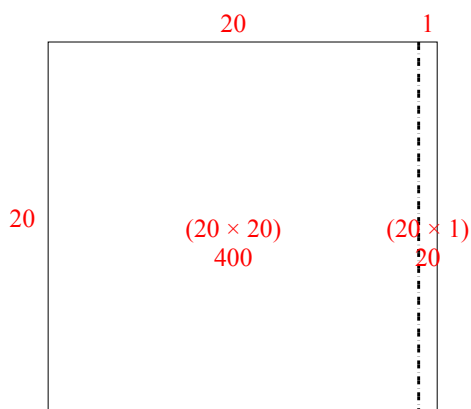
1) $33 \times 30 =$



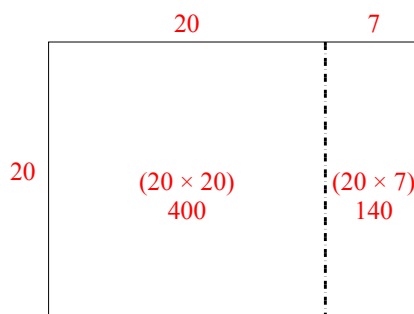
2) $20 \times 23 =$



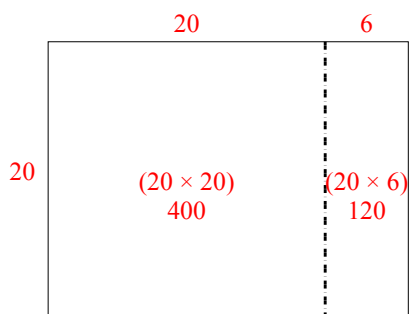
3) $20 \times 21 =$



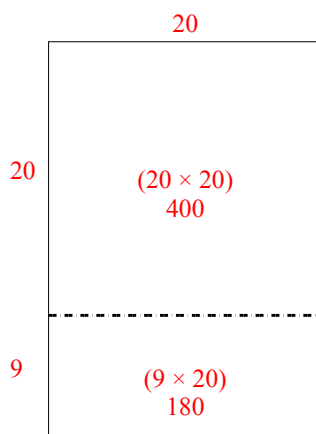
4) $20 \times 27 =$



5) $20 \times 26 =$



6) $29 \times 20 =$



Ответы

1. 990

2. 460

3. 420

4. 540

5. 520

6. 580