





Используйте матрицу для решения задачи.


1)  $39 \times 30 =$




2)  $28 \times 20 =$




3)  $21 \times 20 =$




4)  $27 \times 20 =$



5)  $20 \times 28 =$



6)  $20 \times 21 =$



ОТВЕТЫ

1. \_\_\_\_\_

2. \_\_\_\_\_

3. \_\_\_\_\_

4. \_\_\_\_\_

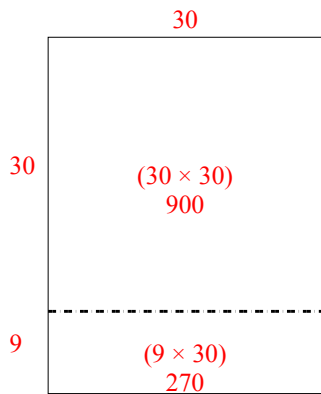
5. \_\_\_\_\_

6. \_\_\_\_\_

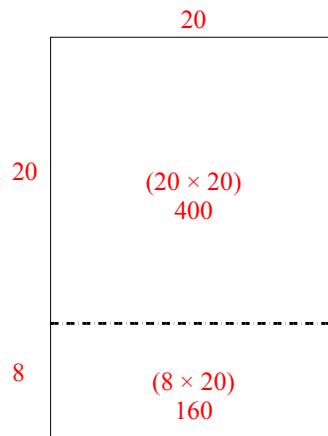


Используйте матрицу для решения задачи.

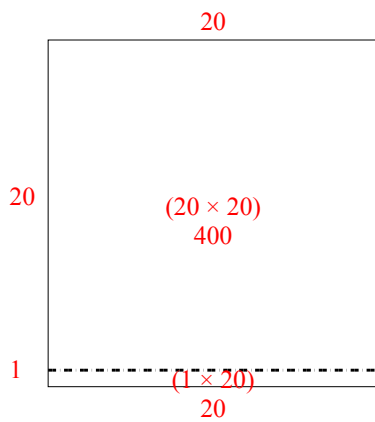
1)  $39 \times 30 =$



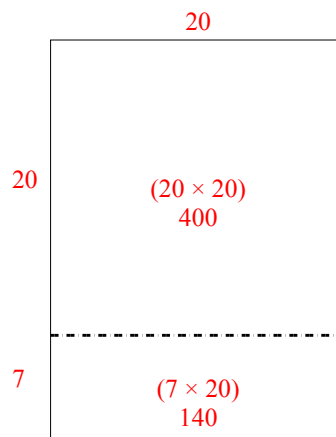
2)  $28 \times 20 =$



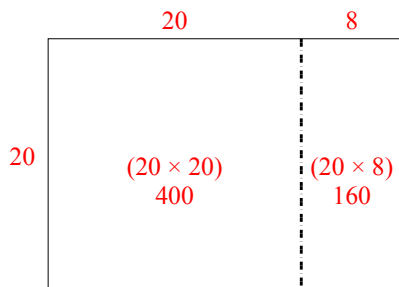
3)  $21 \times 20 =$



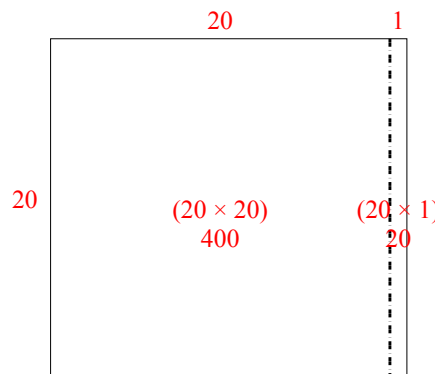
4)  $27 \times 20 =$



5)  $20 \times 28 =$



6)  $20 \times 21 =$



**Ответы**

1. 1 170

2. 560

3. 420

4. 540


5. 560

6. 420




Используйте матрицу для решения задачи.


1)  $21 \times 20 =$




2)  $27 \times 20 =$




3)  $20 \times 23 =$




4)  $20 \times 27 =$



5)  $20 \times 29 =$



6)  $20 \times 25 =$



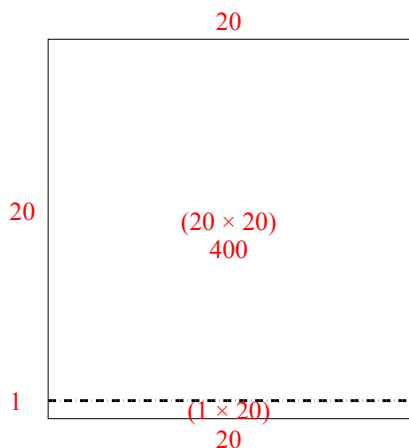
**Отвeты**

- 1. \_\_\_\_\_
- 2. \_\_\_\_\_
- 3. \_\_\_\_\_
- 4. \_\_\_\_\_
- 5. \_\_\_\_\_
- 6. \_\_\_\_\_

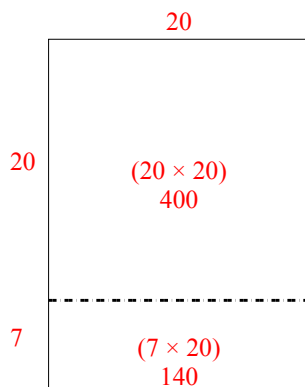


Используйте матрицу для решения задачи.

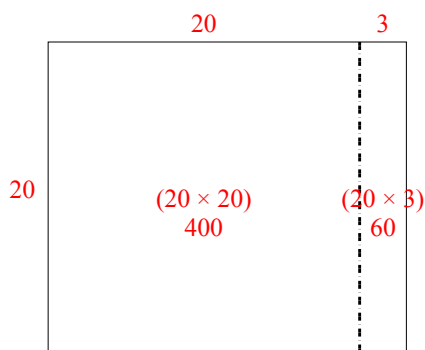
1)  $21 \times 20 =$



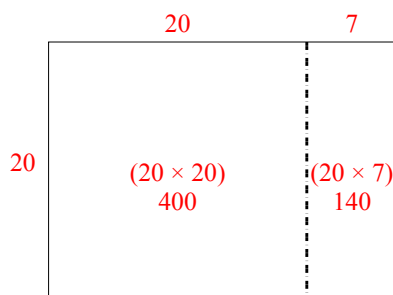
2)  $27 \times 20 =$



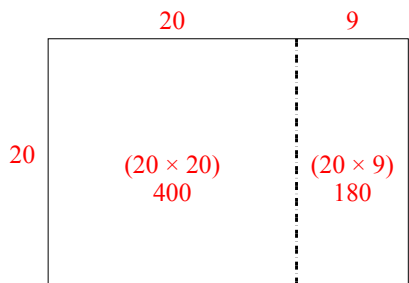
3)  $20 \times 23 =$



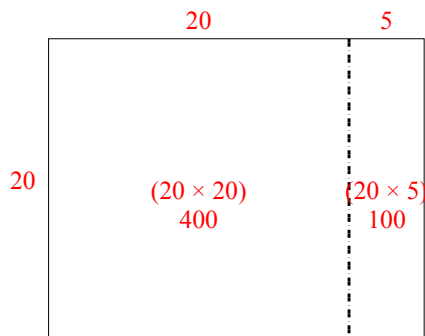
4)  $20 \times 27 =$



5)  $20 \times 29 =$



6)  $20 \times 25 =$




**Ответы**

1. 420
2. 540
3. 460
4. 540
5. 580
6. 500




Используйте матрицу для решения задачи.


1)  $26 \times 20 =$




2)  $20 \times 22 =$




3)  $29 \times 20 =$




4)  $20 \times 29 =$



5)  $25 \times 20 =$



6)  $20 \times 28 =$



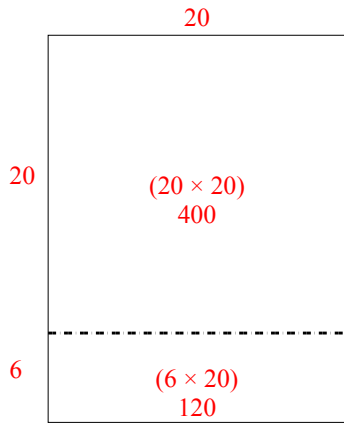
Отвeты

- 1. \_\_\_\_\_
- 2. \_\_\_\_\_
- 3. \_\_\_\_\_
- 4. \_\_\_\_\_
- 5. \_\_\_\_\_
- 6. \_\_\_\_\_

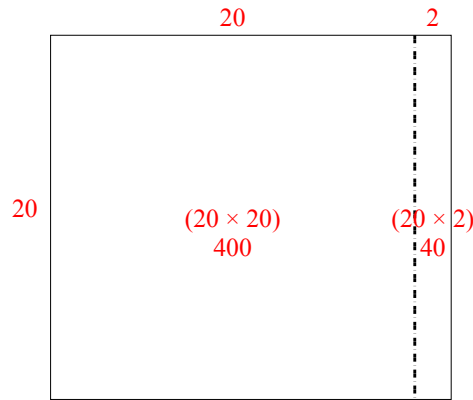


Используйте матрицу для решения задачи.

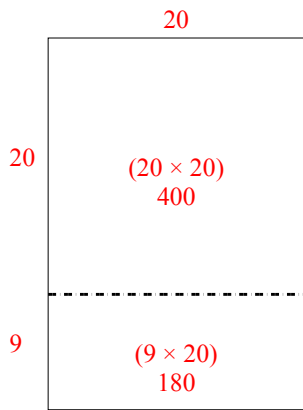
1)  $26 \times 20 =$



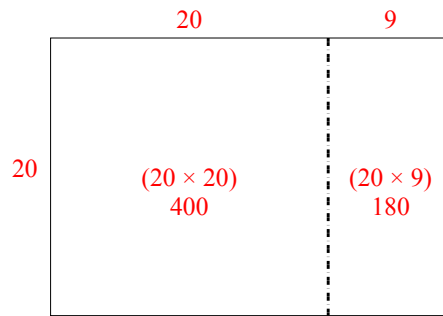
2)  $20 \times 22 =$



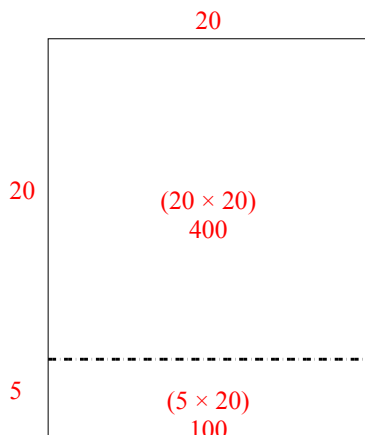
3)  $29 \times 20 =$



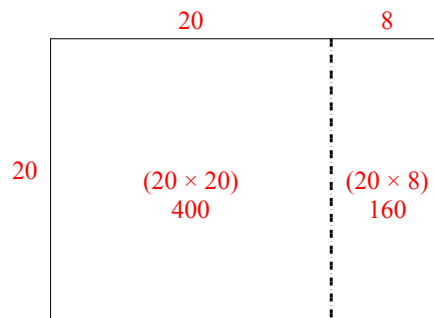
4)  $20 \times 29 =$



5)  $25 \times 20 =$



6)  $20 \times 28 =$



**Ответы**

1. 520

2. 440

3. 580

4. 580


5. 500

6. 560




Используйте матрицу для решения задачи.

1)  $33 \times 30 =$




2)  $20 \times 23 =$




3)  $20 \times 21 =$




4)  $20 \times 27 =$



5)  $20 \times 26 =$



6)  $29 \times 20 =$



Ответы

1. \_\_\_\_\_

2. \_\_\_\_\_

3. \_\_\_\_\_

4. \_\_\_\_\_

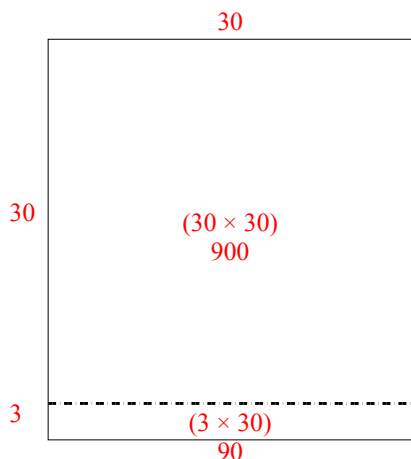
5. \_\_\_\_\_

6. \_\_\_\_\_

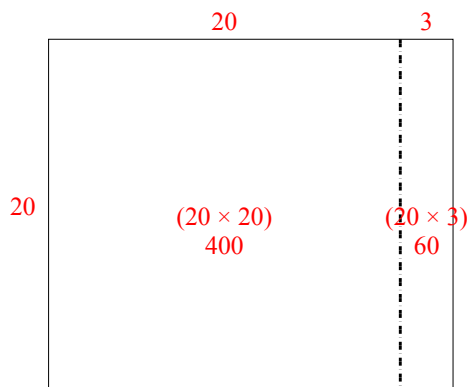


Используйте матрицу для решения задачи.

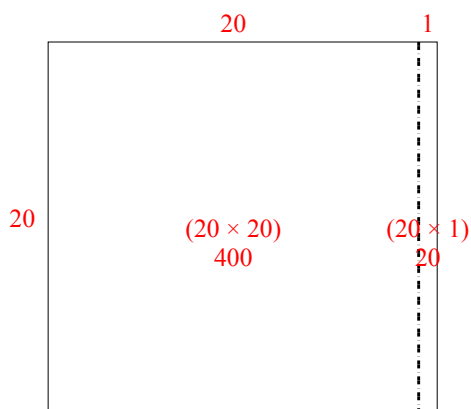
1)  $33 \times 30 =$



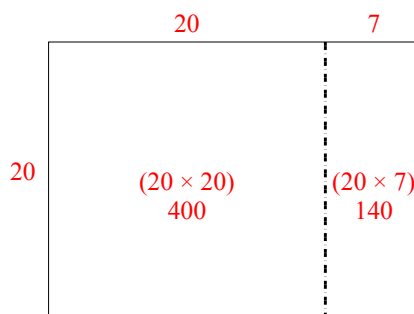
2)  $20 \times 23 =$



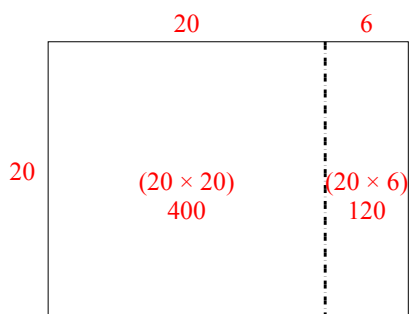
3)  $20 \times 21 =$



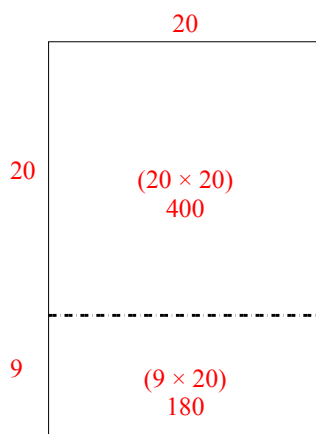
4)  $20 \times 27 =$



5)  $20 \times 26 =$



6)  $29 \times 20 =$



**Ответы**

1. 990

2. 460

3. 420

4. 540

5. 520


6. 580






Используйте матрицу для решения задачи.


1)  $43 \times 30 =$




2)  $32 \times 30 =$




3)  $20 \times 23 =$




4)  $25 \times 20 =$



5)  $20 \times 24 =$



6)  $22 \times 20 =$



ОТВЕТЫ

1. \_\_\_\_\_

2. \_\_\_\_\_

3. \_\_\_\_\_

4. \_\_\_\_\_

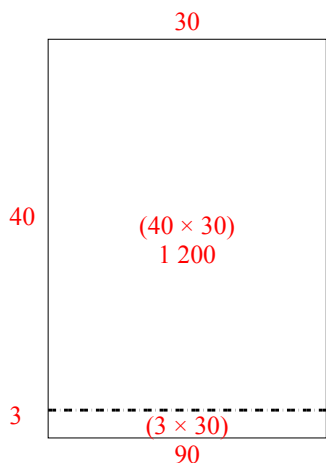
5. \_\_\_\_\_

6. \_\_\_\_\_

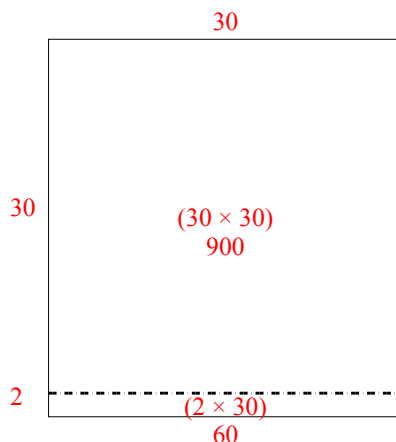


Используйте матрицу для решения задачи.

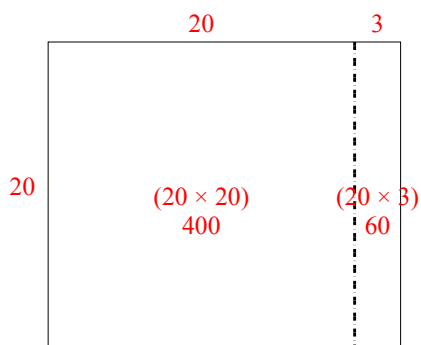
1)  $43 \times 30 =$



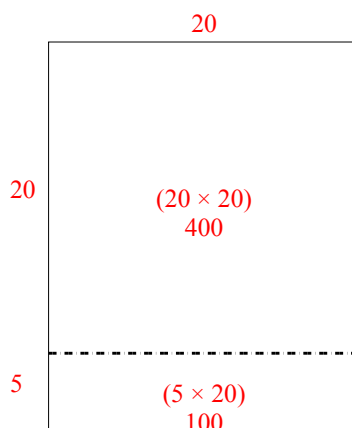
2)  $32 \times 30 =$



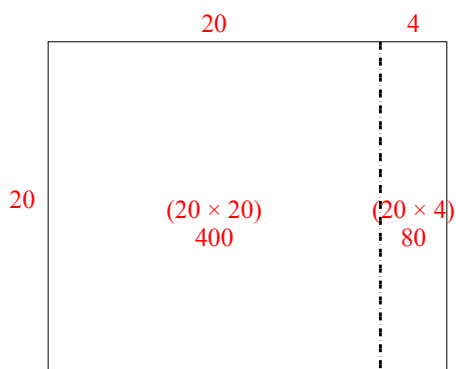
3)  $20 \times 23 =$



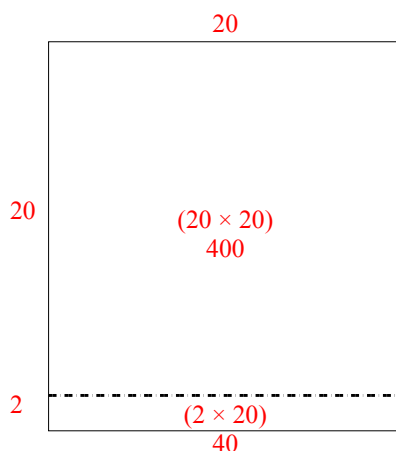
4)  $25 \times 20 =$



5)  $20 \times 24 =$



6)  $22 \times 20 =$



**Ответы**

1. 1 290

2. 960

3. 460

4. 500


5. 480

6. 440




Используйте матрицу для решения задачи.


1)  $20 \times 23 =$




2)  $28 \times 20 =$




3)  $24 \times 20 =$




4)  $26 \times 20 =$



5)  $20 \times 25 =$



6)  $20 \times 24 =$



**Отвeты**

1. \_\_\_\_\_

2. \_\_\_\_\_

3. \_\_\_\_\_

4. \_\_\_\_\_

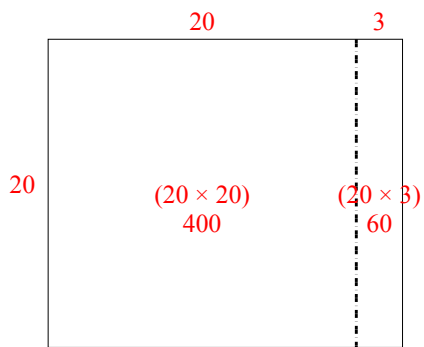
5. \_\_\_\_\_

6. \_\_\_\_\_

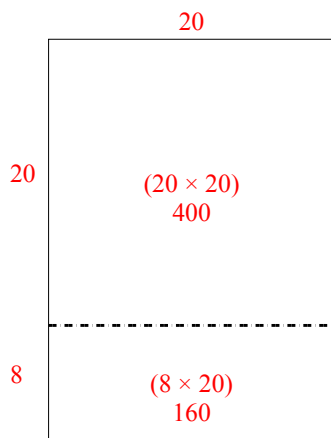


Используйте матрицу для решения задачи.

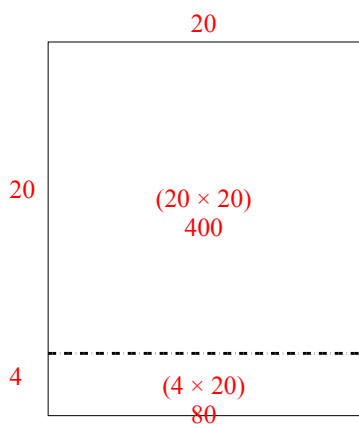
1)  $20 \times 23 =$



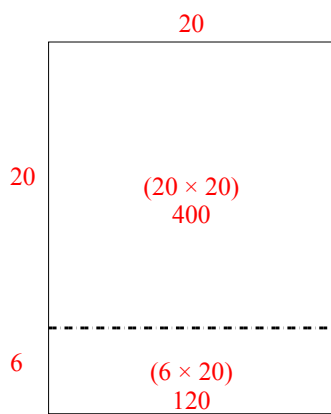
2)  $28 \times 20 =$



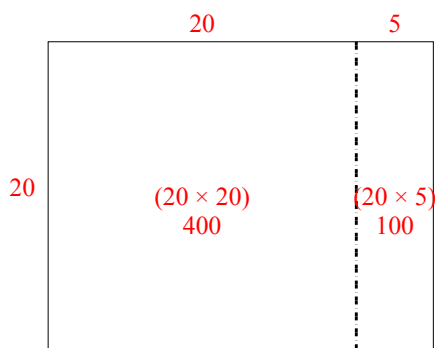
3)  $24 \times 20 =$



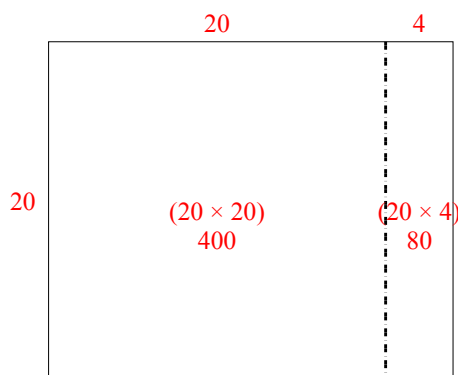
4)  $26 \times 20 =$



5)  $20 \times 25 =$



6)  $20 \times 24 =$




**Ответы**

- 1. 460
- 2. 560
- 3. 480
- 4. 520
- 5. 500
- 6. 480




Используйте матрицу для решения задачи.


1)  $30 \times 32 =$




2)  $20 \times 23 =$




3)  $25 \times 20 =$




4)  $26 \times 20 =$



5)  $22 \times 20 =$



6)  $20 \times 21 =$



Ответы

1. \_\_\_\_\_

2. \_\_\_\_\_

3. \_\_\_\_\_

4. \_\_\_\_\_

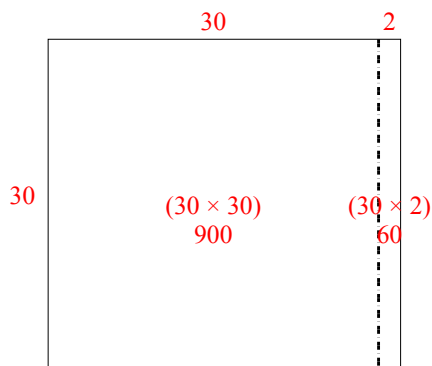
5. \_\_\_\_\_

6. \_\_\_\_\_

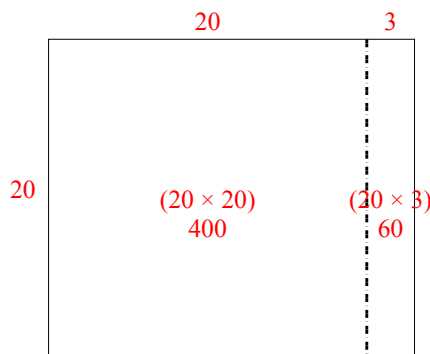


Используйте матрицу для решения задачи.

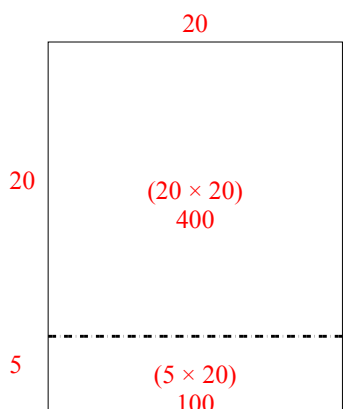
1)  $30 \times 32 =$



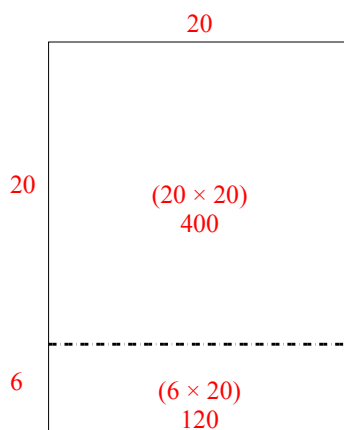
2)  $20 \times 23 =$



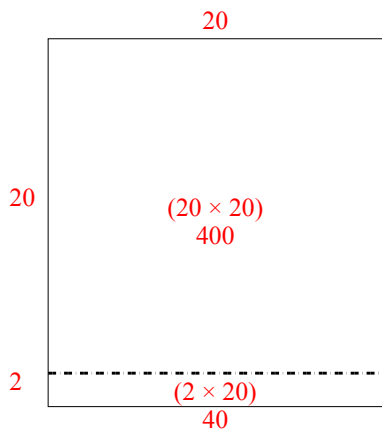
3)  $25 \times 20 =$



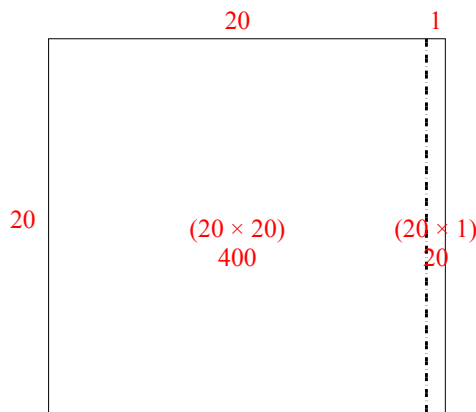
4)  $26 \times 20 =$



5)  $22 \times 20 =$



6)  $20 \times 21 =$



**Ответы**

1. 960

2. 460

3. 500

4. 520


5. 440

6. 420




Используйте матрицу для решения задачи.


1)  $32 \times 20 =$




2)  $30 \times 37 =$




3)  $20 \times 22 =$




4)  $20 \times 29 =$



5)  $23 \times 20 =$



6)  $28 \times 20 =$



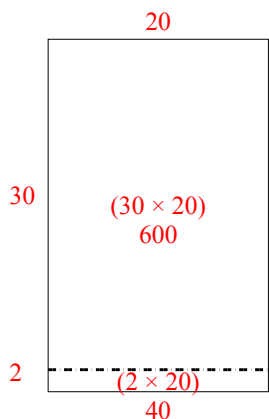
Ответы

- 1. \_\_\_\_\_
- 2. \_\_\_\_\_
- 3. \_\_\_\_\_
- 4. \_\_\_\_\_
- 5. \_\_\_\_\_
- 6. \_\_\_\_\_

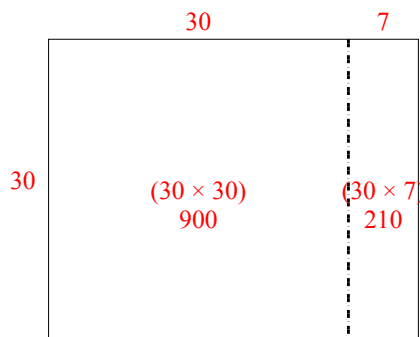


Используйте матрицу для решения задачи.

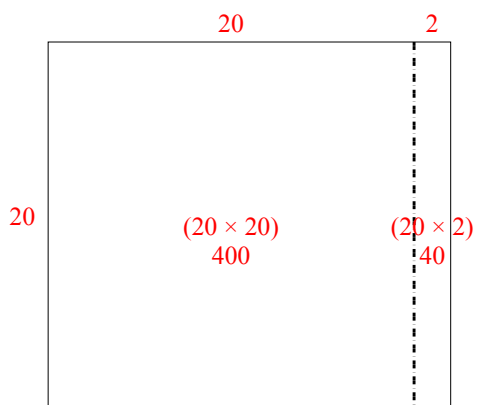
1)  $32 \times 20 =$



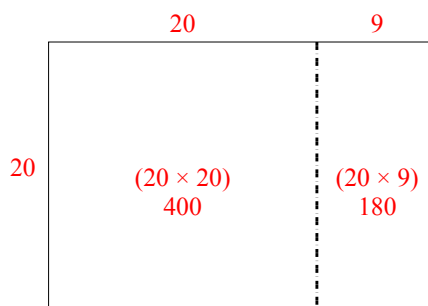
2)  $30 \times 37 =$



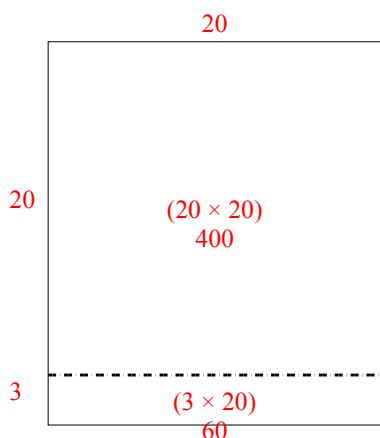
3)  $20 \times 22 =$



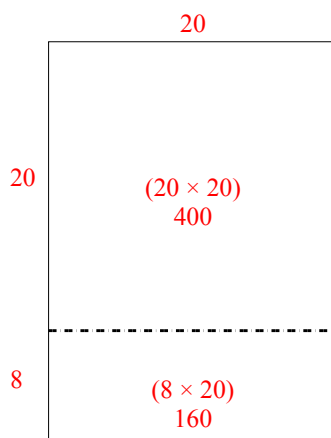
4)  $20 \times 29 =$



5)  $23 \times 20 =$



6)  $28 \times 20 =$



**Ответы**


- 1. 640
- 2. 1 110
- 3. 440
- 4. 580
- 5. 460
- 6. 560






Используйте матрицу для решения задачи.

1)  $23 \times 20 =$




2)  $20 \times 28 =$




3)  $20 \times 21 =$




4)  $26 \times 20 =$



5)  $20 \times 22 =$



6)  $25 \times 20 =$



Ответы

1. \_\_\_\_\_

2. \_\_\_\_\_

3. \_\_\_\_\_

4. \_\_\_\_\_

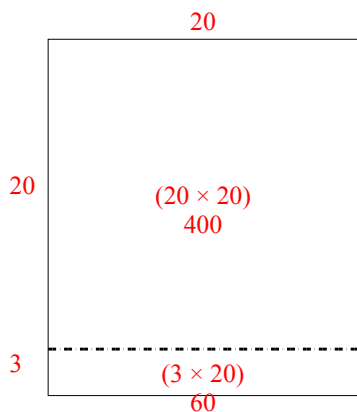
5. \_\_\_\_\_

6. \_\_\_\_\_

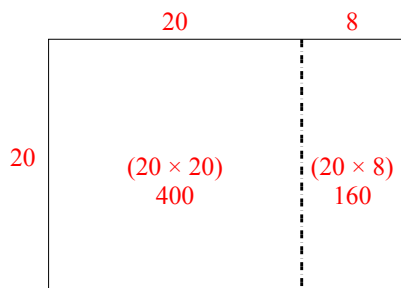


Используйте матрицу для решения задачи.

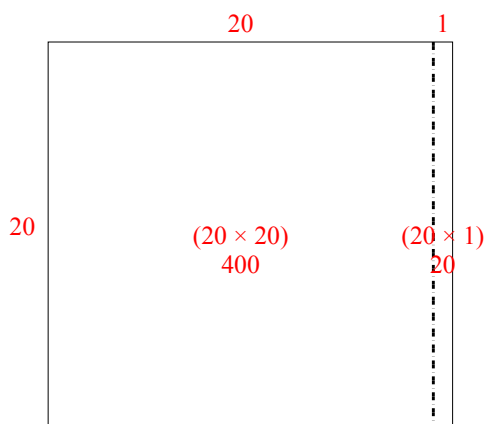
1)  $23 \times 20 =$



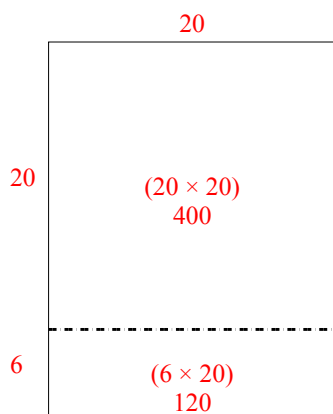
2)  $20 \times 28 =$



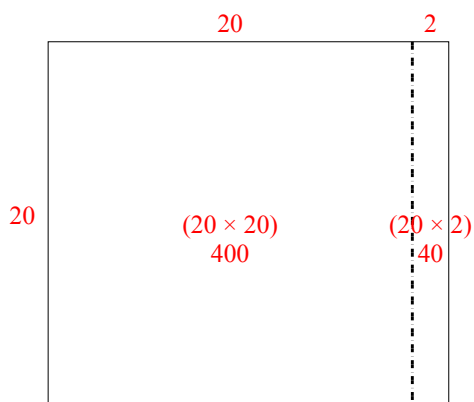
3)  $20 \times 21 =$



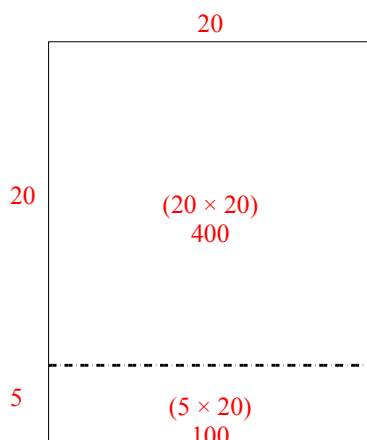
4)  $26 \times 20 =$



5)  $20 \times 22 =$



6)  $25 \times 20 =$




**Ответы**

- 1. 460
- 2. 560
- 3. 420
- 4. 520
- 5. 440
- 6. 500




Используйте матрицу для решения задачи.


1)  $20 \times 26 =$




2)  $21 \times 20 =$




3)  $20 \times 22 =$




4)  $20 \times 28 =$



5)  $20 \times 29 =$



6)  $20 \times 23 =$

**Ответы**

1. \_\_\_\_\_

2. \_\_\_\_\_

3. \_\_\_\_\_

4. \_\_\_\_\_

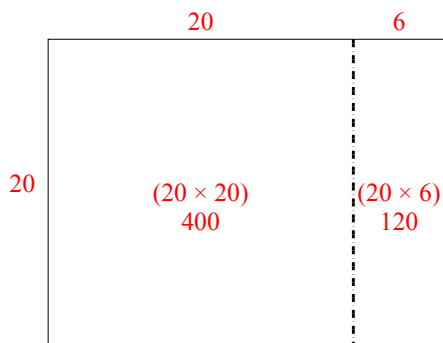
5. \_\_\_\_\_

6. \_\_\_\_\_

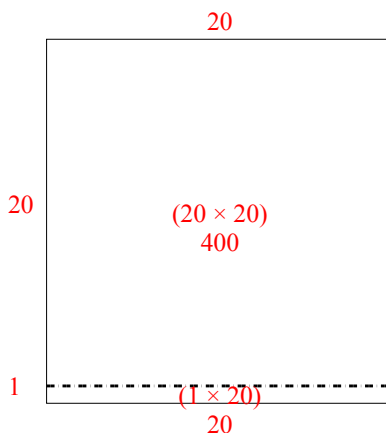


Используйте матрицу для решения задачи.

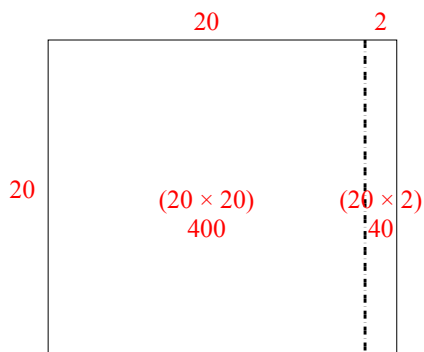
1)  $20 \times 26 =$



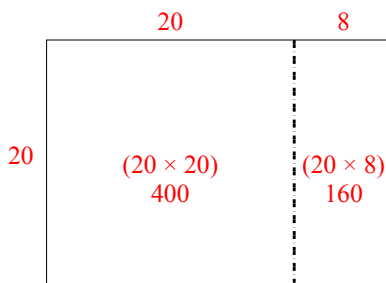
2)  $21 \times 20 =$



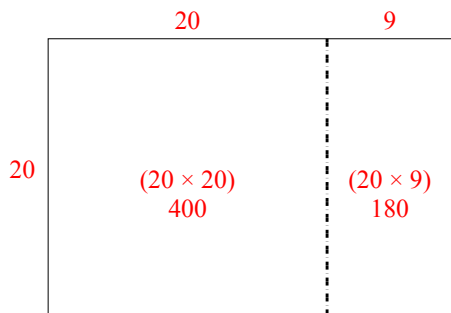
3)  $20 \times 22 =$



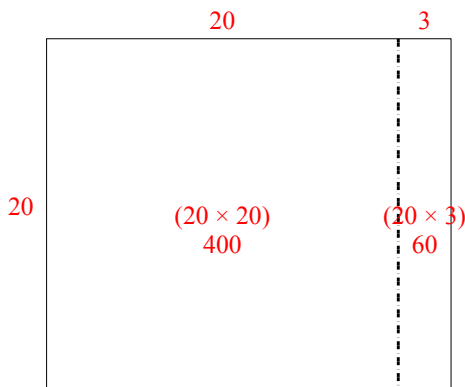
4)  $20 \times 28 =$



5)  $20 \times 29 =$



6)  $20 \times 23 =$



**Ответы**

1. 520

2. 420

3. 440

4. 560

5. 580

6. 460