





Используйте матрицу для решения задачи.

1) $30 \times 32 =$




2) $20 \times 27 =$




3) $27 \times 20 =$




4) $20 \times 29 =$



5) $24 \times 20 =$



6) $25 \times 20 =$



Отвeты

1. _____

2. _____

3. _____

4. _____

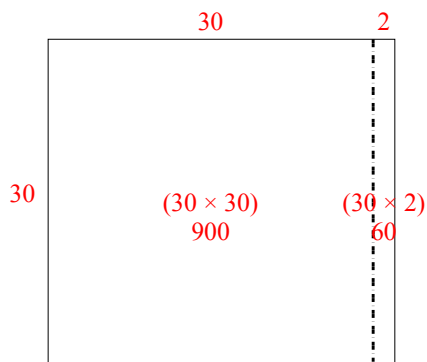
5. _____

6. _____

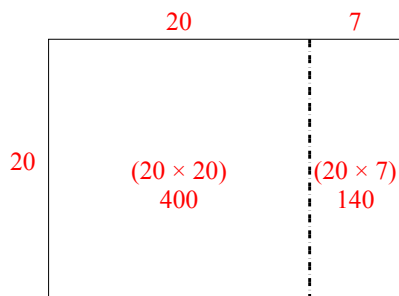


Используйте матрицу для решения задачи.

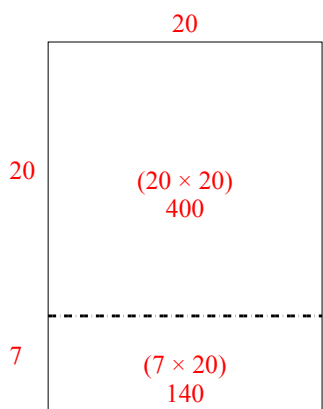
1) $30 \times 32 =$



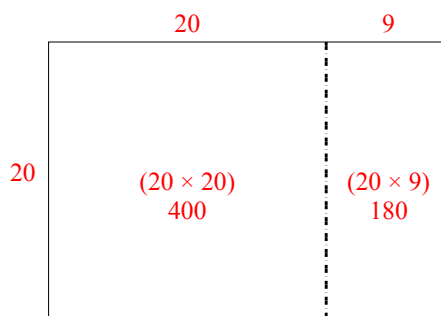
2) $20 \times 27 =$



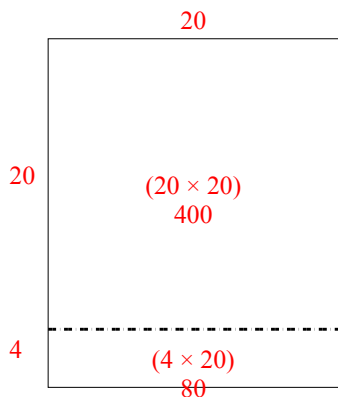
3) $27 \times 20 =$



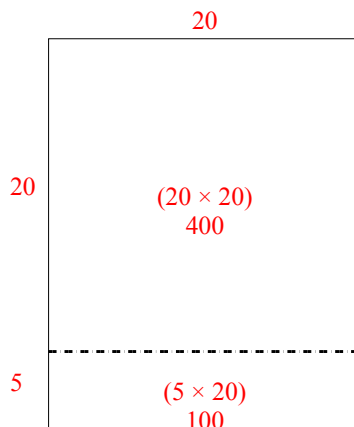
4) $20 \times 29 =$



5) $24 \times 20 =$



6) $25 \times 20 =$



Отвeты

1. 960

2. 540

3. 540

4. 580

5. 480

6. 500