




Определите, как нужно изобразить численно данные задачи.

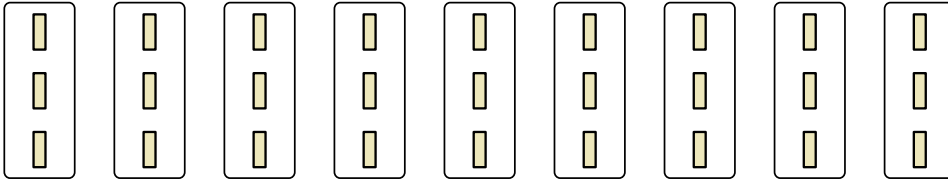
**Ответы**

об)



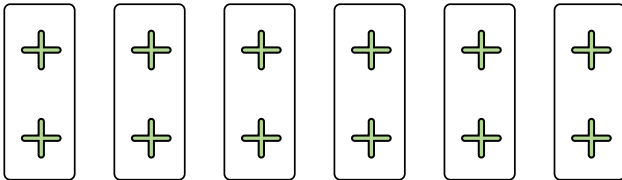
об.  $7 \times 9 = 63$

1)




1. \_\_\_\_\_

2)



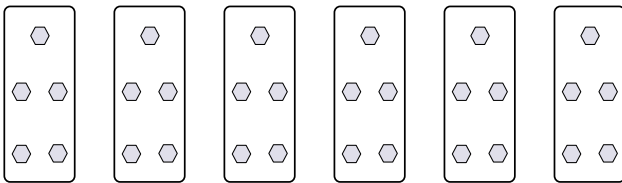
2. \_\_\_\_\_

3)



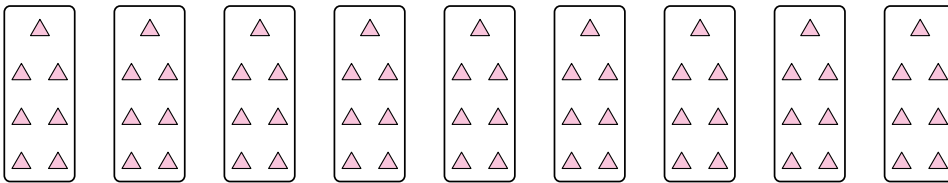
3. \_\_\_\_\_

4)



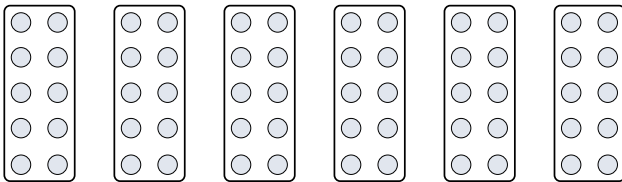
4. \_\_\_\_\_

5)



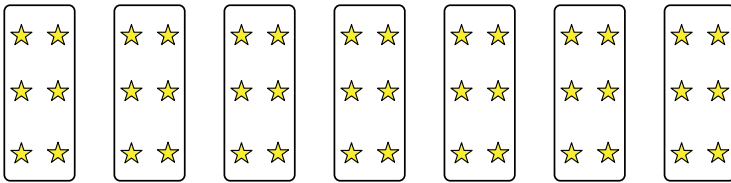
5. \_\_\_\_\_

6)




6. \_\_\_\_\_

7)



7. \_\_\_\_\_

8)




8. \_\_\_\_\_

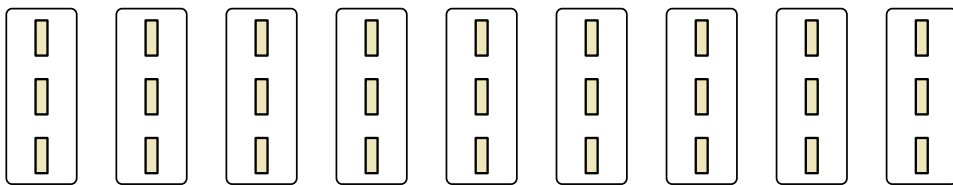


Определите, как нужно изобразить численно данные задачи.


об.)




1)



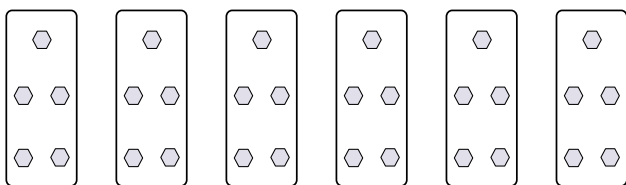
2)



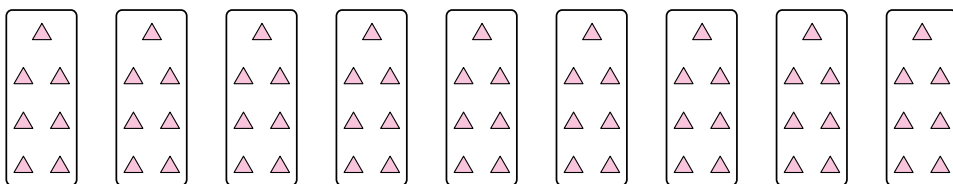
3)



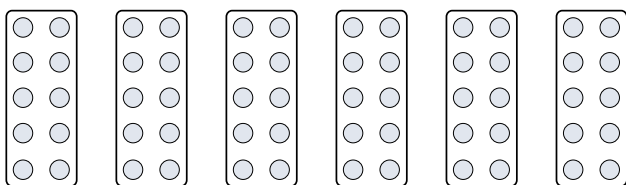
4)



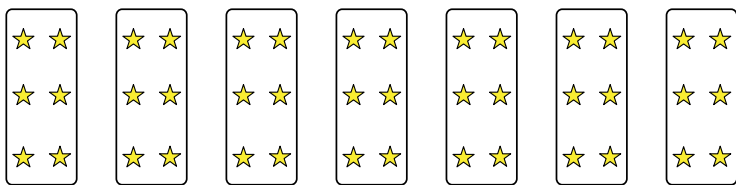
5)



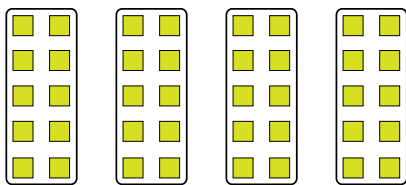
6)



7)



8)



**ОТВЕТЫ**

об.  $7 \times 9 = 63$

1.  $9 \times 3 = 27$

2.  $6 \times 2 = 12$

3.  $9 \times 4 = 36$

4.  $6 \times 5 = 30$

5.  $9 \times 7 = 63$

6.  $6 \times 10 = 60$

7.  $7 \times 6 = 42$

8.  $4 \times 10 = 40$