



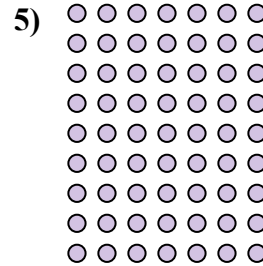


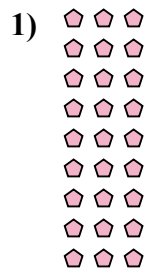
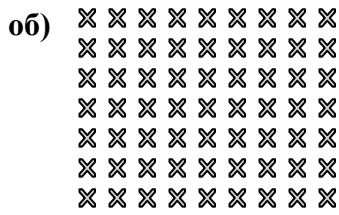






Перепишите каждую матрицу в виде умножения и решите.



**ОТВЕТЫ**

об.  $7 \times 9 = 63$

1.  $9 \times 3 = 27$

2.  $6 \times 2 = 12$

3.  $9 \times 4 = 36$

4.  $6 \times 5 = 30$

5.  $9 \times 7 = 63$

6.  $6 \times 10 = 60$

7.  $7 \times 6 = 42$

8.  $4 \times 10 = 40$

9.  $5 \times 6 = 30$

10.  $2 \times 3 = 6$

11.  $6 \times 6 = 36$