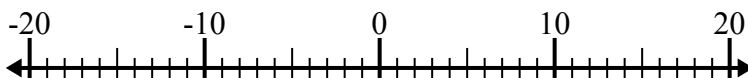




Решите каждую задачу. Используйте числовую прямую, если нужно.

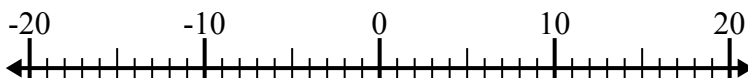
ОТВЕТЫ

1) $8 - (-12) = \underline{\hspace{2cm}}$



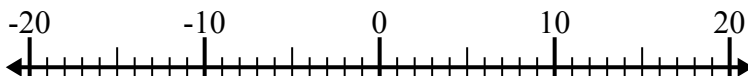
1. _____

2) $(-8) + (-6) = \underline{\hspace{2cm}}$



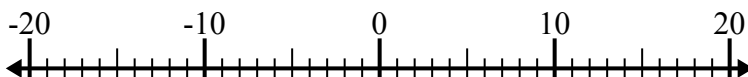
2. _____

3) $12 + (-2) = \underline{\hspace{2cm}}$



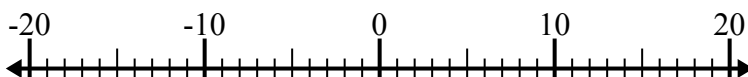
3. _____

4) $(-2) + (-13) = \underline{\hspace{2cm}}$



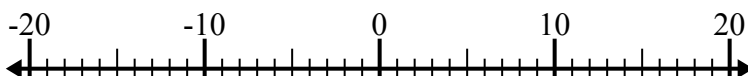
4. _____

5) $(-6) + 8 = \underline{\hspace{2cm}}$



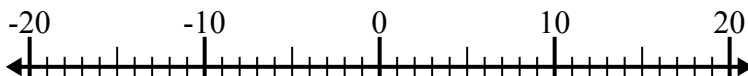
5. _____

6) $(-5) - 10 = \underline{\hspace{2cm}}$



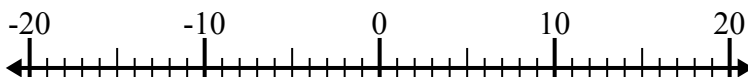
6. _____

7) $(-14) - (-8) = \underline{\hspace{2cm}}$



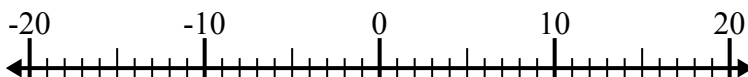
7. _____

8) $5 - (-2) = \underline{\hspace{2cm}}$



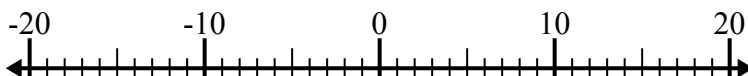
8. _____

9) $(-11) - (-14) = \underline{\hspace{2cm}}$



9. _____

10) $14 + (-10) = \underline{\hspace{2cm}}$

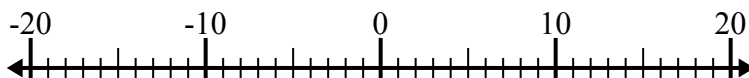


10. _____

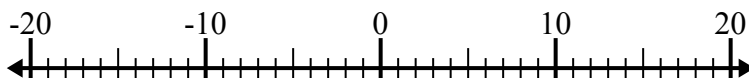


Решите каждую задачу. Используйте числовую прямую, если нужно.

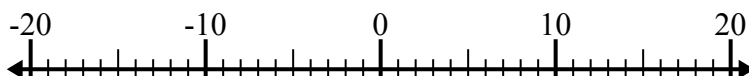
1) $8 - (-12) = \underline{20}$



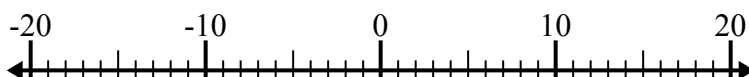
2) $(-8) + (-6) = \underline{-14}$



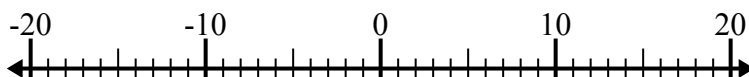
3) $12 + (-2) = \underline{10}$



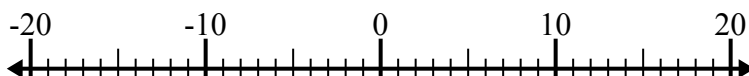
4) $(-2) + (-13) = \underline{-15}$



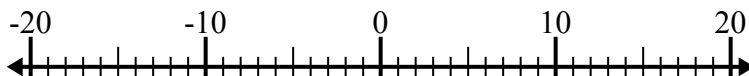
5) $(-6) + 8 = \underline{2}$



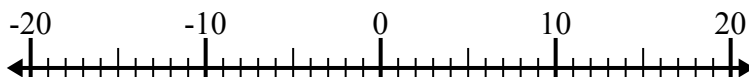
6) $(-5) - 10 = \underline{-15}$



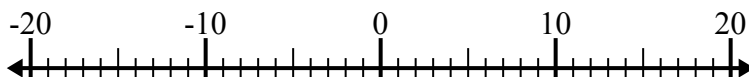
7) $(-14) - (-8) = \underline{-6}$



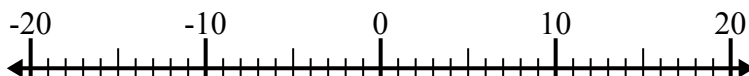
8) $5 - (-2) = \underline{7}$



9) $(-11) - (-14) = \underline{3}$



10) $14 + (-10) = \underline{4}$

**ОТВЕТЫ**1. 202. -143. 104. -155. 26. -157. -68. 79. 310. 4