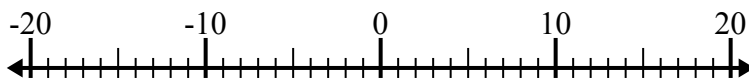




Решите каждую задачу. Используйте числовую прямую, если нужно.

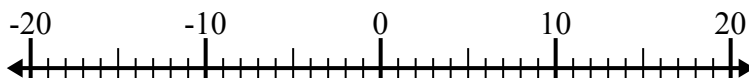
ОТВЕТЫ

1) $(-4) - (-1) =$ _____



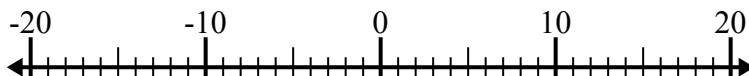
1. _____

2) $(-11) + 14 =$ _____



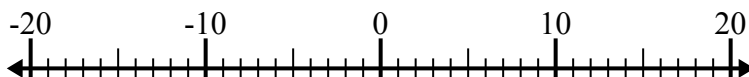
2. _____

3) $(-8) - 12 =$ _____



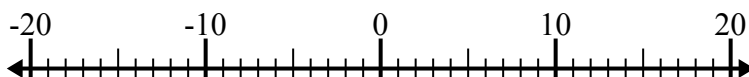
3. _____

4) $4 + (-5) =$ _____



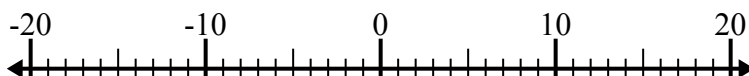
4. _____

5) $11 - (-3) =$ _____



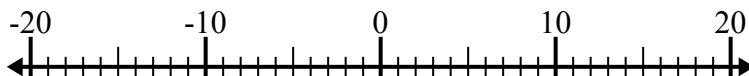
5. _____

6) $(-13) - 6 =$ _____



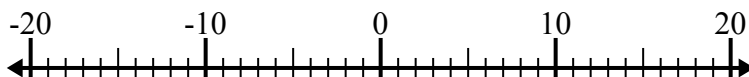
6. _____

7) $12 + (-8) =$ _____



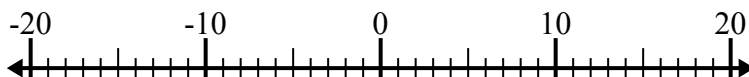
7. _____

8) $(-7) - (-12) =$ _____



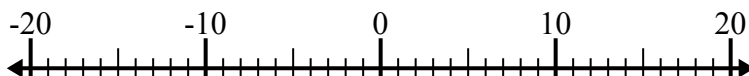
8. _____

9) $(-3) + (-1) =$ _____



9. _____

10) $(-5) + 2 =$ _____

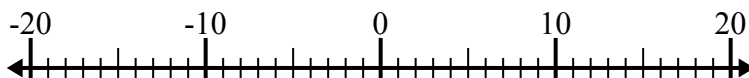


10. _____

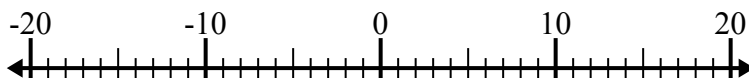


Решите каждую задачу. Используйте числовую прямую, если нужно.

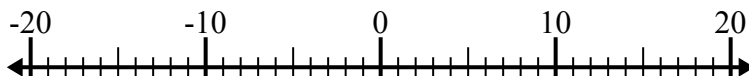
1) $(-4) - (-1) = \underline{-3}$



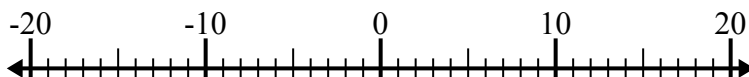
2) $(-11) + 14 = \underline{3}$



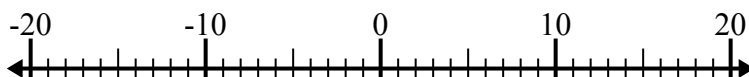
3) $(-8) - 12 = \underline{-20}$



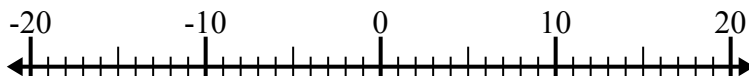
4) $4 + (-5) = \underline{-1}$



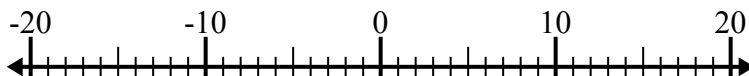
5) $11 - (-3) = \underline{14}$



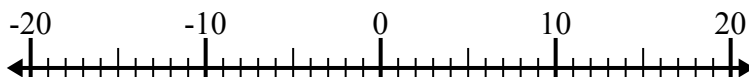
6) $(-13) - 6 = \underline{-19}$



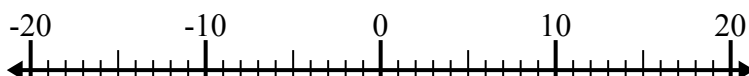
7) $12 + (-8) = \underline{4}$



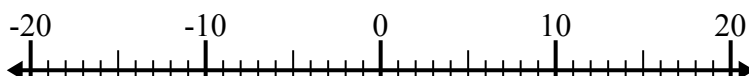
8) $(-7) - (-12) = \underline{5}$



9) $(-3) + (-1) = \underline{-4}$



10) $(-5) + 2 = \underline{-3}$

**ОТВЕТЫ**1. **-3** 2. **3** 3. **-20** 4. **-1** 5. **14** 6. **-19** 7. **4** 8. **5** 9. **-4** 10. **-3**