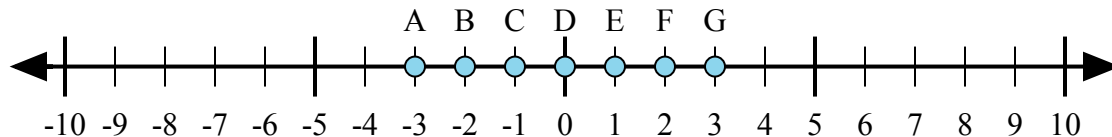




Определите какой ответ отражает ответ каждой задачи на числовой прямой.

Ответы



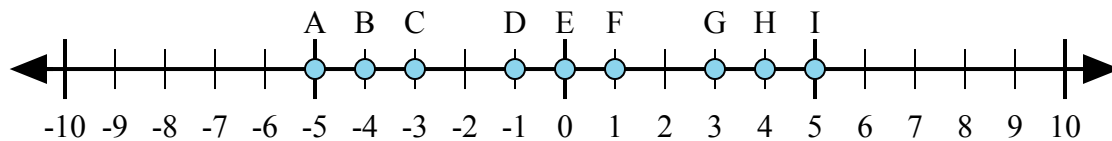
1)  $1 + 2 =$

2)  $(-1) + (-2) =$

3)  $(-2) + 1 =$

4)  $2 + (-1) =$

5)  $1 + (-2) =$



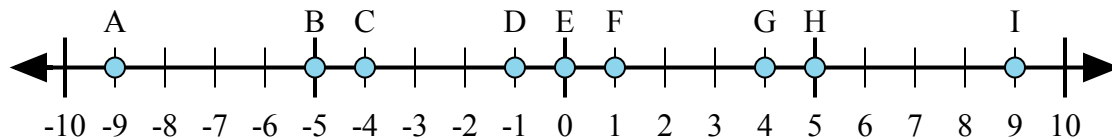
6)  $4 + (-1) =$

7)  $(-4) + (-1) =$

8)  $(-4) + 1 =$

9)  $(-1) + 4 =$

10)  $1 + (-4) =$



11)  $5 + (-4) =$

12)  $4 + (-5) =$

13)  $(-5) + 4 =$

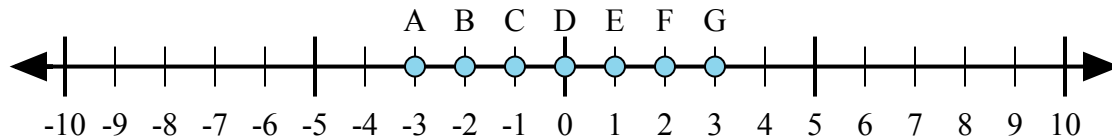
14)  $5 + 4 =$

15)  $(-4) + 5 =$

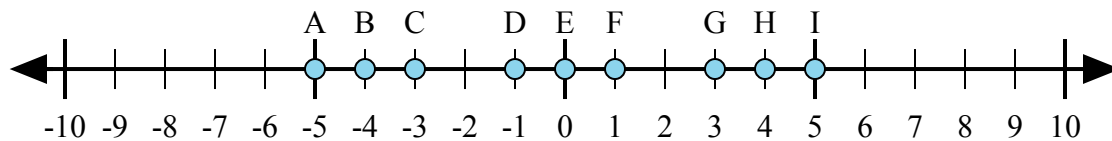
1. \_\_\_\_\_
2. \_\_\_\_\_
3. \_\_\_\_\_
4. \_\_\_\_\_
5. \_\_\_\_\_
6. \_\_\_\_\_
7. \_\_\_\_\_
8. \_\_\_\_\_
9. \_\_\_\_\_
10. \_\_\_\_\_
11. \_\_\_\_\_
12. \_\_\_\_\_
13. \_\_\_\_\_
14. \_\_\_\_\_
15. \_\_\_\_\_



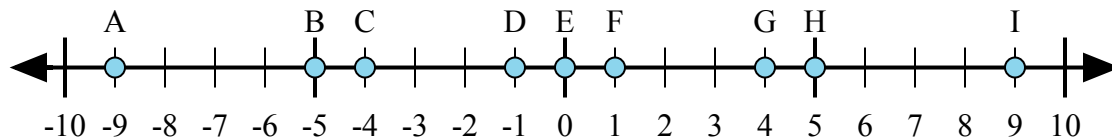
Определите какой ответ отражает ответ каждой задачи на числовой прямой.



- 1)  $1 + 2 =$
- 2)  $(-1) + (-2) =$
- 3)  $(-2) + 1 =$
- 4)  $2 + (-1) =$
- 5)  $1 + (-2) =$



- 6)  $4 + (-1) =$
- 7)  $(-4) + (-1) =$
- 8)  $(-4) + 1 =$
- 9)  $(-1) + 4 =$
- 10)  $1 + (-4) =$



- 11)  $5 + (-4) =$
- 12)  $4 + (-5) =$
- 13)  $(-5) + 4 =$
- 14)  $5 + 4 =$
- 15)  $(-4) + 5 =$

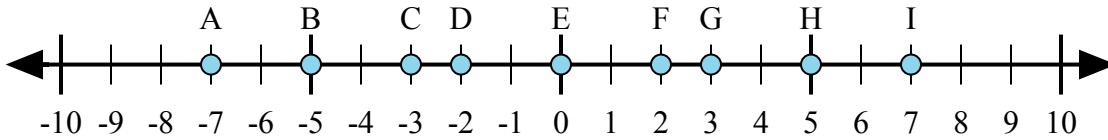
**ОТВЕТЫ**

1.         **G**
2.         **A**
3.         **C**
4.         **E**
5.         **C**
6.         **G**
7.         **A**
8.         **C**
9.         **G**
10.         **C**
11.         **F**
12.         **D**
13.         **D**
14.         **I**
15.         **F**



Определите какой ответ отражает ответ каждой задачи на числовой прямой.

Ответы



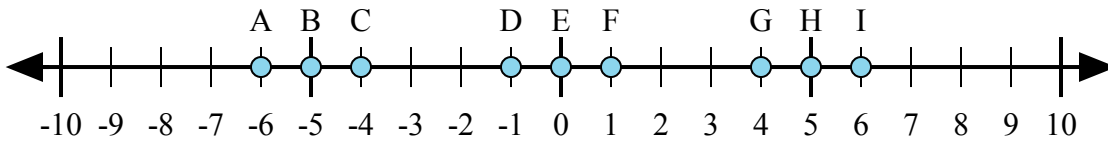
1)  $2 + (-5) =$

2)  $(-5) + (-2) =$

3)  $(-5) + 2 =$

4)  $5 + (-2) =$

5)  $(-2) + 5 =$



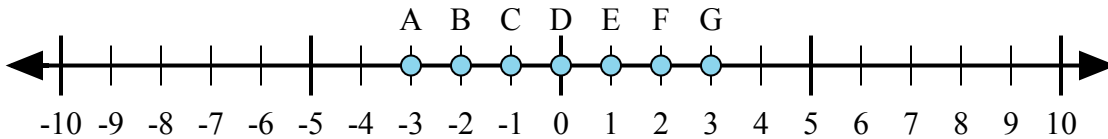
6)  $1 + 5 =$

7)  $(-1) + 5 =$

8)  $5 + (-1) =$

9)  $(-1) + (-5) =$

10)  $(-5) + 1 =$



11)  $(-1) + 2 =$

12)  $1 + (-2) =$

13)  $2 + 1 =$

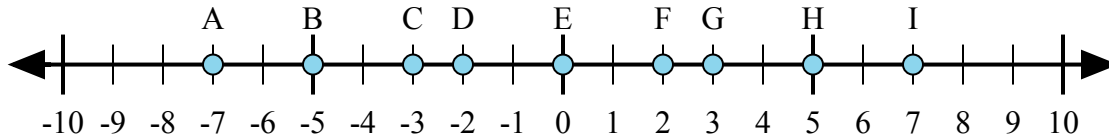
14)  $2 + (-1) =$

15)  $(-2) + 1 =$

1. \_\_\_\_\_
2. \_\_\_\_\_
3. \_\_\_\_\_
4. \_\_\_\_\_
5. \_\_\_\_\_
6. \_\_\_\_\_
7. \_\_\_\_\_
8. \_\_\_\_\_
9. \_\_\_\_\_
10. \_\_\_\_\_
11. \_\_\_\_\_
12. \_\_\_\_\_
13. \_\_\_\_\_
14. \_\_\_\_\_
15. \_\_\_\_\_



Определите какой ответ отражает ответ каждой задачи на числовой прямой.



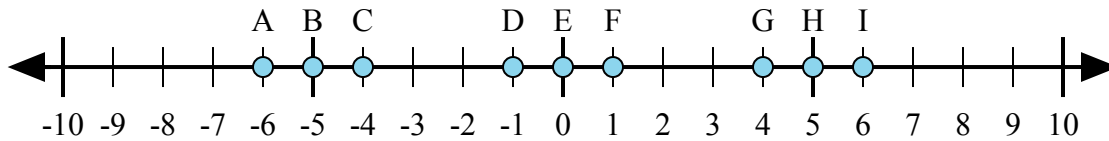
1)  $2 + (-5) =$

2)  $(-5) + (-2) =$

3)  $(-5) + 2 =$

4)  $5 + (-2) =$

5)  $(-2) + 5 =$



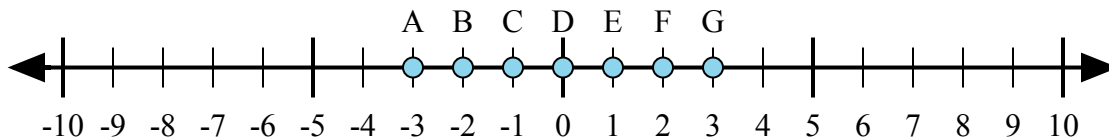
6)  $1 + 5 =$

7)  $(-1) + 5 =$

8)  $5 + (-1) =$

9)  $(-1) + (-5) =$

10)  $(-5) + 1 =$



11)  $(-1) + 2 =$

12)  $1 + (-2) =$

13)  $2 + 1 =$

14)  $2 + (-1) =$

15)  $(-2) + 1 =$

**ОТВЕТЫ**

1.           **C**          

2.           **A**          

3.           **C**          

4.           **G**          

5.           **G**          

6.           **I**          

7.           **G**          

8.           **G**          

9.           **A**          

10.          **C**          

11.          **E**          

12.          **C**          

13.          **G**          

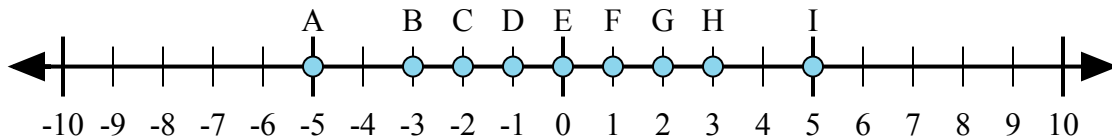
14.          **E**          

15.          **C**



Определите какой ответ отражает ответ каждой задачи на числовой прямой.

Ответы



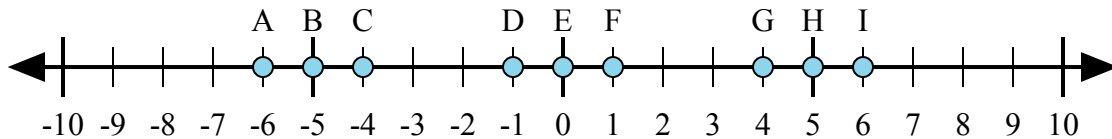
1)  $2 + (-3) =$

2)  $(-3) + (-2) =$

3)  $3 + (-2) =$

4)  $3 + 2 =$

5)  $(-2) + 3 =$



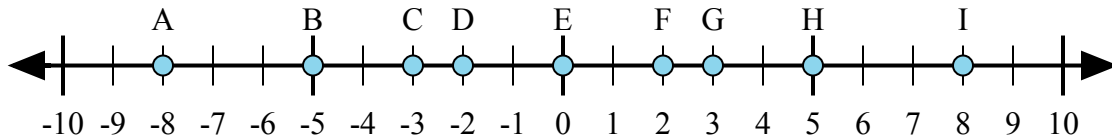
6)  $(-1) + 5 =$

7)  $(-5) + (-1) =$

8)  $5 + (-1) =$

9)  $1 + (-5) =$

10)  $5 + 1 =$



11)  $5 + 3 =$

12)  $(-5) + 3 =$

13)  $5 + (-3) =$

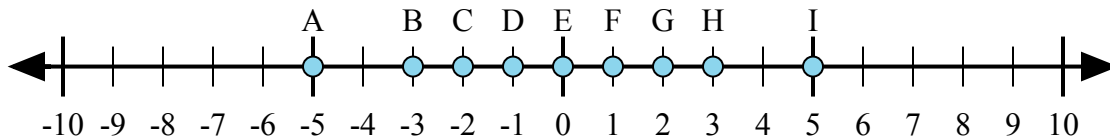
14)  $3 + (-5) =$

15)  $(-3) + 5 =$

1. \_\_\_\_\_
2. \_\_\_\_\_
3. \_\_\_\_\_
4. \_\_\_\_\_
5. \_\_\_\_\_
6. \_\_\_\_\_
7. \_\_\_\_\_
8. \_\_\_\_\_
9. \_\_\_\_\_
10. \_\_\_\_\_
11. \_\_\_\_\_
12. \_\_\_\_\_
13. \_\_\_\_\_
14. \_\_\_\_\_
15. \_\_\_\_\_



Определите какой ответ отражает ответ каждой задачи на числовой прямой.



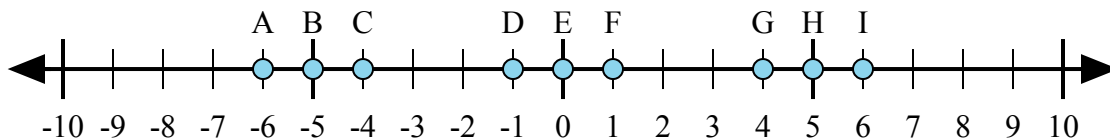
1)  $2 + (-3) =$

2)  $(-3) + (-2) =$

3)  $3 + (-2) =$

4)  $3 + 2 =$

5)  $(-2) + 3 =$



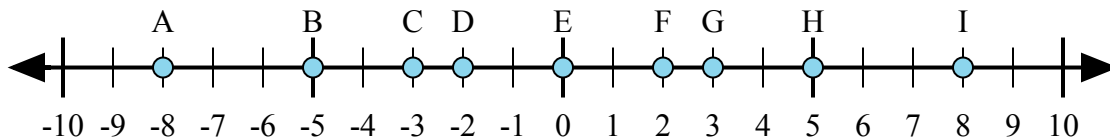
6)  $(-1) + 5 =$

7)  $(-5) + (-1) =$

8)  $5 + (-1) =$

9)  $1 + (-5) =$

10)  $5 + 1 =$



11)  $5 + 3 =$

12)  $(-5) + 3 =$

13)  $5 + (-3) =$

14)  $3 + (-5) =$

15)  $(-3) + 5 =$

**ОТВЕТЫ**

1.     **D**    

2.     **A**    

3.     **F**    

4.     **I**    

5.     **F**    

6.     **G**    

7.     **A**    

8.     **G**    

9.     **C**    

10.     **I**    

11.     **I**    

12.     **D**    

13.     **F**    

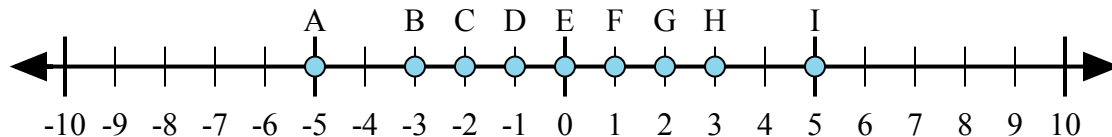
14.     **D**    

15.     **F**



Определите какой ответ отражает ответ каждой задачи на числовой прямой.

Ответы



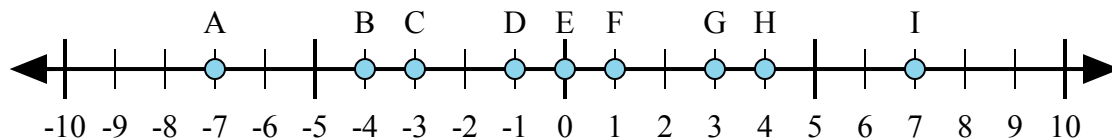
1)  $3 + (-2) =$

2)  $(-2) + 3 =$

3)  $2 + 3 =$

4)  $(-2) + (-3) =$

5)  $2 + (-3) =$



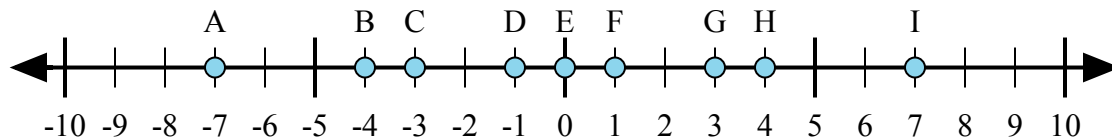
6)  $4 + (-3) =$

7)  $3 + 4 =$

8)  $(-4) + 3 =$

9)  $(-3) + 4 =$

10)  $(-3) + (-4) =$



11)  $4 + 3 =$

12)  $4 + (-3) =$

13)  $(-4) + 3 =$

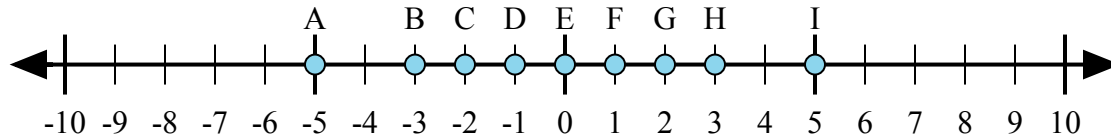
14)  $(-3) + 4 =$

15)  $(-4) + (-3) =$

1. \_\_\_\_\_
2. \_\_\_\_\_
3. \_\_\_\_\_
4. \_\_\_\_\_
5. \_\_\_\_\_
6. \_\_\_\_\_
7. \_\_\_\_\_
8. \_\_\_\_\_
9. \_\_\_\_\_
10. \_\_\_\_\_
11. \_\_\_\_\_
12. \_\_\_\_\_
13. \_\_\_\_\_
14. \_\_\_\_\_
15. \_\_\_\_\_



Определите какой ответ отражает ответ каждой задачи на числовой прямой.



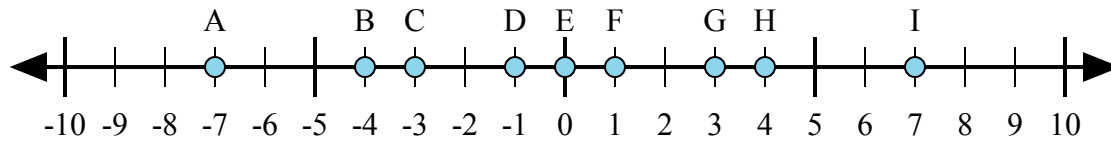
1)  $3 + (-2) =$

2)  $(-2) + 3 =$

3)  $2 + 3 =$

4)  $(-2) + (-3) =$

5)  $2 + (-3) =$



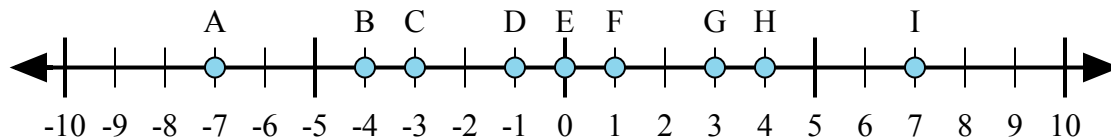
6)  $4 + (-3) =$

7)  $3 + 4 =$

8)  $(-4) + 3 =$

9)  $(-3) + 4 =$

10)  $(-3) + (-4) =$



11)  $4 + 3 =$

12)  $4 + (-3) =$

13)  $(-4) + 3 =$

14)  $(-3) + 4 =$

15)  $(-4) + (-3) =$

**ОТВЕТЫ**

1.         **F**        

2.         **F**        

3.         **I**        

4.         **A**        

5.         **D**        

6.         **F**        

7.         **I**        

8.         **D**        

9.         **F**        

10.         **A**        

11.         **I**        

12.         **F**        

13.         **D**        

14.         **F**        

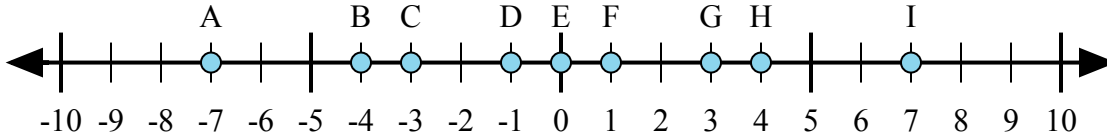
15.         **A**





Определите какой ответ отражает ответ каждой задачи на числовой прямой.

Ответы



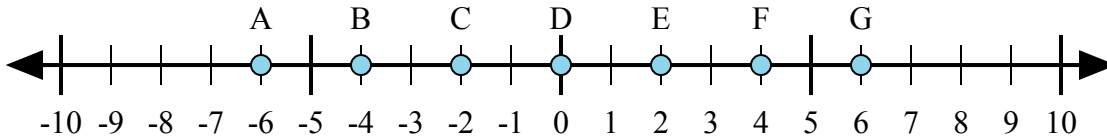
1)  $4 + (-3) =$

2)  $3 + (-4) =$

3)  $(-3) + (-4) =$

4)  $(-4) + 3 =$

5)  $3 + 4 =$



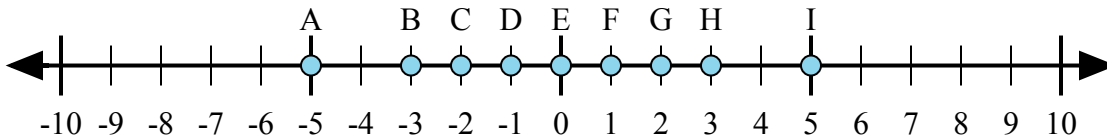
6)  $(-4) + 2 =$

7)  $(-2) + 4 =$

8)  $4 + 2 =$

9)  $(-4) + (-2) =$

10)  $2 + (-4) =$



11)  $(-3) + 2 =$

12)  $2 + (-3) =$

13)  $(-2) + 3 =$

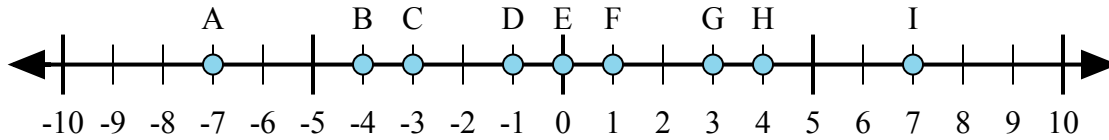
14)  $(-3) + (-2) =$

15)  $3 + (-2) =$

1. \_\_\_\_\_
2. \_\_\_\_\_
3. \_\_\_\_\_
4. \_\_\_\_\_
5. \_\_\_\_\_
6. \_\_\_\_\_
7. \_\_\_\_\_
8. \_\_\_\_\_
9. \_\_\_\_\_
10. \_\_\_\_\_
11. \_\_\_\_\_
12. \_\_\_\_\_
13. \_\_\_\_\_
14. \_\_\_\_\_
15. \_\_\_\_\_



Определите какой ответ отражает ответ каждой задачи на числовой прямой.



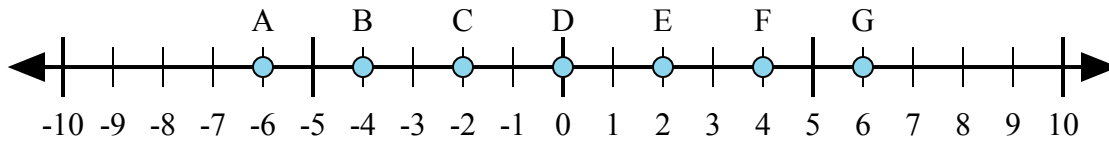
1)  $4 + (-3) =$

2)  $3 + (-4) =$

3)  $(-3) + (-4) =$

4)  $(-4) + 3 =$

5)  $3 + 4 =$



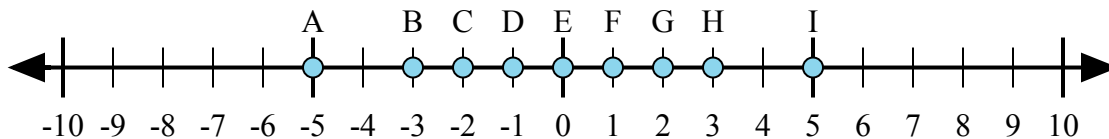
6)  $(-4) + 2 =$

7)  $(-2) + 4 =$

8)  $4 + 2 =$

9)  $(-4) + (-2) =$

10)  $2 + (-4) =$



11)  $(-3) + 2 =$

12)  $2 + (-3) =$

13)  $(-2) + 3 =$

14)  $(-3) + (-2) =$

15)  $3 + (-2) =$

**ОТВЕТЫ**

1.         **F**        

2.         **D**        

3.         **A**        

4.         **D**        

5.         **I**        

6.         **C**        

7.         **E**        

8.         **G**        

9.         **A**        

10.         **C**        

11.         **D**        

12.         **D**        

13.         **F**        

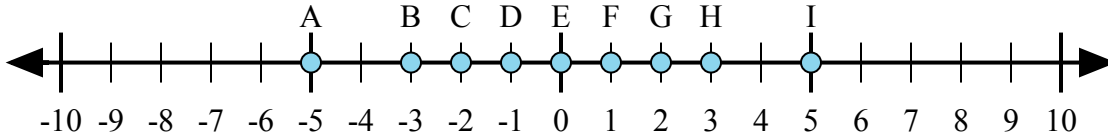
14.         **A**        

15.         **F**



Определите какой ответ отражает ответ каждой задачи на числовой прямой.

Ответы



- 1)  $2 + 3 =$
- 2)  $2 + (-3) =$
- 3)  $3 + (-2) =$
- 4)  $(-2) + 3 =$
- 5)  $(-3) + 2 =$

1. \_\_\_\_\_

2. \_\_\_\_\_

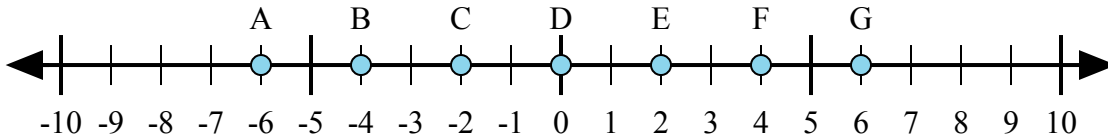
3. \_\_\_\_\_

4. \_\_\_\_\_

5. \_\_\_\_\_

6. \_\_\_\_\_

7. \_\_\_\_\_



- 6)  $4 + (-2) =$
- 7)  $2 + 4 =$
- 8)  $(-2) + 4 =$
- 9)  $(-4) + 2 =$
- 10)  $(-2) + (-4) =$

8. \_\_\_\_\_

9. \_\_\_\_\_

10. \_\_\_\_\_

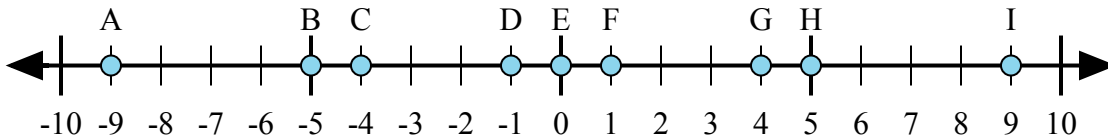
11. \_\_\_\_\_

12. \_\_\_\_\_

13. \_\_\_\_\_

14. \_\_\_\_\_

15. \_\_\_\_\_

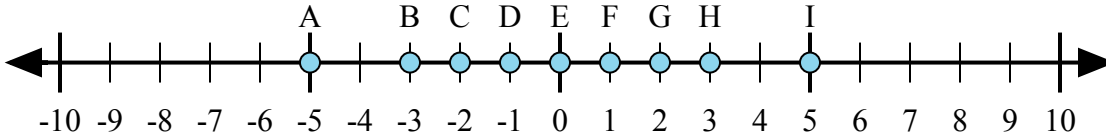


- 11)  $5 + (-4) =$
- 12)  $4 + (-5) =$
- 13)  $4 + 5 =$
- 14)  $(-5) + 4 =$
- 15)  $(-4) + 5 =$



Определите какой ответ отражает ответ каждой задачи на числовой прямой.

**ОТВЕТЫ**



- 1)  $2 + 3 =$
- 2)  $2 + (-3) =$
- 3)  $3 + (-2) =$
- 4)  $(-2) + 3 =$
- 5)  $(-3) + 2 =$

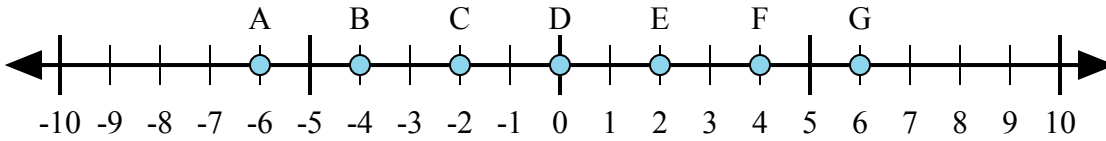
1. I

2. D

3. F

4. F

5. D



- 6)  $4 + (-2) =$
- 7)  $2 + 4 =$
- 8)  $(-2) + 4 =$
- 9)  $(-4) + 2 =$
- 10)  $(-2) + (-4) =$

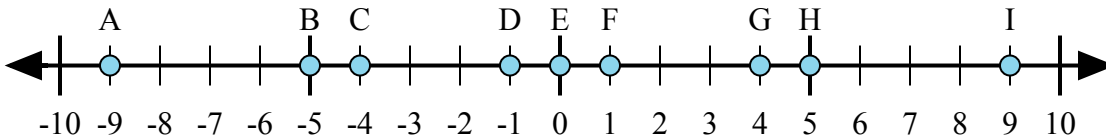
6. E

7. G

8. E

9. C

10. A



- 11)  $5 + (-4) =$
- 12)  $4 + (-5) =$
- 13)  $4 + 5 =$
- 14)  $(-5) + 4 =$
- 15)  $(-4) + 5 =$

11. F

12. D

13. I

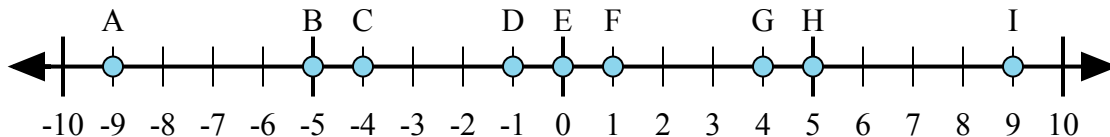
14. D

15. F



Определите какой ответ отражает ответ каждой задачи на числовой прямой.

**Ответы**



1)  $(-5) + 4 =$

2)  $(-4) + (-5) =$

3)  $4 + 5 =$

4)  $(-4) + 5 =$

5)  $5 + (-4) =$

1. \_\_\_\_\_

2. \_\_\_\_\_

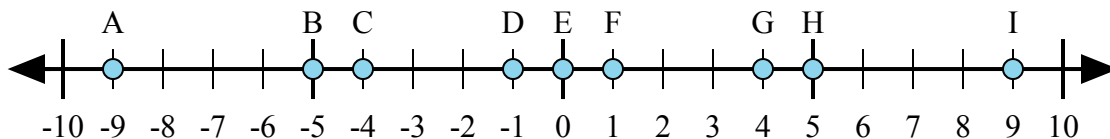
3. \_\_\_\_\_

4. \_\_\_\_\_

5. \_\_\_\_\_

6. \_\_\_\_\_

7. \_\_\_\_\_



6)  $(-5) + (-4) =$

7)  $5 + (-4) =$

8)  $4 + (-5) =$

9)  $(-5) + 4 =$

10)  $5 + 4 =$

8. \_\_\_\_\_

9. \_\_\_\_\_

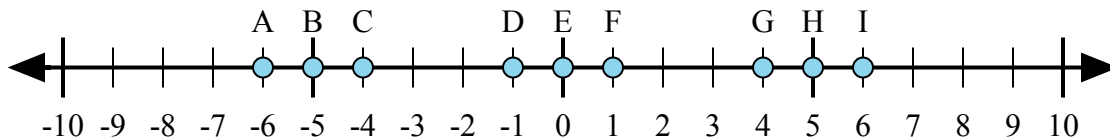
10. \_\_\_\_\_

11. \_\_\_\_\_

12. \_\_\_\_\_

13. \_\_\_\_\_

14. \_\_\_\_\_



11)  $(-5) + (-1) =$

12)  $(-5) + 1 =$

13)  $5 + 1 =$

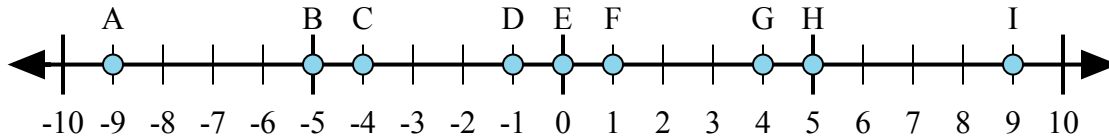
14)  $1 + (-5) =$

15)  $(-1) + 5 =$

15. \_\_\_\_\_



Определите какой ответ отражает ответ каждой задачи на числовой прямой.



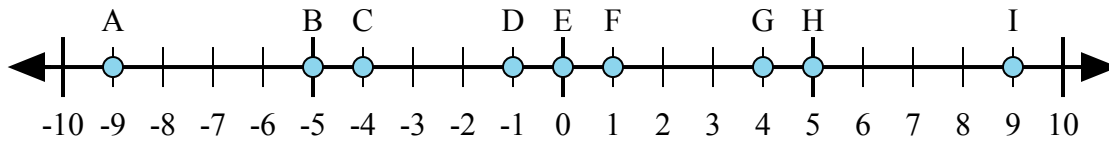
1)  $(-5) + 4 =$

2)  $(-4) + (-5) =$

3)  $4 + 5 =$

4)  $(-4) + 5 =$

5)  $5 + (-4) =$



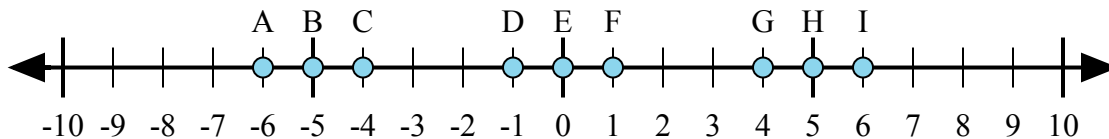
6)  $(-5) + (-4) =$

7)  $5 + (-4) =$

8)  $4 + (-5) =$

9)  $(-5) + 4 =$

10)  $5 + 4 =$



11)  $(-5) + (-1) =$

12)  $(-5) + 1 =$

13)  $5 + 1 =$

14)  $1 + (-5) =$

15)  $(-1) + 5 =$

**ОТВЕТЫ**

1.     **D**    

2.     **A**    

3.     **I**    

4.     **F**    

5.     **F**    

6.     **A**    

7.     **F**    

8.     **D**    

9.     **D**    

10.     **I**    

11.     **A**    

12.     **C**    

13.     **I**    

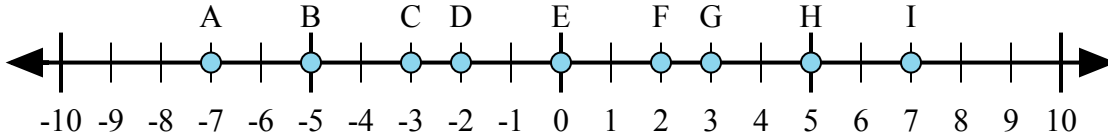
14.     **C**    

15.     **G**



Определите какой ответ отражает ответ каждой задачи на числовой прямой.

Ответы



1)  $(-5) + 2 =$

2)  $(-2) + (-5) =$

3)  $2 + 5 =$

4)  $(-2) + 5 =$

5)  $2 + (-5) =$

1. \_\_\_\_\_

2. \_\_\_\_\_

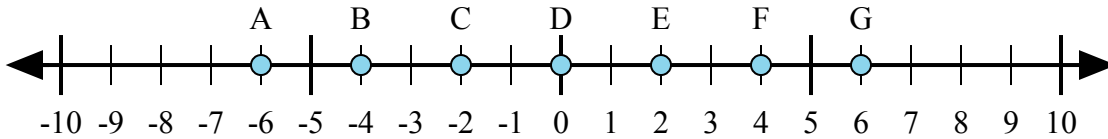
3. \_\_\_\_\_

4. \_\_\_\_\_

5. \_\_\_\_\_

6. \_\_\_\_\_

7. \_\_\_\_\_



6)  $(-2) + 4 =$

7)  $(-4) + 2 =$

8)  $(-2) + (-4) =$

9)  $2 + (-4) =$

10)  $2 + 4 =$

8. \_\_\_\_\_

9. \_\_\_\_\_

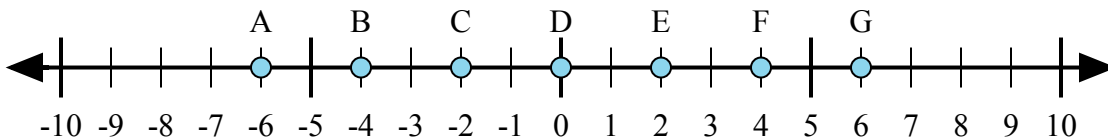
10. \_\_\_\_\_

11. \_\_\_\_\_

12. \_\_\_\_\_

13. \_\_\_\_\_

14. \_\_\_\_\_



11)  $4 + 2 =$

12)  $(-4) + (-2) =$

13)  $(-2) + 4 =$

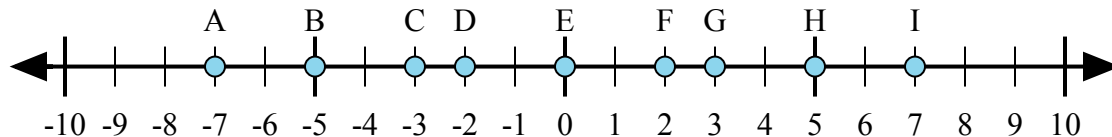
14)  $(-4) + 2 =$

15)  $2 + (-4) =$

15. \_\_\_\_\_



Определите какой ответ отражает ответ каждой задачи на числовой прямой.



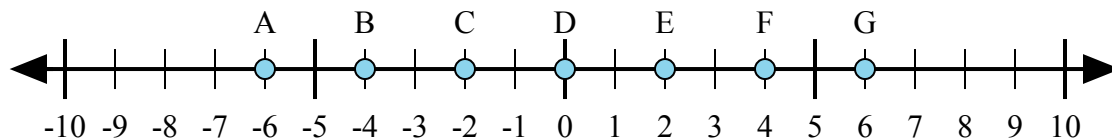
1)  $(-5) + 2 =$

2)  $(-2) + (-5) =$

3)  $2 + 5 =$

4)  $(-2) + 5 =$

5)  $2 + (-5) =$



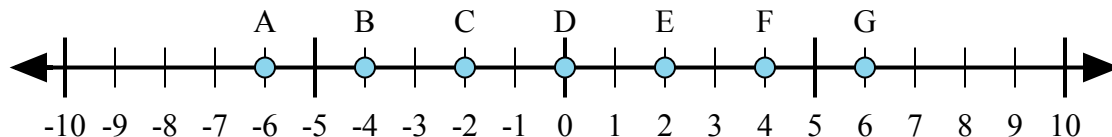
6)  $(-2) + 4 =$

7)  $(-4) + 2 =$

8)  $(-2) + (-4) =$

9)  $2 + (-4) =$

10)  $2 + 4 =$



11)  $4 + 2 =$

12)  $(-4) + (-2) =$

13)  $(-2) + 4 =$

14)  $(-4) + 2 =$

15)  $2 + (-4) =$

**ОТВЕТЫ**

1.           **C**          

2.           **A**          

3.           **I**          

4.           **G**          

5.           **C**          

6.           **E**          

7.           **C**          

8.           **A**          

9.           **C**          

10.          **G**          

11.          **G**          

12.          **A**          

13.          **E**          

14.          **C**          

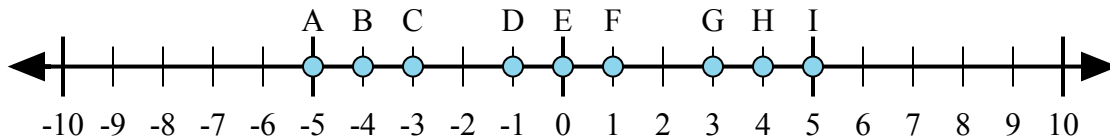
15.          **C**





Определите какой ответ отражает ответ каждой задачи на числовой прямой.

Ответы



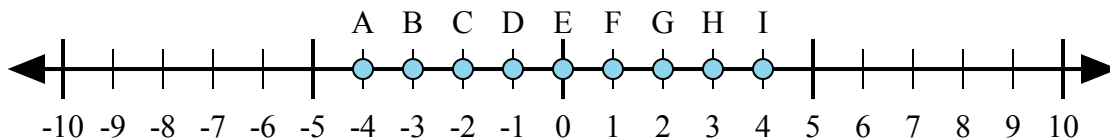
1)  $4 + (-1) =$

2)  $4 + 1 =$

3)  $1 + (-4) =$

4)  $(-4) + (-1) =$

5)  $(-4) + 1 =$



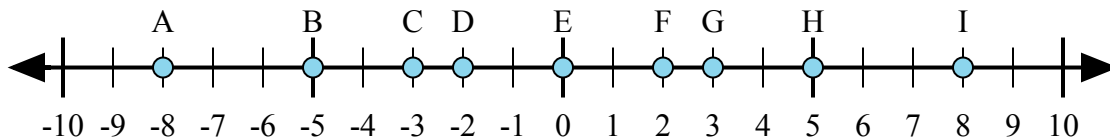
6)  $(-3) + (-1) =$

7)  $(-3) + 1 =$

8)  $3 + 1 =$

9)  $1 + (-3) =$

10)  $(-1) + 3 =$



11)  $3 + (-5) =$

12)  $(-5) + 3 =$

13)  $5 + 3 =$

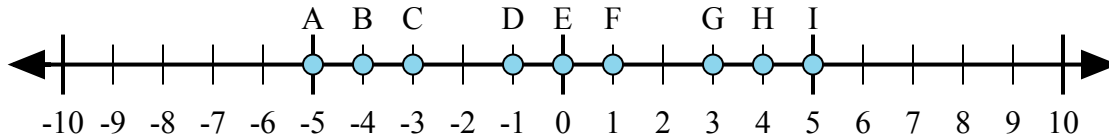
14)  $(-3) + 5 =$

15)  $(-5) + (-3) =$

1. \_\_\_\_\_
2. \_\_\_\_\_
3. \_\_\_\_\_
4. \_\_\_\_\_
5. \_\_\_\_\_
6. \_\_\_\_\_
7. \_\_\_\_\_
8. \_\_\_\_\_
9. \_\_\_\_\_
10. \_\_\_\_\_
11. \_\_\_\_\_
12. \_\_\_\_\_
13. \_\_\_\_\_
14. \_\_\_\_\_
15. \_\_\_\_\_



Определите какой ответ отражает ответ каждой задачи на числовой прямой.



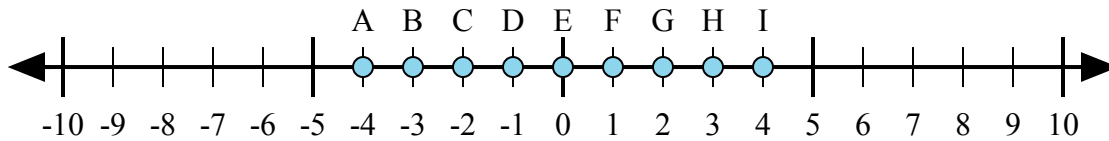
1)  $4 + (-1) =$

2)  $4 + 1 =$

3)  $1 + (-4) =$

4)  $(-4) + (-1) =$

5)  $(-4) + 1 =$



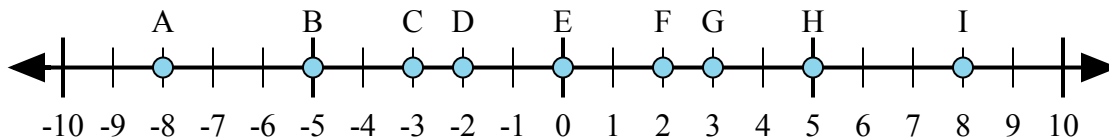
6)  $(-3) + (-1) =$

7)  $(-3) + 1 =$

8)  $3 + 1 =$

9)  $1 + (-3) =$

10)  $(-1) + 3 =$



11)  $3 + (-5) =$

12)  $(-5) + 3 =$

13)  $5 + 3 =$

14)  $(-3) + 5 =$

15)  $(-5) + (-3) =$

**ОТВЕТЫ**

1.     **G**    

2.     **I**    

3.     **C**    

4.     **A**    

5.     **C**    

6.     **A**    

7.     **C**    

8.     **I**    

9.     **C**    

10.     **G**    

11.     **D**    

12.     **D**    

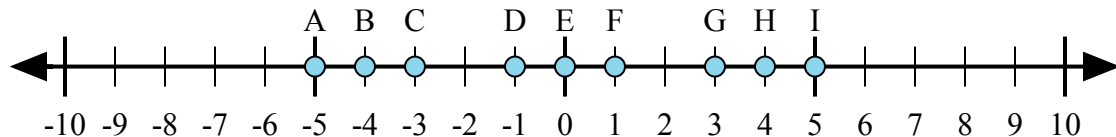
13.     **I**    

14.     **F**    

15.     **A**



Определите какой ответ отражает ответ каждой задачи на числовой прямой.



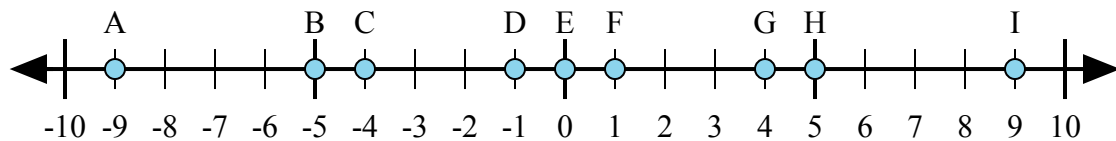
1)  $4 + 1 =$

2)  $4 + (-1) =$

3)  $1 + (-4) =$

4)  $(-4) + (-1) =$

5)  $(-1) + 4 =$



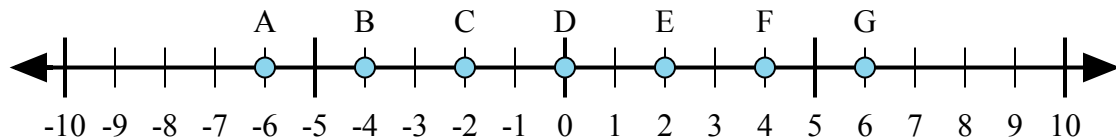
6)  $(-4) + 5 =$

7)  $4 + (-5) =$

8)  $4 + 5 =$

9)  $(-4) + (-5) =$

10)  $(-5) + 4 =$



11)  $(-4) + (-2) =$

12)  $2 + (-4) =$

13)  $4 + 2 =$

14)  $(-2) + 4 =$

15)  $4 + (-2) =$

Ответы

1. \_\_\_\_\_

2. \_\_\_\_\_

3. \_\_\_\_\_

4. \_\_\_\_\_

5. \_\_\_\_\_

6. \_\_\_\_\_

7. \_\_\_\_\_

8. \_\_\_\_\_

9. \_\_\_\_\_

10. \_\_\_\_\_

11. \_\_\_\_\_

12. \_\_\_\_\_

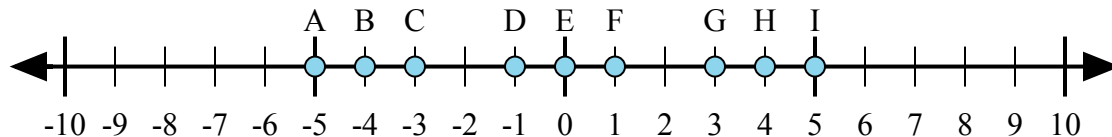
13. \_\_\_\_\_

14. \_\_\_\_\_

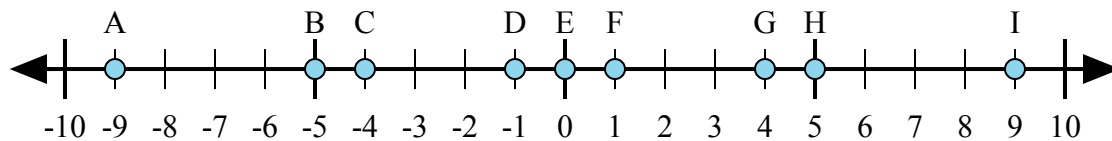
15. \_\_\_\_\_



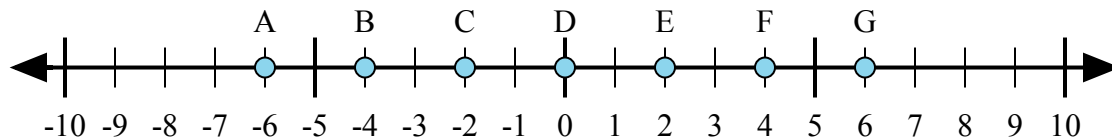
Определите какой ответ отражает ответ каждой задачи на числовой прямой.



- 1)  $4 + 1 =$
- 2)  $4 + (-1) =$
- 3)  $1 + (-4) =$
- 4)  $(-4) + (-1) =$
- 5)  $(-1) + 4 =$



- 6)  $(-4) + 5 =$
- 7)  $4 + (-5) =$
- 8)  $4 + 5 =$
- 9)  $(-4) + (-5) =$
- 10)  $(-5) + 4 =$



- 11)  $(-4) + (-2) =$
- 12)  $2 + (-4) =$
- 13)  $4 + 2 =$
- 14)  $(-2) + 4 =$
- 15)  $4 + (-2) =$

**ОТВЕТЫ**

1.     **I**
2.     **G**
3.     **C**
4.     **A**
5.     **G**
6.     **F**
7.     **D**
8.     **I**
9.     **A**
10.     **D**
11.     **A**
12.     **C**
13.     **G**
14.     **E**
15.     **E**