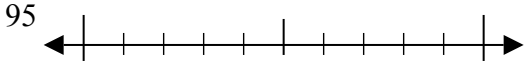




Используйте числовые прямые для округления до десятков.

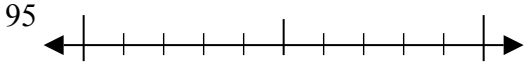
Отвeты

об)



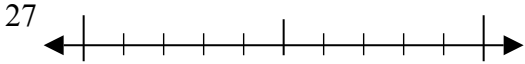
об. 100

1)



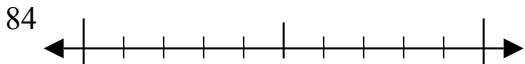
1. _____

2)



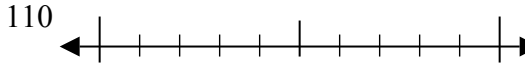
2. _____

3)



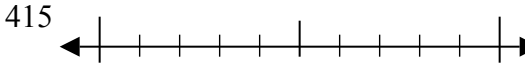
3. _____

4)



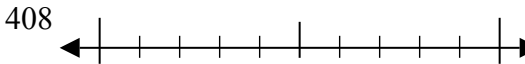
4. _____

5)



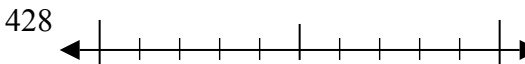
5. _____

6)



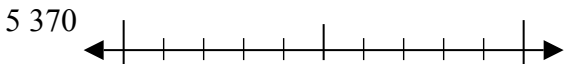
6. _____

7)



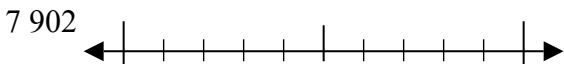
7. _____

8)



8. _____

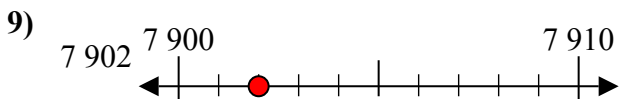
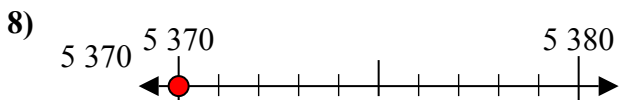
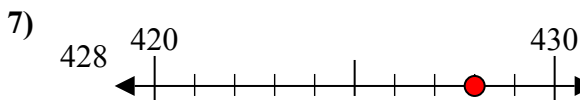
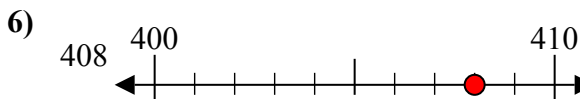
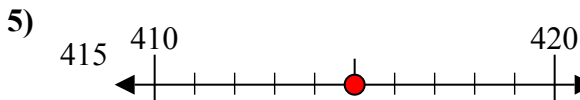
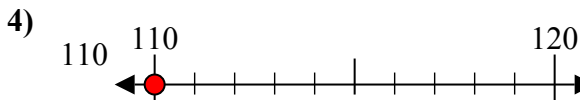
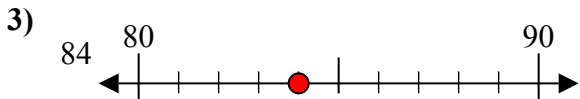
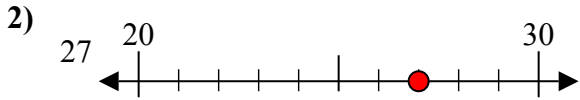
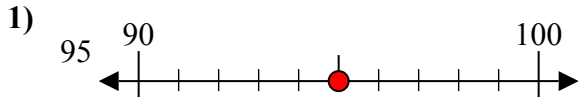
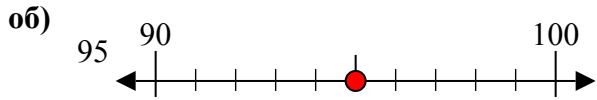
9)



9. _____



Используйте числовые прямые для округления до десятков.



Ответы

об. 100

1. 100

2. 30

3. 80

4. 110

5. 420

6. 410

7. 430

8. 5370

9. 7900