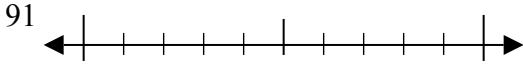




Используйте числовые прямые для округления до десятков.

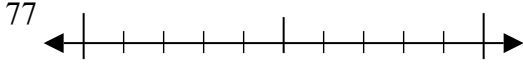
Отвeты

об)



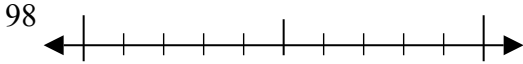
об. 90

1)



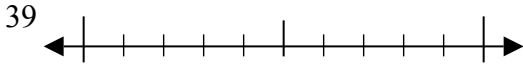
1. _____

2)



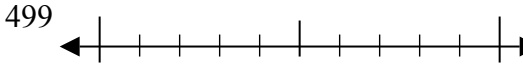
2. _____

3)



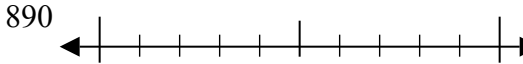
3. _____

4)



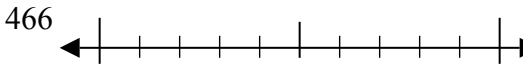
4. _____

5)



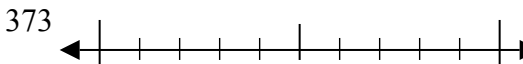
5. _____

6)



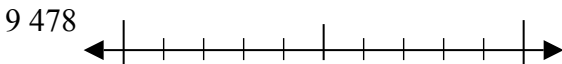
6. _____

7)



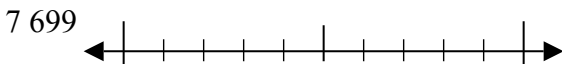
7. _____

8)



8. _____

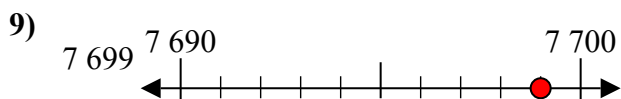
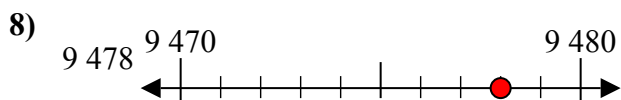
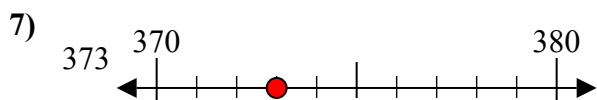
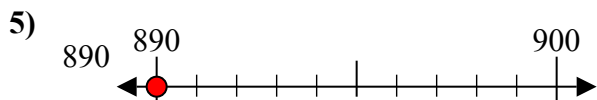
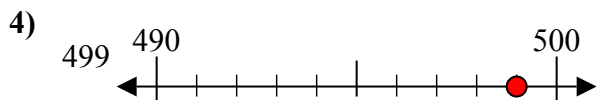
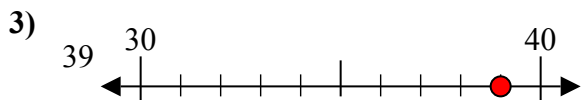
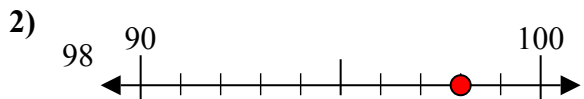
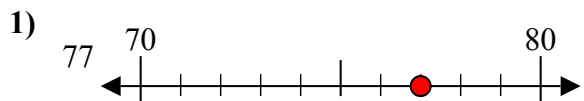
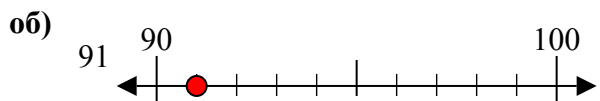
9)



9. _____



Используйте числовые прямые для округления до десятков.



Ответы

об. 90

1. 80

2. 100

3. 40

4. 500

5. 890

6. 470

7. 370

8. 9480

9. 7700