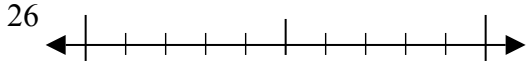




Используйте числовые прямые для округления до десятков.

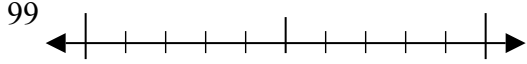
Ответы

об)



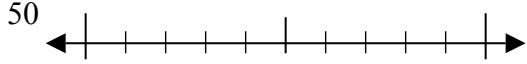
об. 30

1)



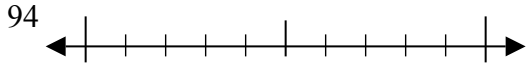
1. _____

2)



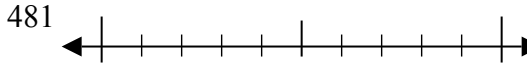
2. _____

3)



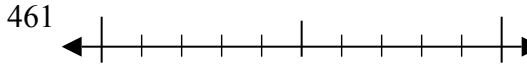
3. _____

4)



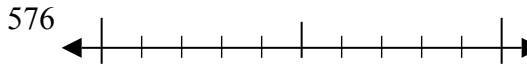
4. _____

5)



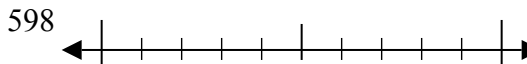
5. _____

6)



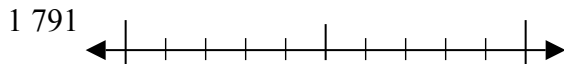
6. _____

7)



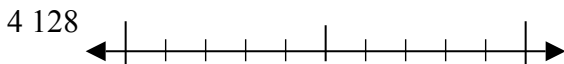
7. _____

8)



8. _____


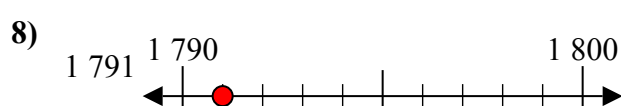
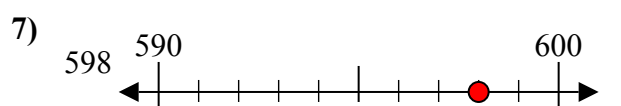
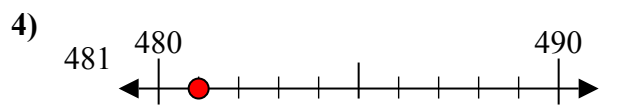
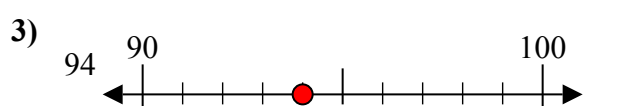
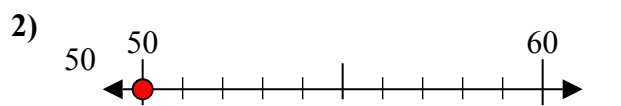
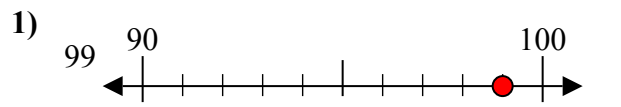
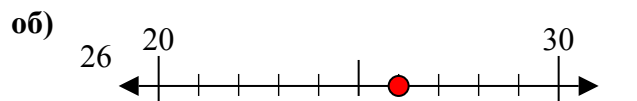
9)



9. _____



Используйте числовые прямые для округления до десятков.



Отвeты

об. 30

1. 100

2. 50

3. 90

4. 480

5. 460

6. 580

7. 600

8. 1790

9. 4130