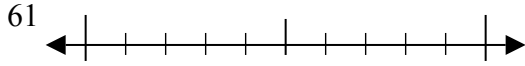




Используйте числовые прямые для округления до десятков.

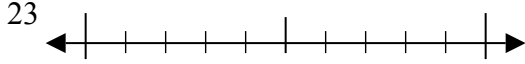
**Отвѣты**

об)



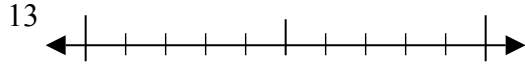
об. 60

1)



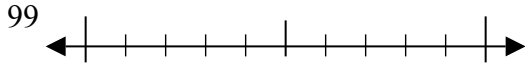
1. \_\_\_\_\_

2)



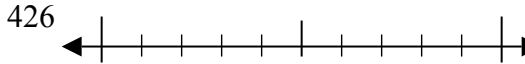
2. \_\_\_\_\_

3)



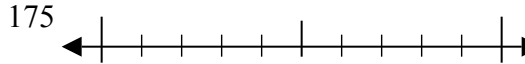
3. \_\_\_\_\_

4)



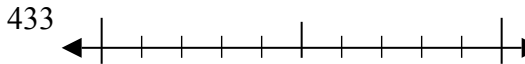
4. \_\_\_\_\_

5)



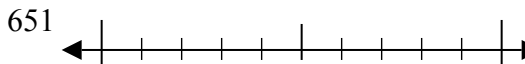
5. \_\_\_\_\_

6)



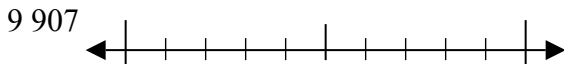
6. \_\_\_\_\_

7)



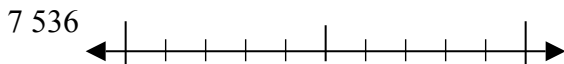
7. \_\_\_\_\_

8)



8. \_\_\_\_\_

9)

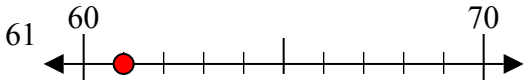


9. \_\_\_\_\_

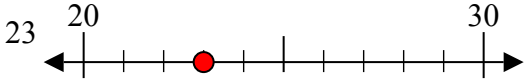


Используйте числовые прямые для округления до десятков.

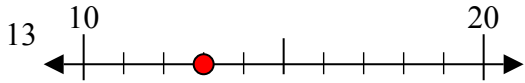
об)



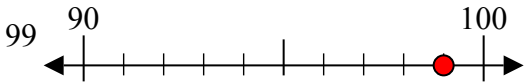
1)



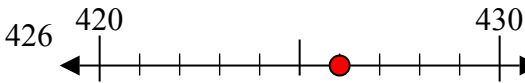
2)



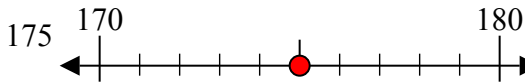
3)



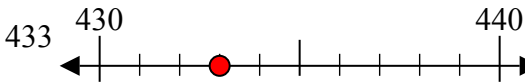
4)



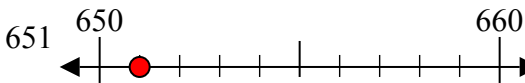
5)



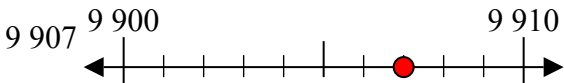
6)



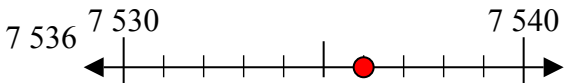
7)



8)



9)



**Ответы**

об. 60

1. 20

2. 10

3. 100

4. 430

5. 180

6. 430

7. 650

8. 9910

9. 7540