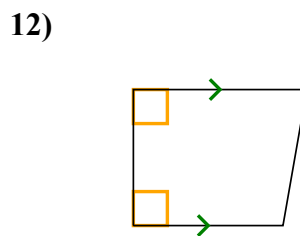
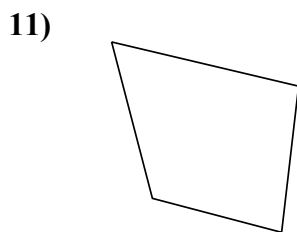
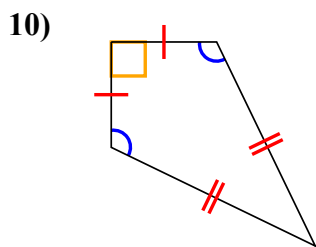
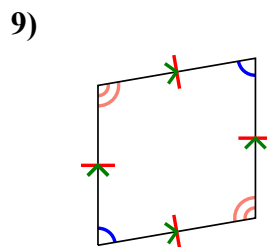
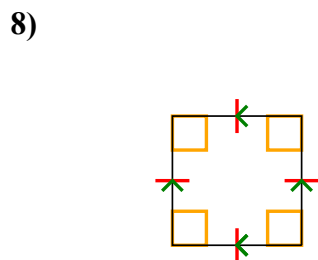
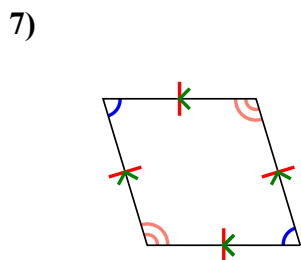
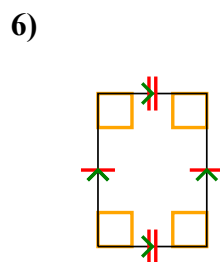
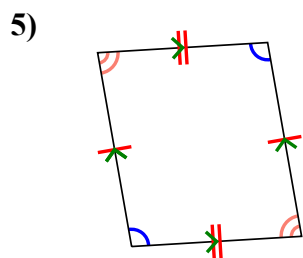
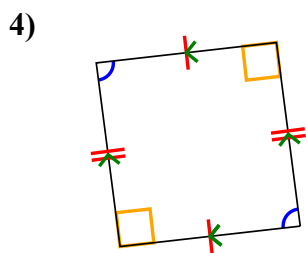
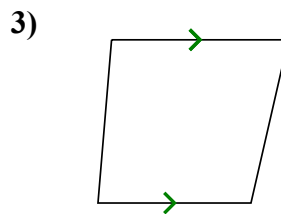
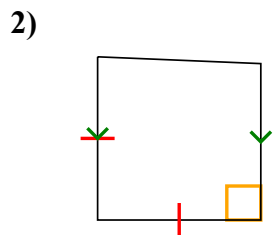
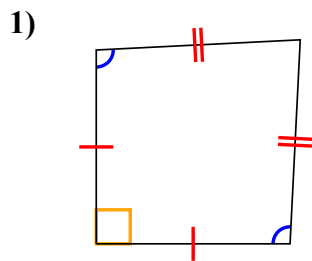




Определите какая перед Вами фигура: квадрат, прямоугольник, треугольник и т.п.

ОТВЕТЫ

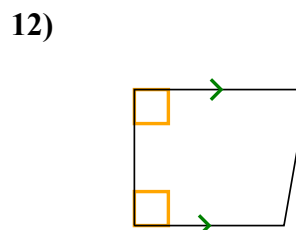
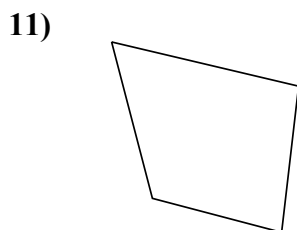
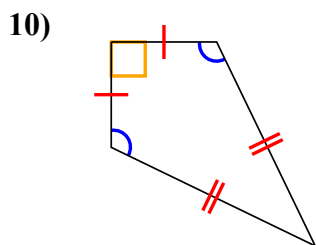
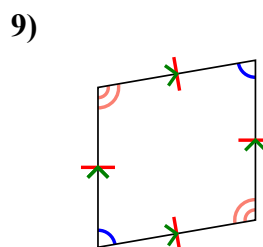
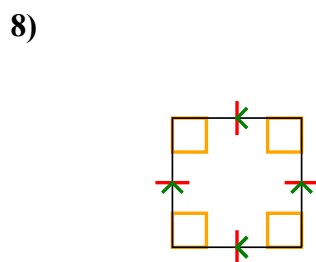
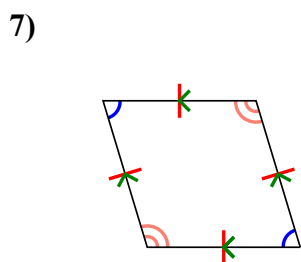
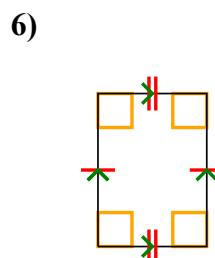
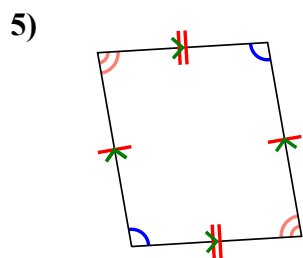
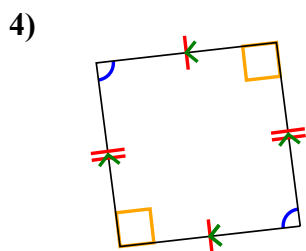
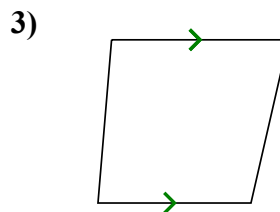
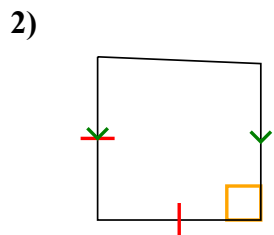
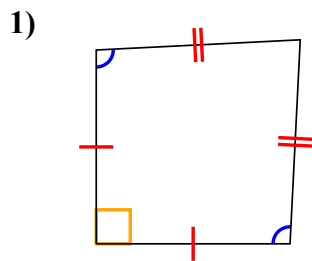


- 1. _____
- 2. _____
- 3. _____
- 4. _____
- 5. _____
- 6. _____
- 7. _____
- 8. _____
- 9. _____
- 10. _____
- 11. _____
- 12. _____



Определите какая перед Вами фигура: квадрат, прямоугольник, треугольник и т.п.

ОТВЕТЫ



1. Q,К

2. Q,Т

3. Q,Т

4. Q,Р

5. Q,Р

6. Q,Р,R

7. Q,Р,Н

8. Q,Р,Н,R,S

9. Q,Р,Н

10. Q,К

11. Q

12. Q,Т