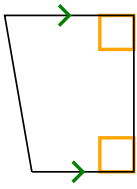




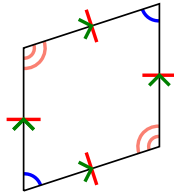
Определите какая перед Вами фигура: квадрат, прямоугольник, треугольник и т.п.

ОТВЕТЫ

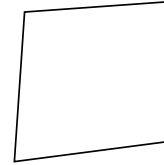
1)



2)



3)



1. \_\_\_\_\_

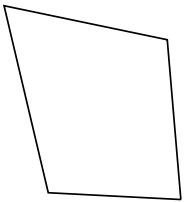
2. \_\_\_\_\_

3. \_\_\_\_\_

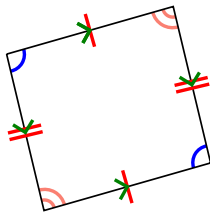
4. \_\_\_\_\_

5. \_\_\_\_\_

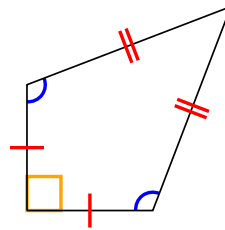
4)



5)



6)



6. \_\_\_\_\_

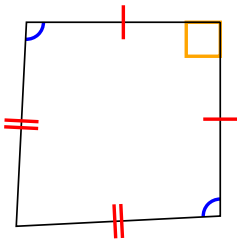
7. \_\_\_\_\_

8. \_\_\_\_\_

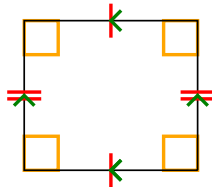
9. \_\_\_\_\_

10. \_\_\_\_\_

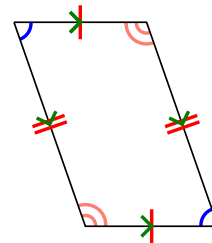
7)



8)



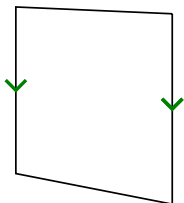
9)



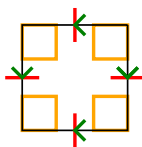
11. \_\_\_\_\_

12. \_\_\_\_\_


10)



11)



12)

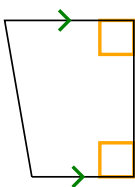




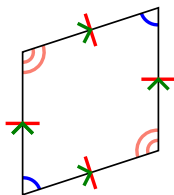
Определите какая перед Вами фигура: квадрат, прямоугольник, треугольник и т.п.

**ОТВЕТЫ**


1)



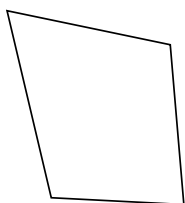
2)



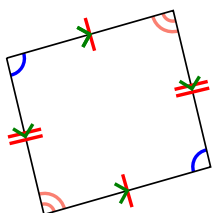
3)



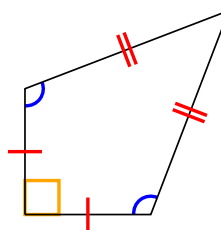
4)



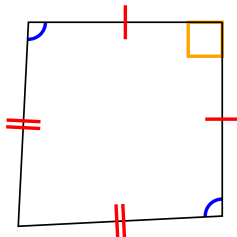
5)



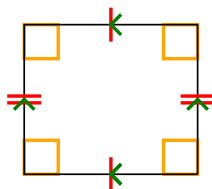
6)



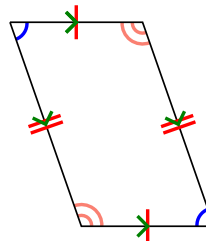
7)



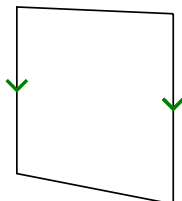
8)



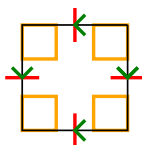
9)




10)



11)



12)



1. Q,T
2. Q,P,H
3. Q
4. Q
5. Q,P
6. Q,K
7. Q,K
8. Q,P,R
9. Q,P
10. Q,T
11. Q,P,H,R,S
12. Q