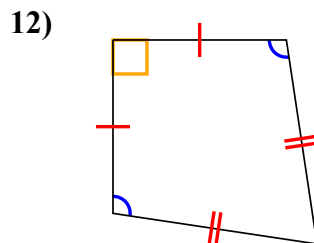
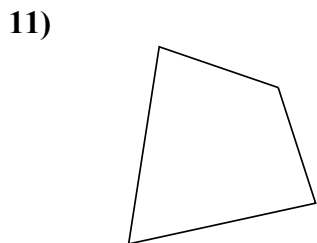
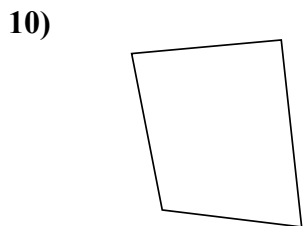
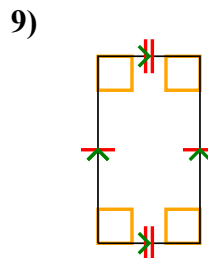
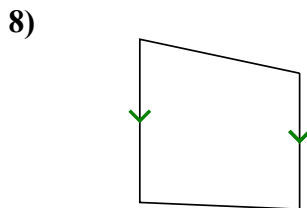
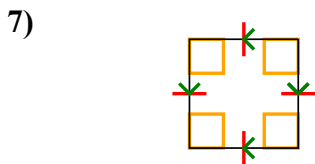
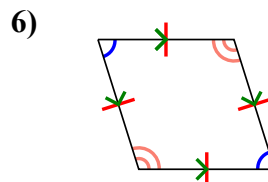
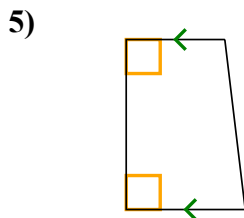
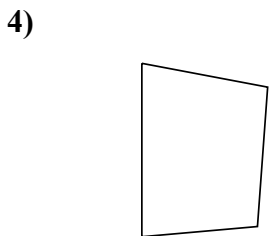
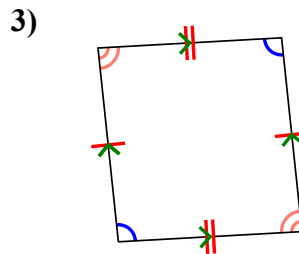
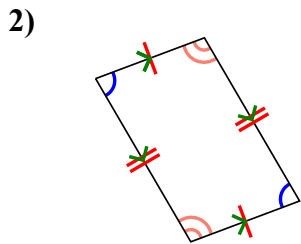
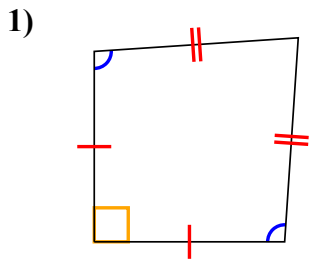




Определите какая перед Вами фигура: квадрат, прямоугольник, треугольник и т.п.

ОТВЕТЫ

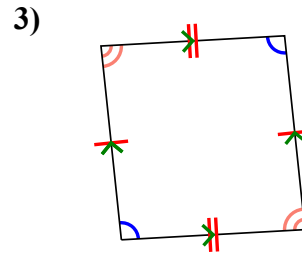
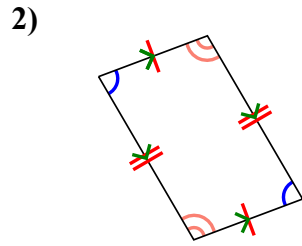
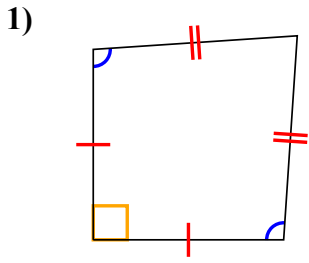


- 1. \_\_\_\_\_
- 2. \_\_\_\_\_
- 3. \_\_\_\_\_
- 4. \_\_\_\_\_
- 5. \_\_\_\_\_
- 6. \_\_\_\_\_
- 7. \_\_\_\_\_
- 8. \_\_\_\_\_
- 9. \_\_\_\_\_
- 10. \_\_\_\_\_
- 11. \_\_\_\_\_
- 12. \_\_\_\_\_

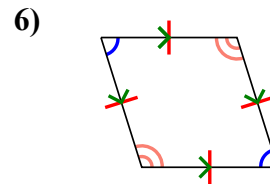
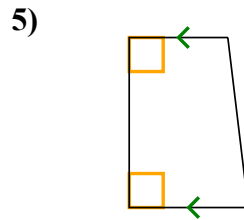
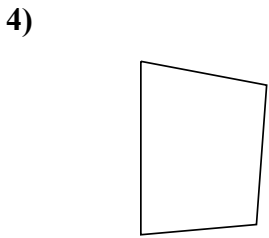


Определите какая перед Вами фигура: квадрат, прямоугольник, треугольник и т.п.

**ОТВЕТЫ**



1. Q, K

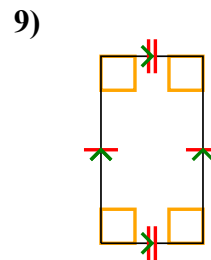
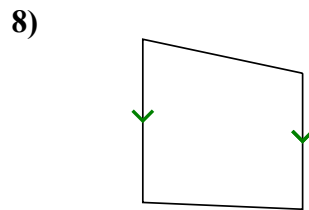
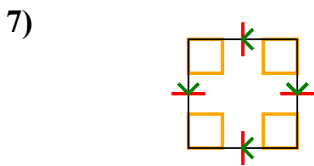


2. Q, P

3. Q, P

4. Q

5. Q, T

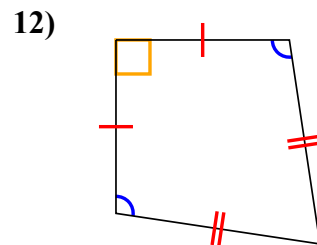
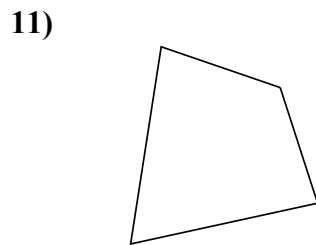
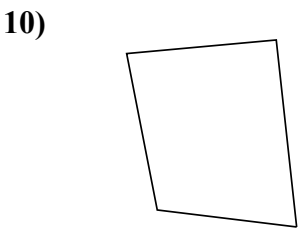


6. Q, P, H

7. Q, P, H, R, S

8. Q, T

9. Q, P, R



10. Q

11. Q

12. Q, K