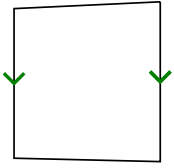




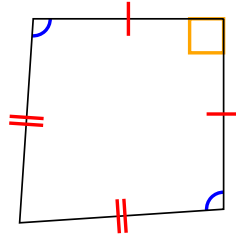
Определите какая перед Вами фигура: квадрат, прямоугольник, треугольник и т.п.

ОТВЕТЫ

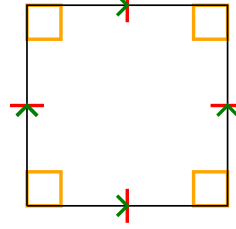
1)



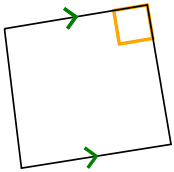
2)



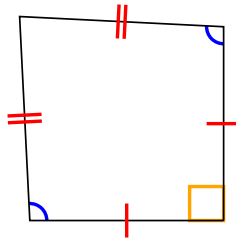
3)



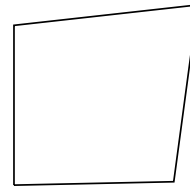
4)



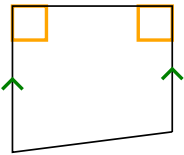
5)



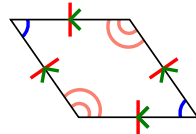
6)



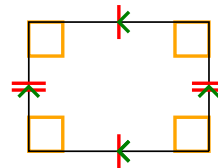
7)



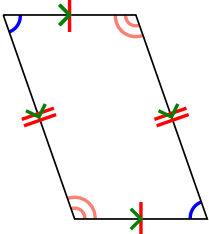
8)



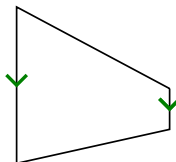
9)



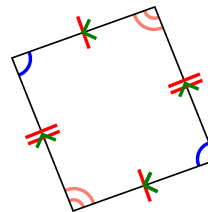
10)



11)



12)



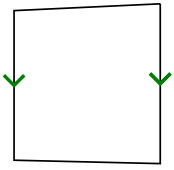
- 1. _____
- 2. _____
- 3. _____
- 4. _____
- 5. _____
- 6. _____
- 7. _____
- 8. _____
- 9. _____
- 10. _____
- 11. _____
- 12. _____



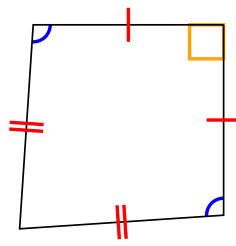
Определите какая перед Вами фигура: квадрат, прямоугольник, треугольник и т.п.

ОТВЕТЫ

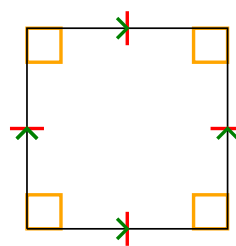
1)



2)

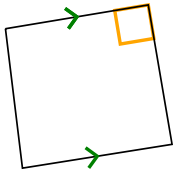


3)

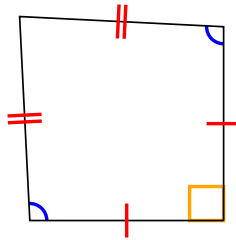


1. Q,T

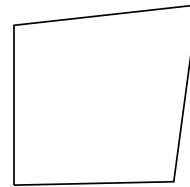
4)



5)



6)



2. Q,K

3. Q,P,H,R,S

4. Q,T

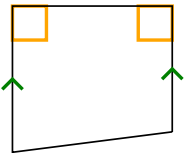
5. Q,K

6. Q

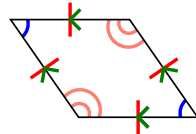
7. Q,T

8. Q,P,H

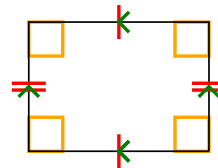
7)



8)



9)



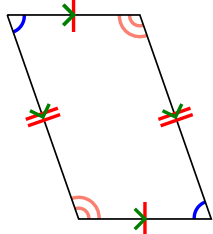
9. Q,P,R

10. Q,P

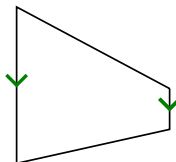
11. Q,T

12. Q,P

10)



11)



12)

