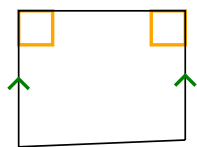




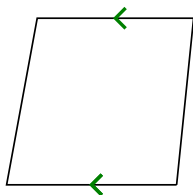
Определите какая перед Вами фигура: квадрат, прямоугольник, треугольник и т.п.

ОТВЕТЫ


1)



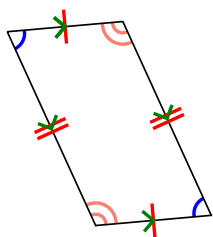
2)



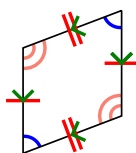
3)



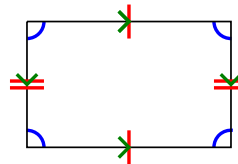
4)



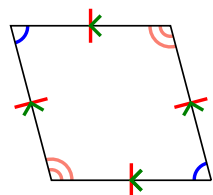
5)



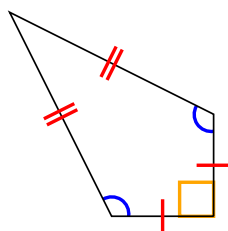
6)



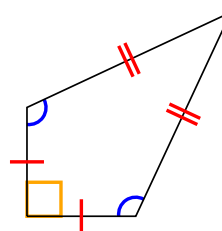
7)



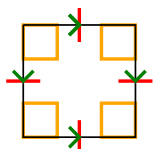
8)



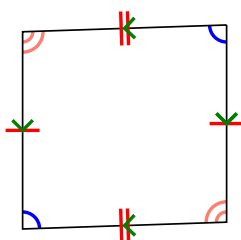
9)




10)



11)



12)

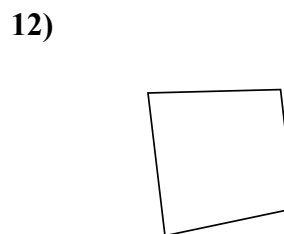
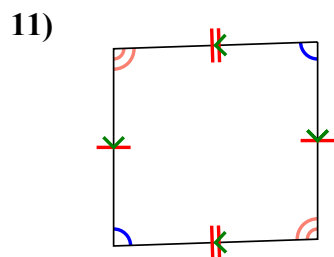
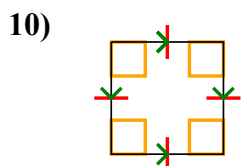
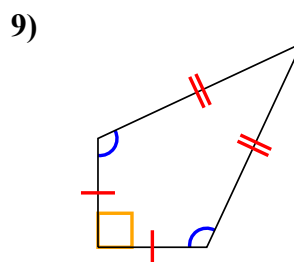
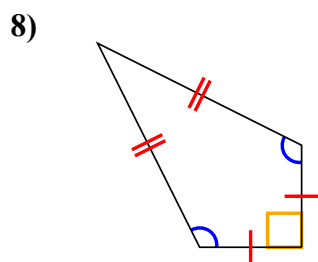
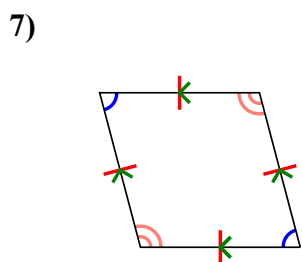
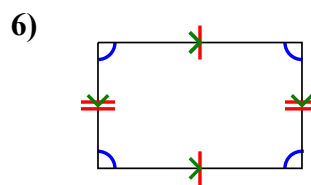
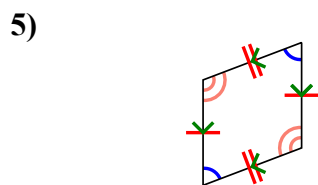
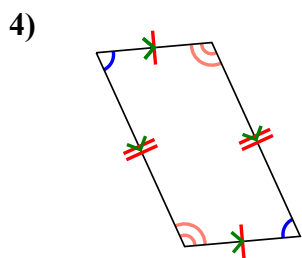
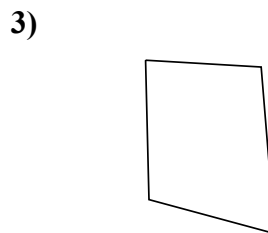
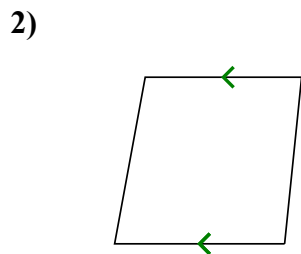
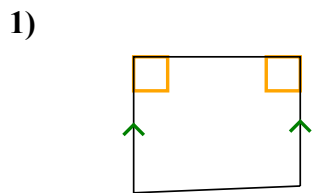


- 1. _____
- 2. _____
- 3. _____
- 4. _____
- 5. _____
- 6. _____
- 7. _____
- 8. _____
- 9. _____
- 10. _____
- 11. _____
- 12. _____



Определите какая перед Вами фигура: квадрат, прямоугольник, треугольник и т.п.

ОТВЕТЫ



1. Q,T

2. Q,T

3. Q

4. Q,P

5. Q,P

6. Q,P

7. Q,P,H

8. Q,K

9. Q,K

10. Q,P,H,R,S

11. Q,P

12. Q