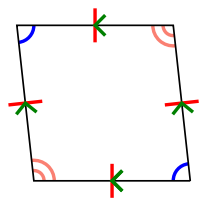




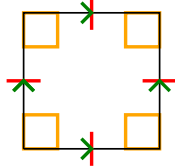
Определите какая перед Вами фигура: квадрат, прямоугольник, треугольник и т.п.

Ответы

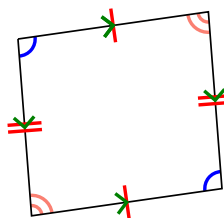
1)



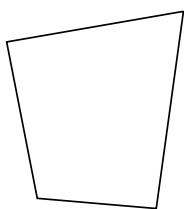
2)



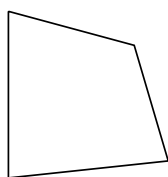
3)



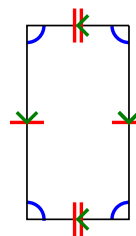
4)



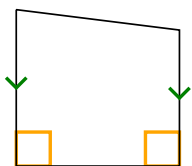
5)



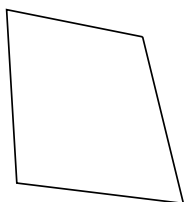
6)



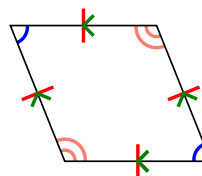
7)



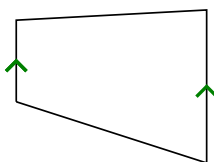
8)



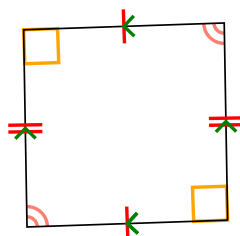
9)



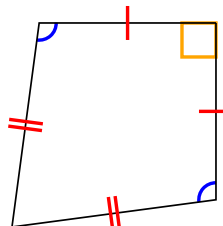
10)



11)



12)



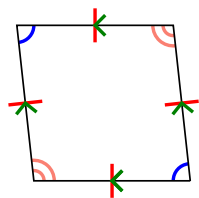
1. _____
2. _____
3. _____
4. _____
5. _____
6. _____
7. _____
8. _____
9. _____
10. _____
11. _____
12. _____



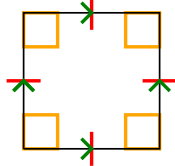
Определите какая перед Вами фигура: квадрат, прямоугольник, треугольник и т.п.

ОТВЕТЫ

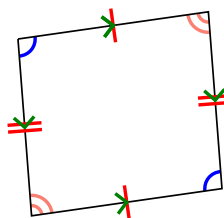
1)



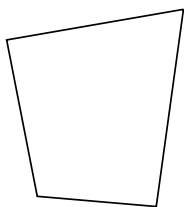
2)



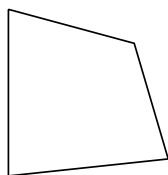
3)



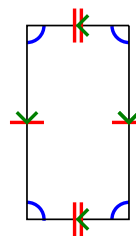
4)



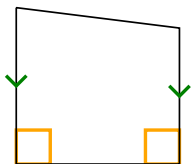
5)



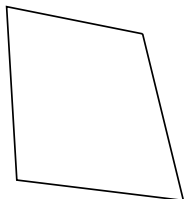
6)



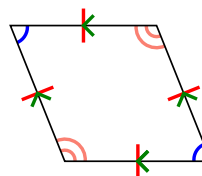
7)



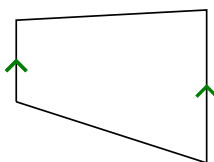
8)



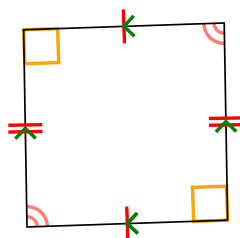
9)



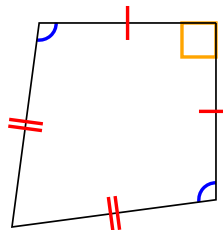
10)



11)



12)



1. Q,P,H
2. Q,P,H,R,S
3. Q,P
4. Q
5. Q
6. Q,P
7. Q,T
8. Q
9. Q,P,H
10. Q,T
11. Q,P
12. Q,K