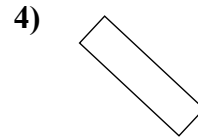
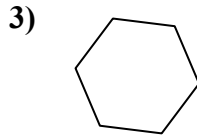
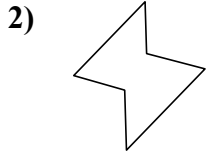
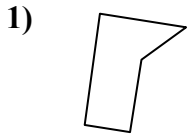




Определите, изображен ли четырехугольник или нет. (да или нет)

ОТВЕТЫ

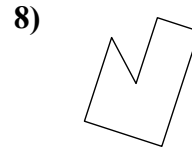
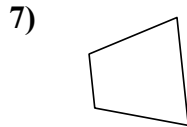
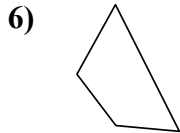
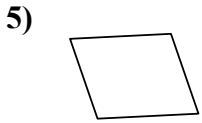


1. _____

2. _____

3. _____

4. _____

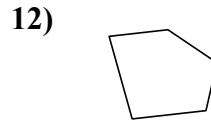
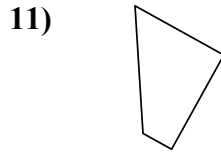
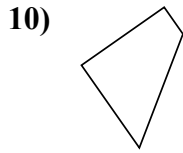


5. _____

6. _____

7. _____

8. _____

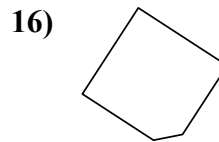
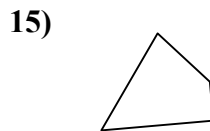
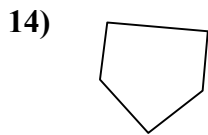
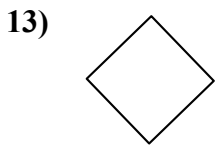


9. _____

10. _____

11. _____

12. _____

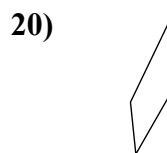
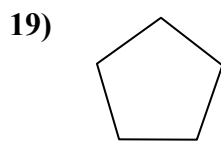
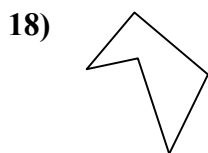
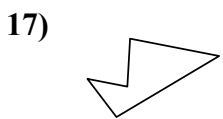


13. _____

14. _____

15. _____

16. _____



17. _____

18. _____

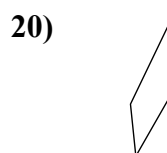
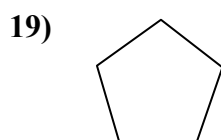
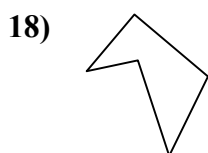
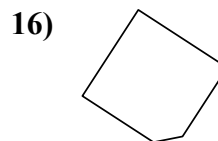
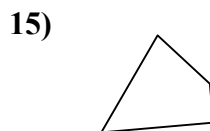
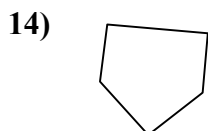
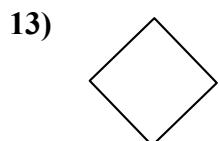
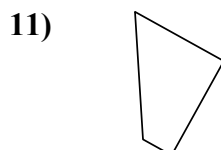
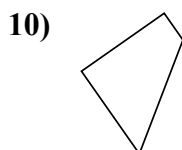
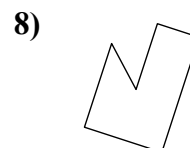
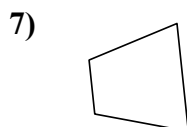
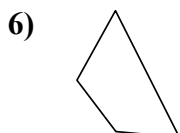
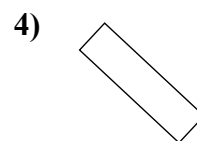
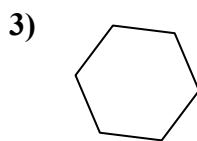
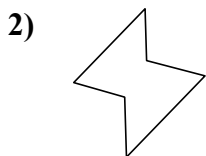
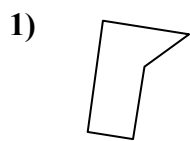
19. _____

20. _____



Определите, изображен ли четырехугольник или нет. (да или нет)

Ответы



1. нет

2. нет

3. нет

4. да

5. да

6. да

7. да

8. нет

9. да

10. да

11. да

12. нет

13. да

14. нет

15. да

16. нет

17. нет

18. нет

19. нет

20. да