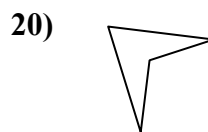
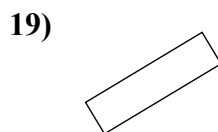
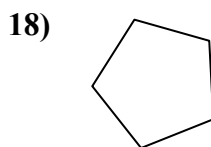

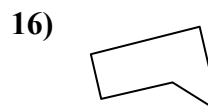
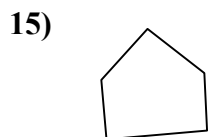
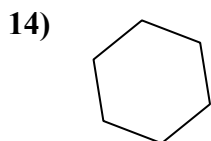
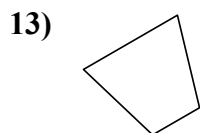
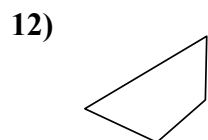
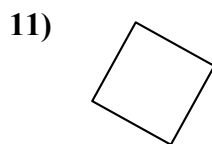
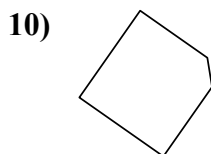
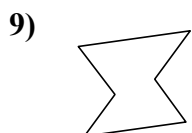
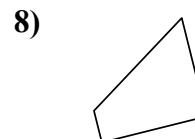
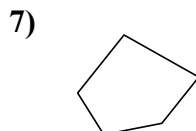
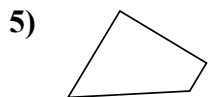
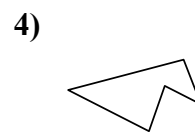
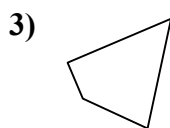
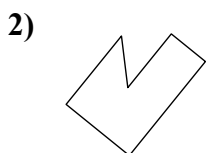
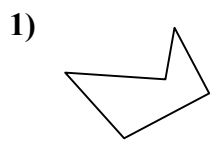




Определите, изображен ли четырехугольник или нет. (да или нет)

Ответы



1. _____

2. _____

3. _____

4. _____

5. _____

6. _____

7. _____

8. _____

9. _____

10. _____

11. _____

12. _____

13. _____

14. _____

15. _____

16. _____

17. _____

18. _____

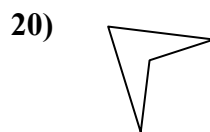
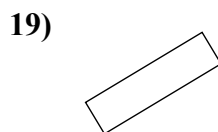
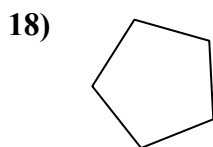
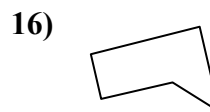
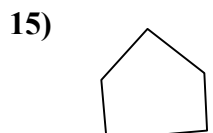
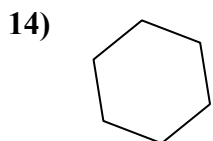
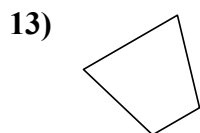
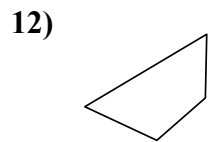
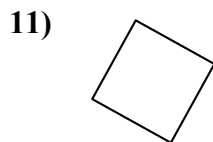
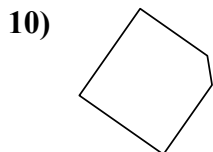
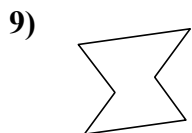
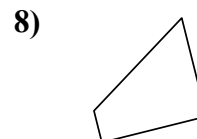
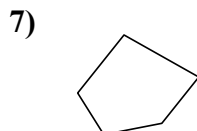
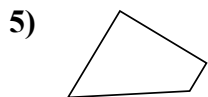
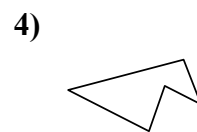
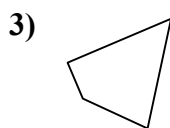
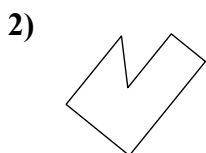
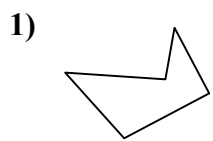
19. _____

20. _____



Определите, изображен ли четырехугольник или нет. (да или нет)

ОТВЕТЫ



1. нет

2. нет

3. да

4. нет

5. да

6. да

7. нет

8. да

9. нет

10. нет

11. да

12. да

13. да

14. нет

15. нет

16. нет

17. да

18. нет

19. да

20. да