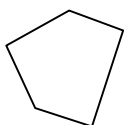




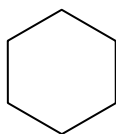
Определите, изображен ли четырехугольник или нет. (да или нет)

Ответы

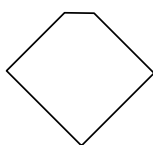
1)



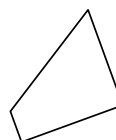
2)



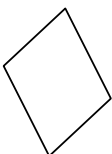
3)



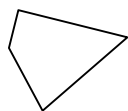
4)



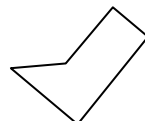
5)



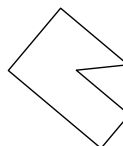
6)



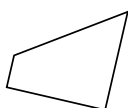
7)



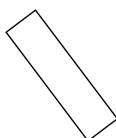
8)



9)



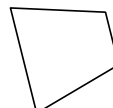
10)



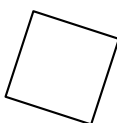
11)



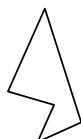
12)



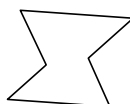
13)



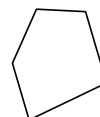
14)



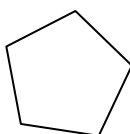
15)



16)



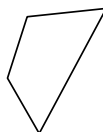
17)



18)



19)



20)



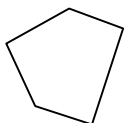
1. _____
2. _____
3. _____
4. _____
5. _____
6. _____
7. _____
8. _____
9. _____
10. _____
11. _____
12. _____
13. _____
14. _____
15. _____
16. _____
17. _____
18. _____
19. _____
20. _____



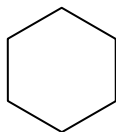
Определите, изображен ли четырехугольник или нет. (да или нет)

Ответы

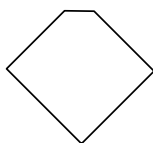
1)



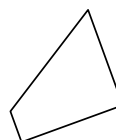
2)



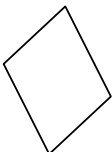
3)



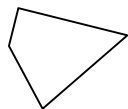
4)



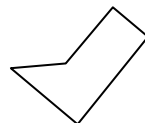
5)



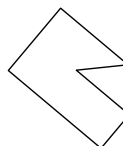
6)



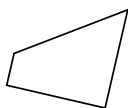
7)



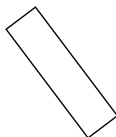
8)



9)



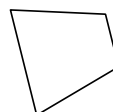
10)



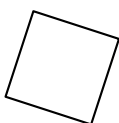
11)



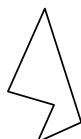
12)



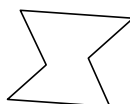
13)



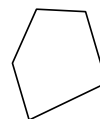
14)



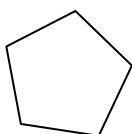
15)



16)



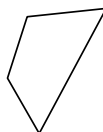
17)



18)



19)



20)

1. нет2. нет3. нет4. да5. да6. да7. нет8. нет9. да10. да11. да12. да13. да14. нет15. нет16. нет17. нет18. да19. да20. нет