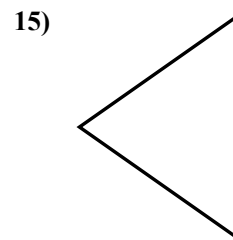
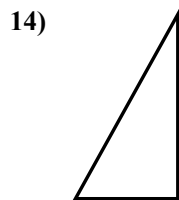
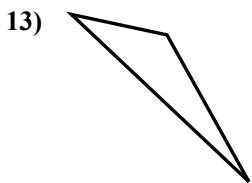
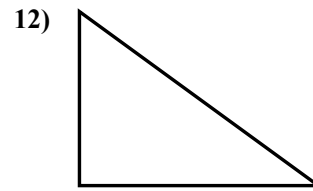
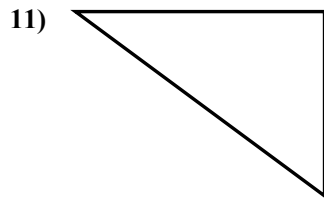
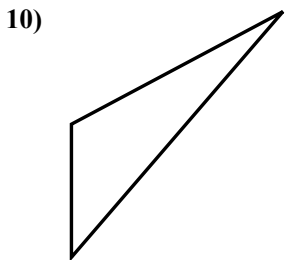
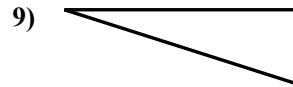
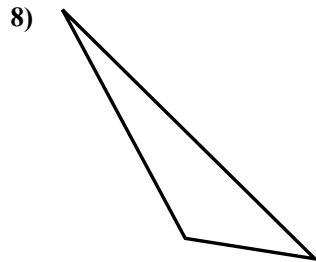
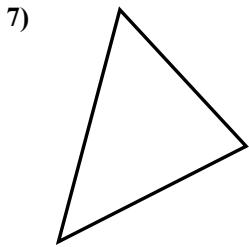
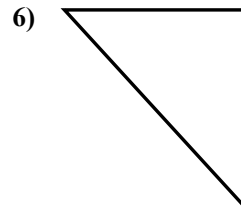
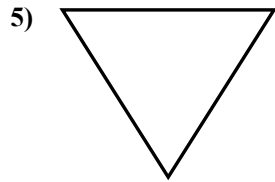
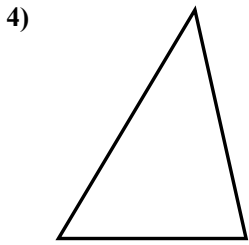
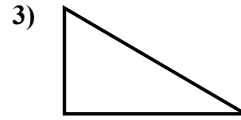
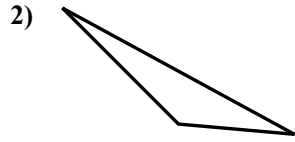
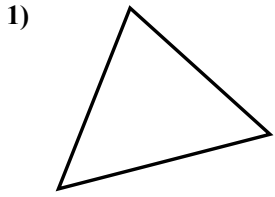




Определите, прямоугольный ли перед нами треугольник или нет.

**Ответы**

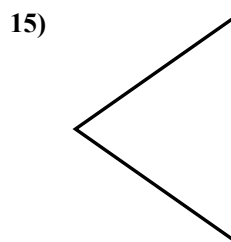
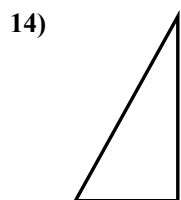
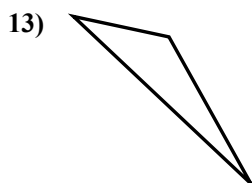
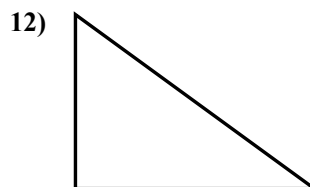
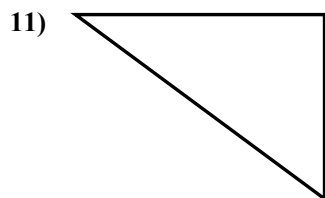
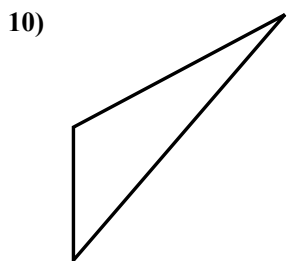
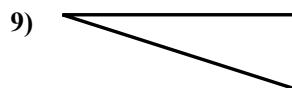
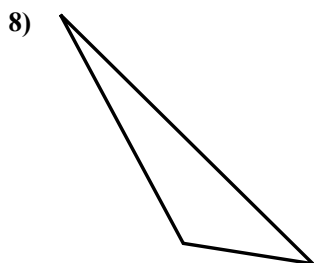
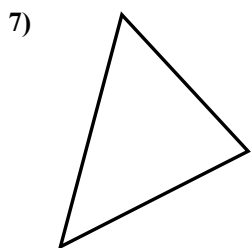
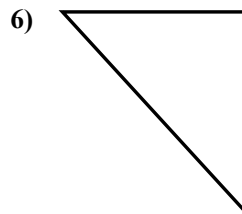
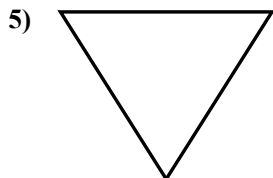
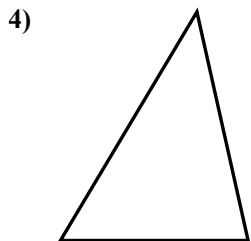
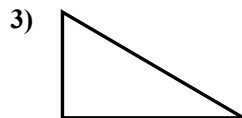
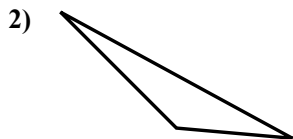
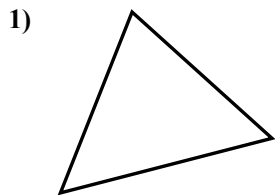


- 1. \_\_\_\_\_
- 2. \_\_\_\_\_
- 3. \_\_\_\_\_
- 4. \_\_\_\_\_
- 5. \_\_\_\_\_
- 6. \_\_\_\_\_
- 7. \_\_\_\_\_
- 8. \_\_\_\_\_
- 9. \_\_\_\_\_
- 10. \_\_\_\_\_
- 11. \_\_\_\_\_
- 12. \_\_\_\_\_
- 13. \_\_\_\_\_
- 14. \_\_\_\_\_
- 15. \_\_\_\_\_



Определите, прямоугольный ли перед нами треугольник или нет.

**Ответы**



1. нет

2. нет

3. да

4. нет

5. нет

6. да

7. нет

8. нет

9. да

10. нет

11. да

12. да

13. нет

14. да

15. нет