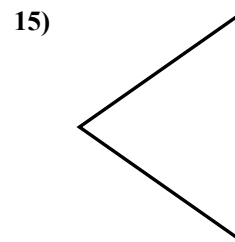
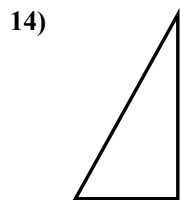
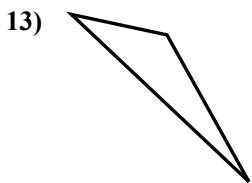
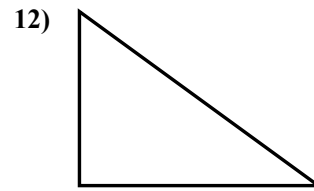
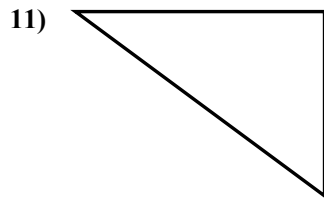
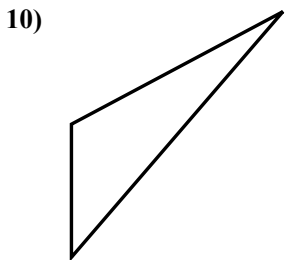
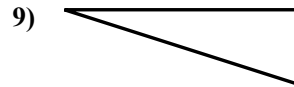
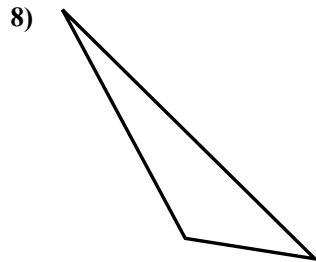
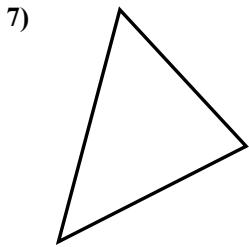
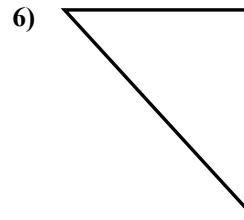
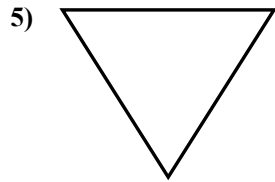
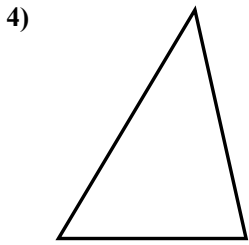
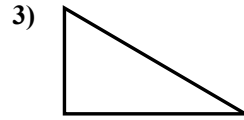
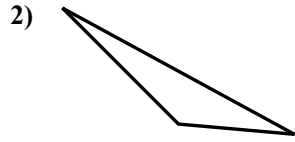
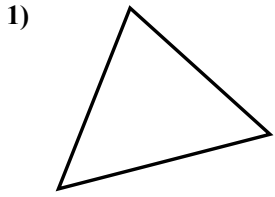




Определите, прямоугольный ли перед нами треугольник или нет.

Ответы

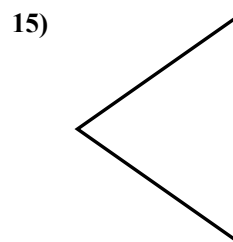
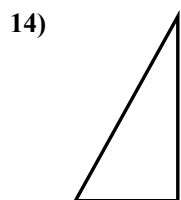
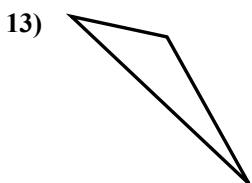
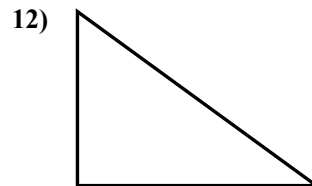
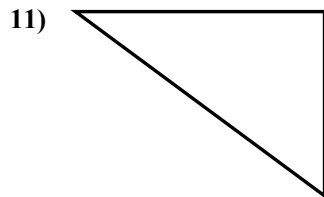
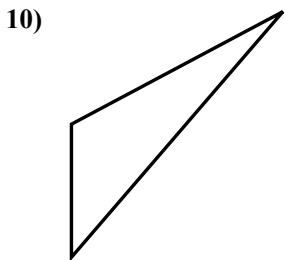
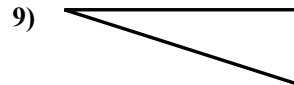
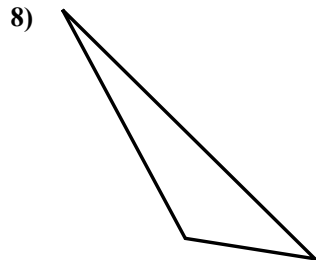
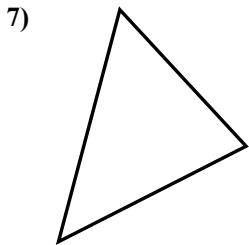
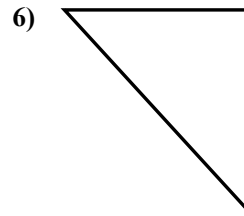
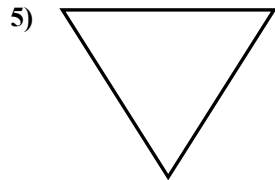
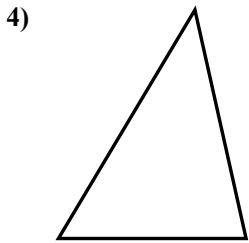
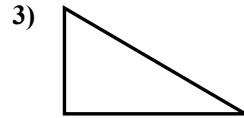
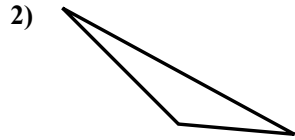
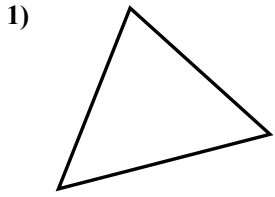


- 1. _____
- 2. _____
- 3. _____
- 4. _____
- 5. _____
- 6. _____
- 7. _____
- 8. _____
- 9. _____
- 10. _____
- 11. _____
- 12. _____
- 13. _____
- 14. _____
- 15. _____



Определите, прямоугольный ли перед нами треугольник или нет.

Ответы

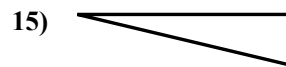
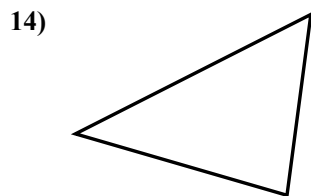
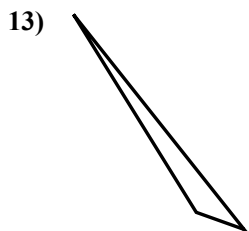
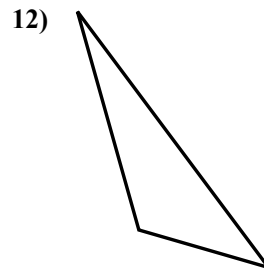
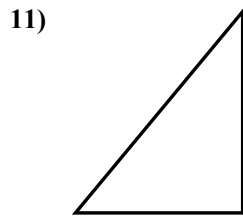
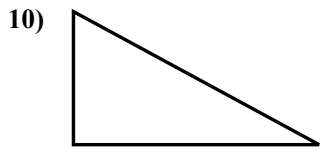
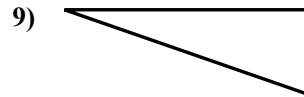
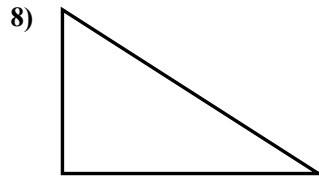
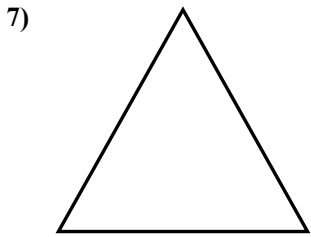
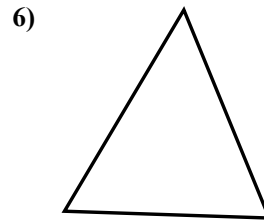
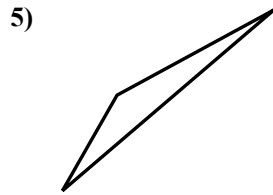
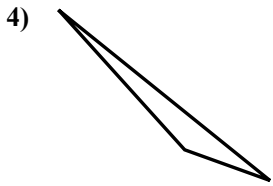
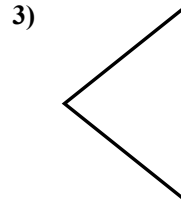
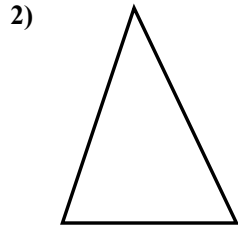
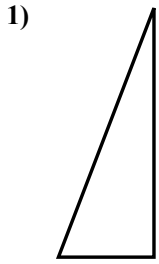


- 1. нет
- 2. нет
- 3. да
- 4. нет
- 5. нет
- 6. да
- 7. нет
- 8. нет
- 9. да
- 10. нет
- 11. да
- 12. да
- 13. нет
- 14. да
- 15. нет



Определите, прямоугольный ли перед нами треугольник или нет.

Ответы

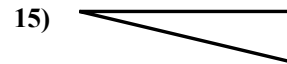
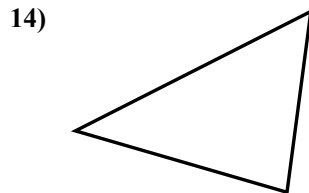
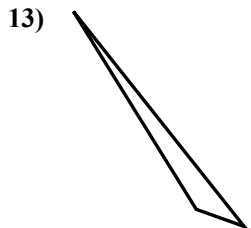
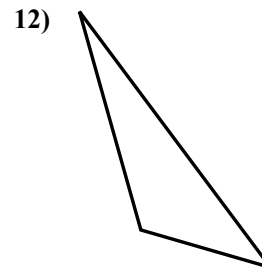
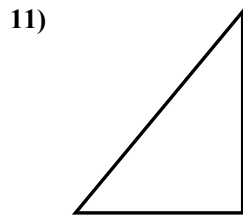
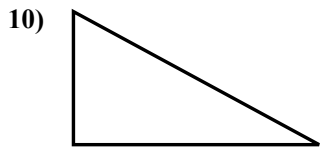
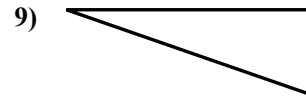
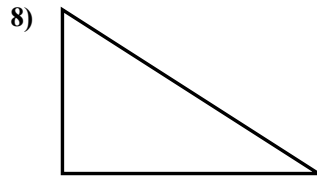
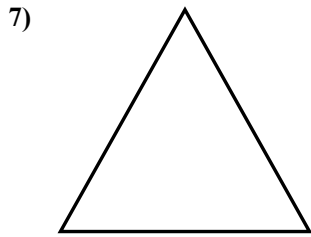
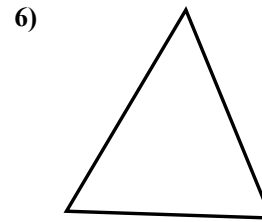
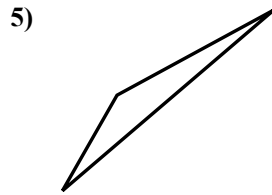

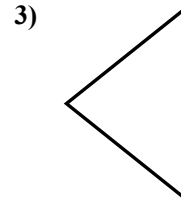
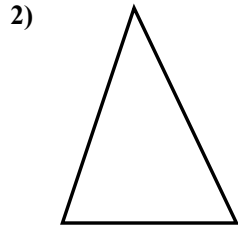
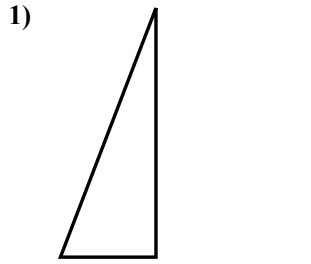


- 1. _____
- 2. _____
- 3. _____
- 4. _____
- 5. _____
- 6. _____
- 7. _____
- 8. _____
- 9. _____
- 10. _____
- 11. _____
- 12. _____
- 13. _____
- 14. _____
- 15. _____



Определите, прямоугольный ли перед нами треугольник или нет.

Ответы



1. да

2. нет

3. нет

4. нет

5. нет

6. нет

7. нет

8. да

9. да

10. да

11. да

12. нет

13. нет

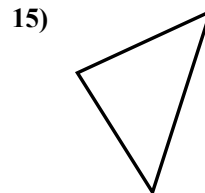

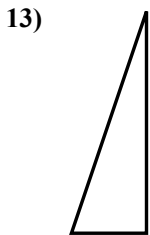
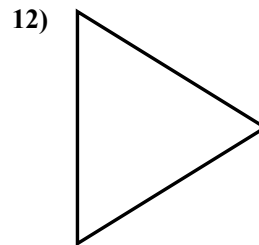
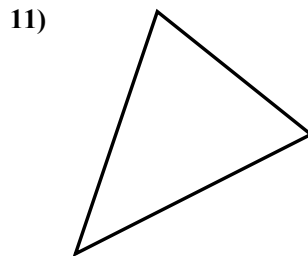
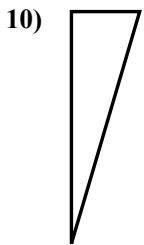
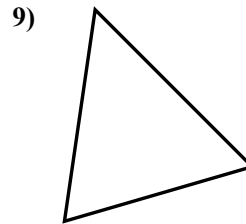
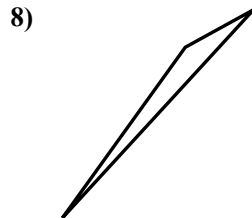
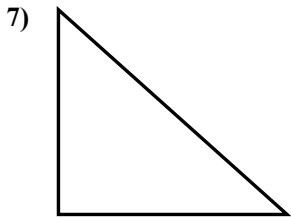
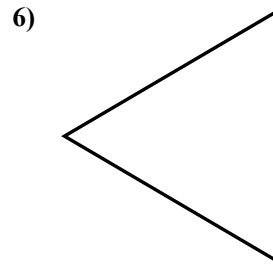
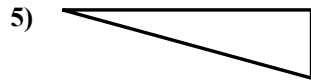
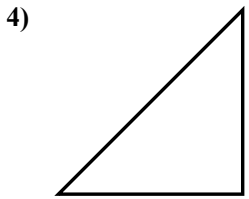
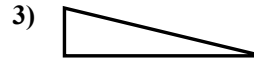
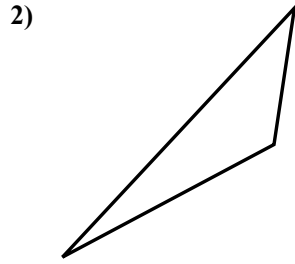
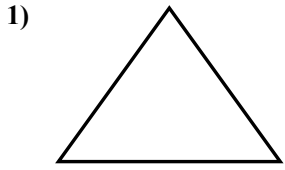
14. нет

15. да



Определите, прямоугольный ли перед нами треугольник или нет.

ОТВЕТЫ

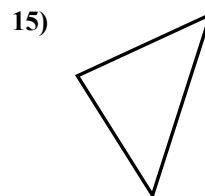

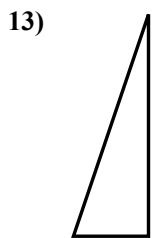
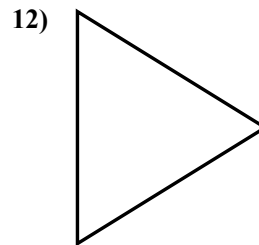
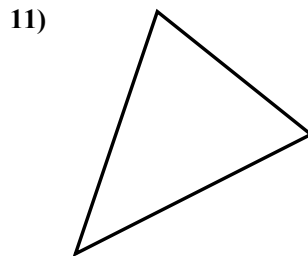
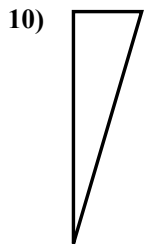
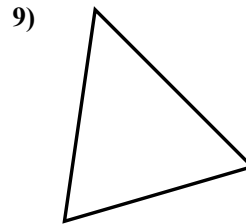
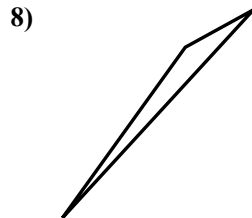
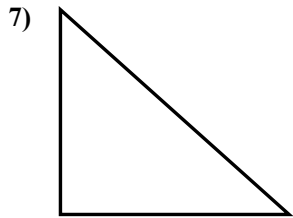
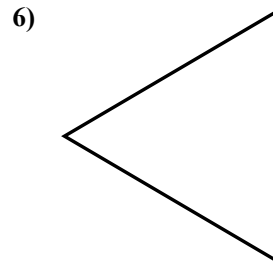
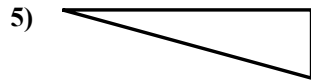
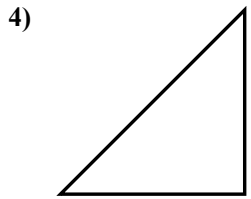
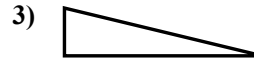
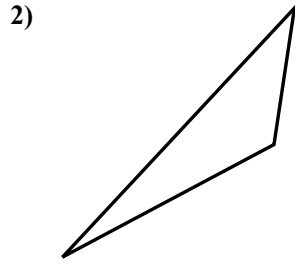
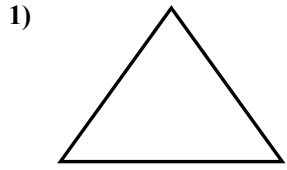


- 1. _____
- 2. _____
- 3. _____
- 4. _____
- 5. _____
- 6. _____
- 7. _____
- 8. _____
- 9. _____
- 10. _____
- 11. _____
- 12. _____
- 13. _____
- 14. _____
- 15. _____



Определите, прямоугольный ли перед нами треугольник или нет.

Ответы



1. нет

2. нет

3. да

4. да

5. да

6. нет

7. да

8. нет

9. нет

10. да

11. нет

12. нет

13. да

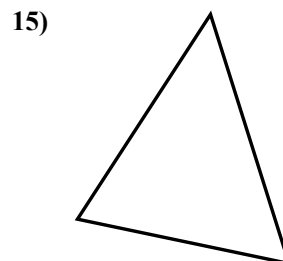
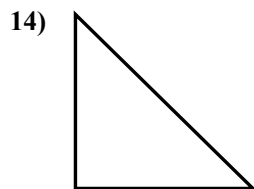
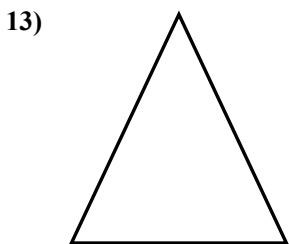
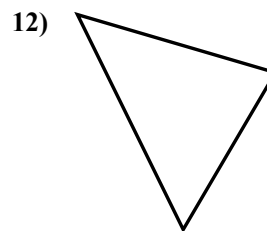
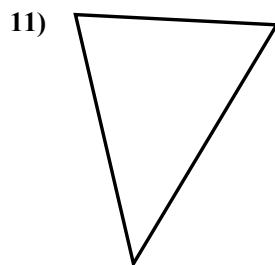
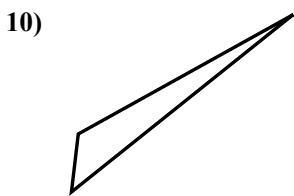
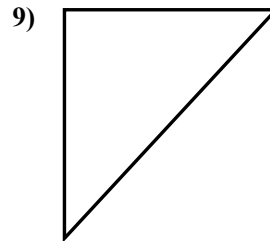
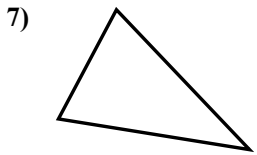
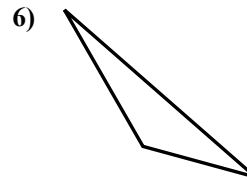
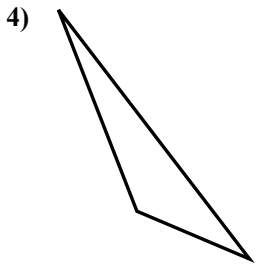
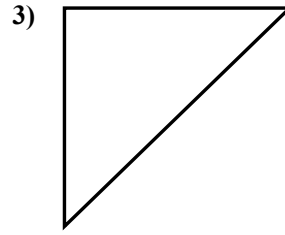
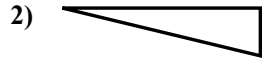
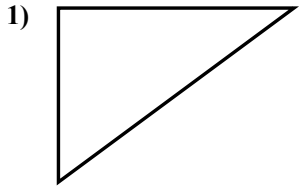
14. нет

15. нет



Определите, прямоугольный ли перед нами треугольник или нет.

Ответы

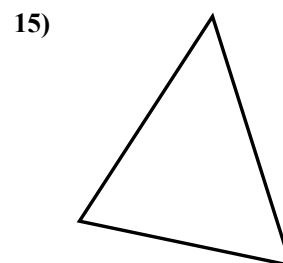
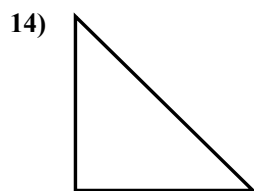
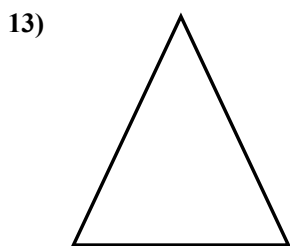
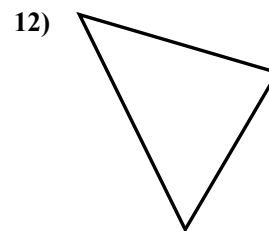
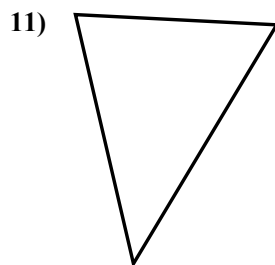
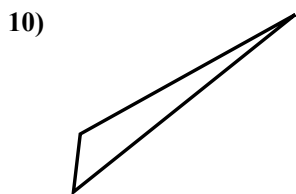
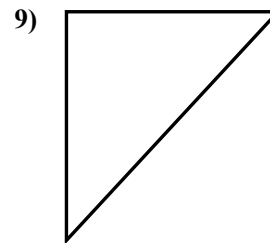
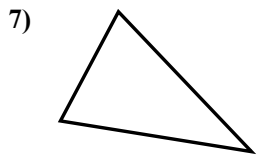
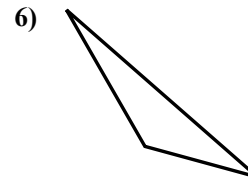
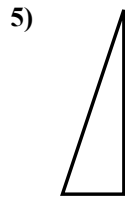
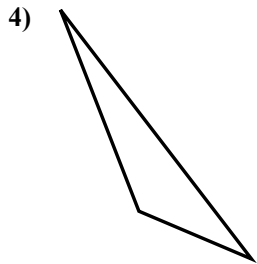
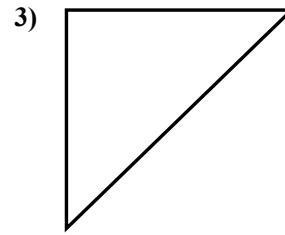
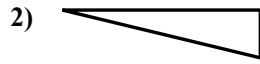
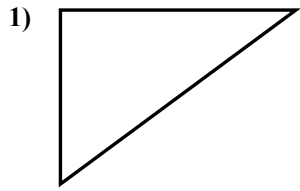


- 1. _____
- 2. _____
- 3. _____
- 4. _____
- 5. _____
- 6. _____
- 7. _____
- 8. _____
- 9. _____
- 10. _____
- 11. _____
- 12. _____
- 13. _____
- 14. _____
- 15. _____



Определите, прямоугольный ли перед нами треугольник или нет.

Ответы



1. **да**

2. **да**

3. **да**

4. **нет**

5. **да**

6. **нет**

7. **нет**

8. **да**

9. **да**

10. **нет**

11. **нет**

12. **нет**

13. **нет**

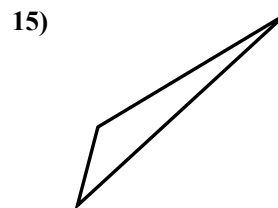
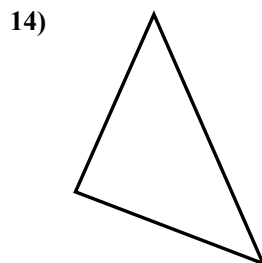
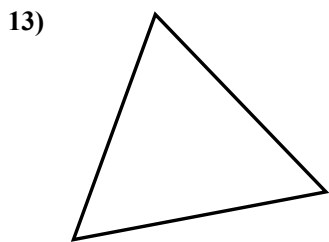

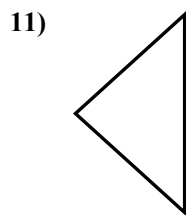
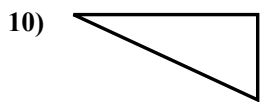
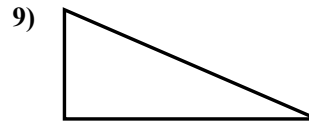
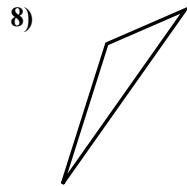

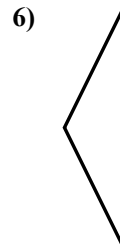

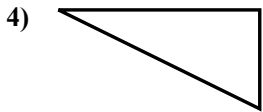
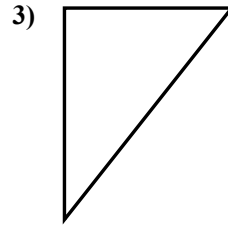
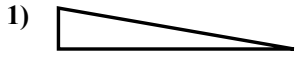
14. **да**

15. **нет**



Определите, прямоугольный ли перед нами треугольник или нет.

Ответы

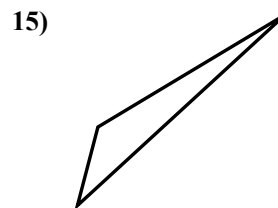
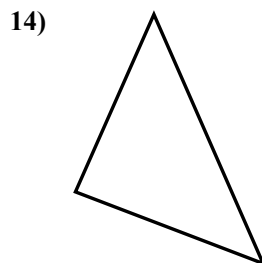
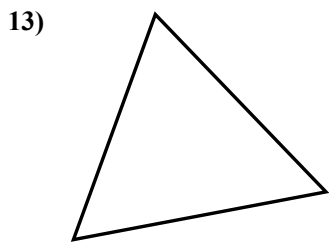

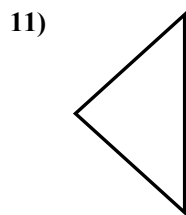
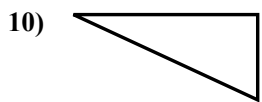
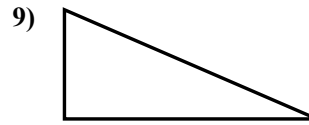
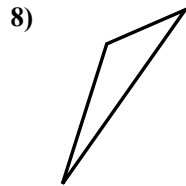

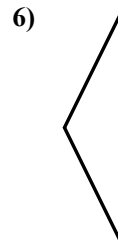

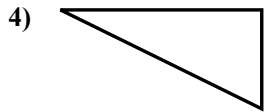
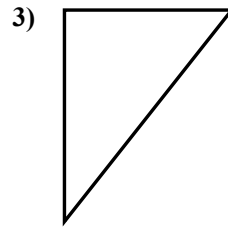
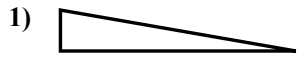


- 1. _____
- 2. _____
- 3. _____
- 4. _____
- 5. _____
- 6. _____
- 7. _____
- 8. _____
- 9. _____
- 10. _____
- 11. _____
- 12. _____
- 13. _____
- 14. _____
- 15. _____



Определите, прямоугольный ли перед нами треугольник или нет.

Ответы



1. да

2. да

3. да

4. да

5. нет

6. нет

7. нет

8. нет

9. да

10. да

11. нет

12. да

13. нет

14. да

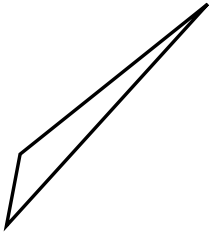
15. нет



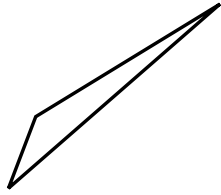
Определите, прямоугольный ли перед нами треугольник или нет.

Отвeты

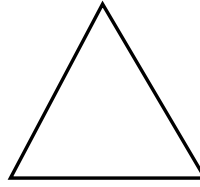
1)



2)



3)



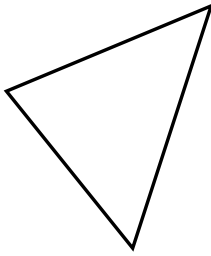
1. _____

2. _____

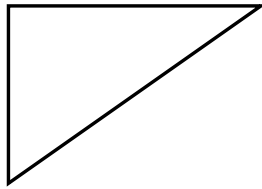
3. _____

4. _____


4)



5)



6)




5. _____

6. _____

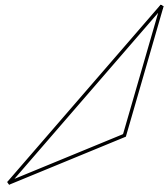
7. _____

8. _____


7)



8)



9)



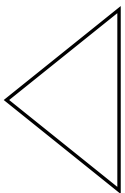
9. _____

10. _____

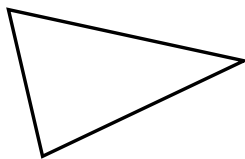
11. _____

12. _____

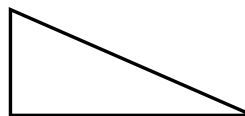
10)



11)



12)

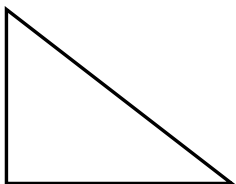


13. _____

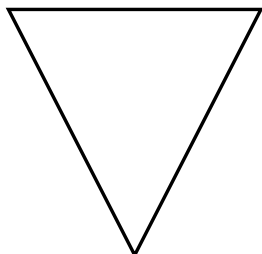
14. _____

15. _____

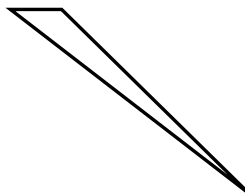
13)



14)



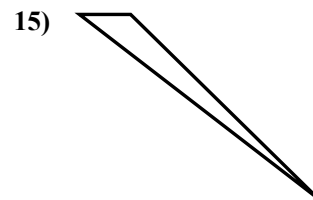
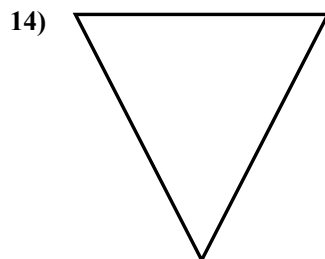
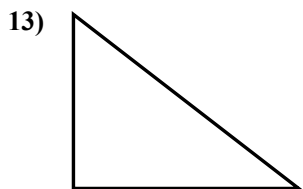
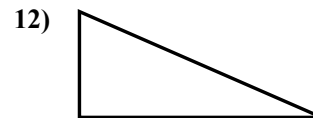
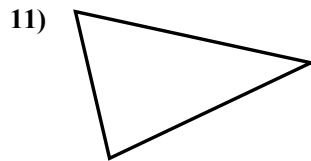
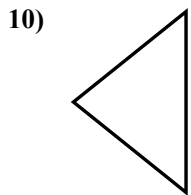
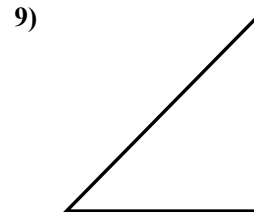
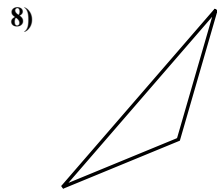
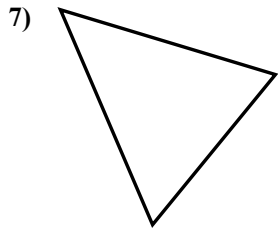
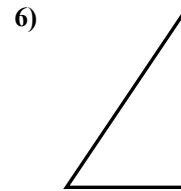
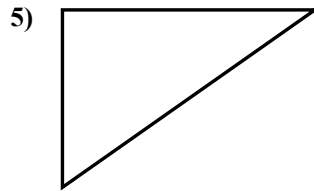
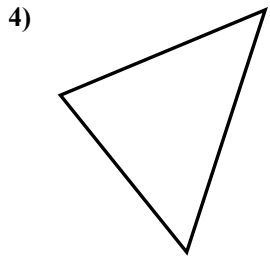
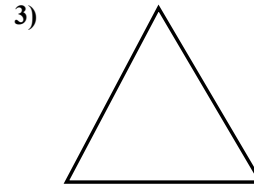
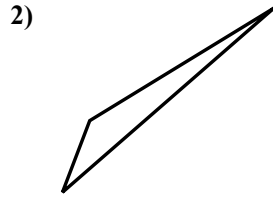
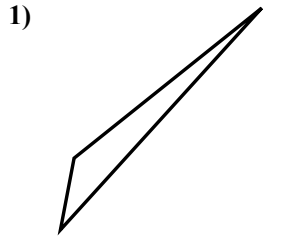
15)





Определите, прямоугольный ли перед нами треугольник или нет.

Ответы

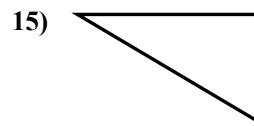
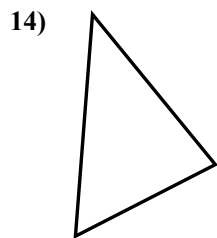
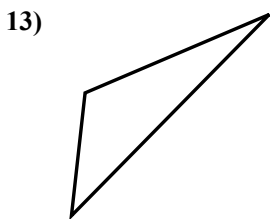
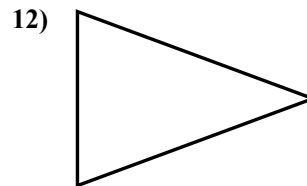
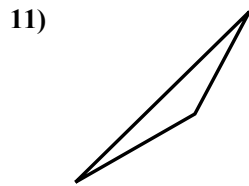
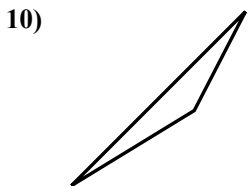
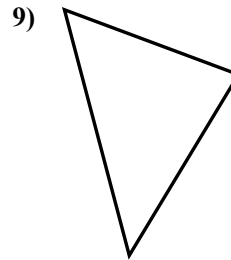
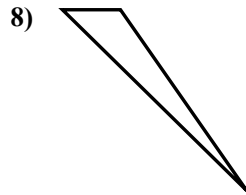
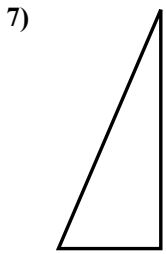
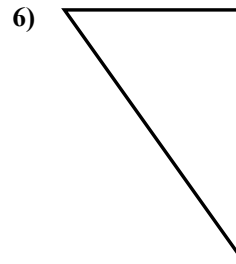
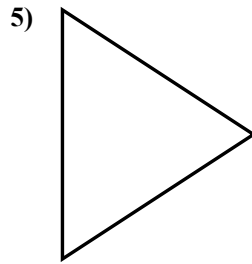
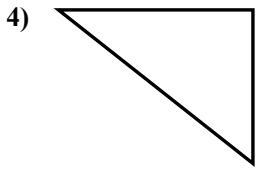
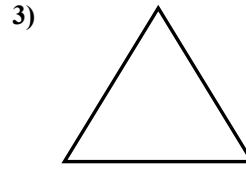
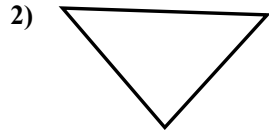
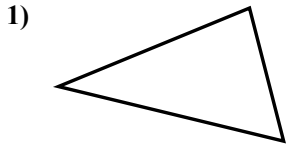


- 1. нет
- 2. нет
- 3. нет
- 4. нет
- 5. да
- 6. да
- 7. нет
- 8. нет
- 9. да
- 10. нет
- 11. нет
- 12. да
- 13. да
- 14. нет
- 15. нет



Определите, прямоугольный ли перед нами треугольник или нет.

Ответы

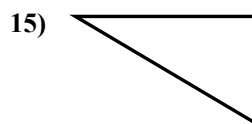
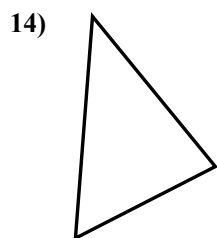
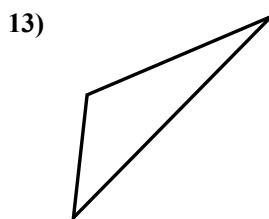
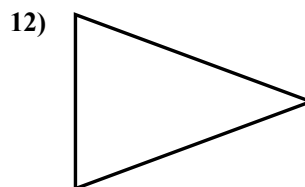
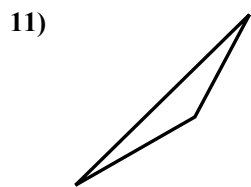
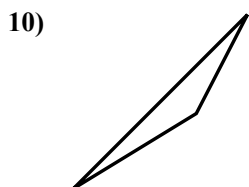
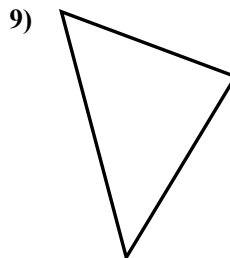
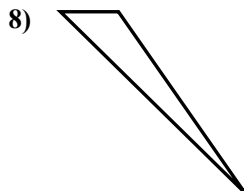
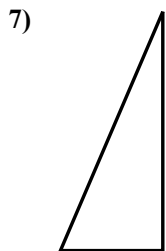
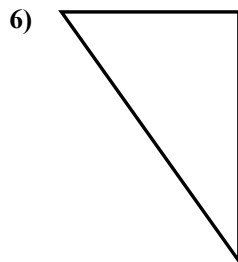
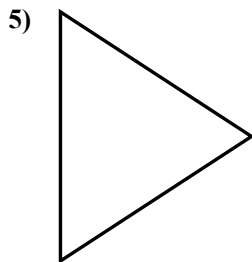
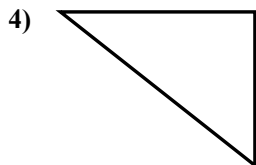
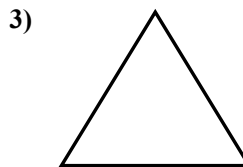
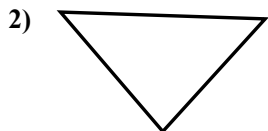
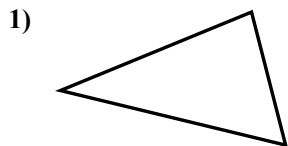


- 1. _____
- 2. _____
- 3. _____
- 4. _____
- 5. _____
- 6. _____
- 7. _____
- 8. _____
- 9. _____
- 10. _____
- 11. _____
- 12. _____
- 13. _____
- 14. _____
- 15. _____



Определите, прямоугольный ли перед нами треугольник или нет.

Ответы



1. нет

2. нет

3. нет

4. да

5. нет

6. да

7. да

8. нет

9. нет

10. нет

11. нет

12. нет

13. нет

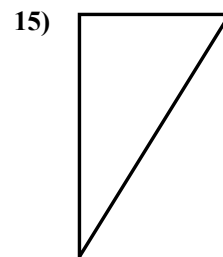
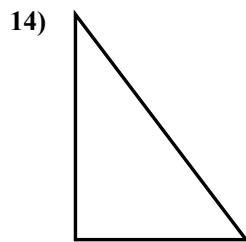

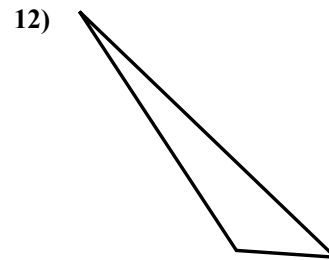
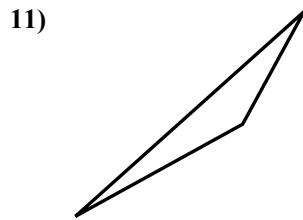
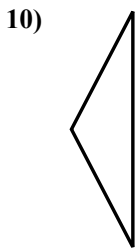
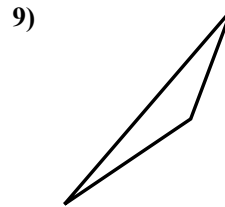
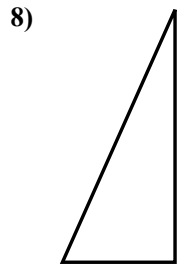

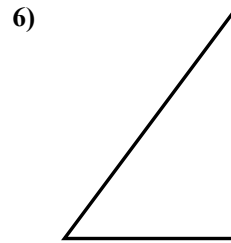
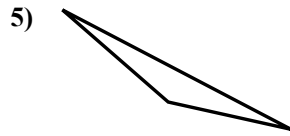
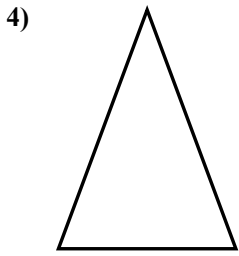
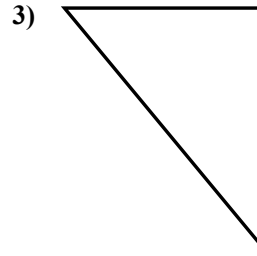
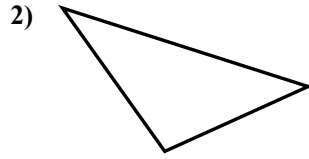
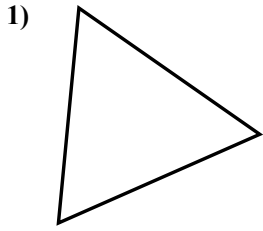
14. нет

15. да



Определите, прямоугольный ли перед нами треугольник или нет.

Ответы

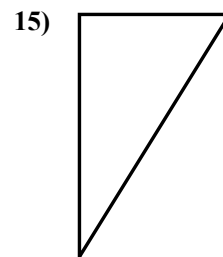
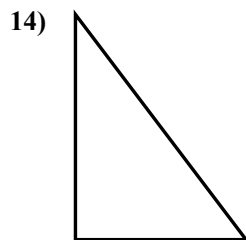

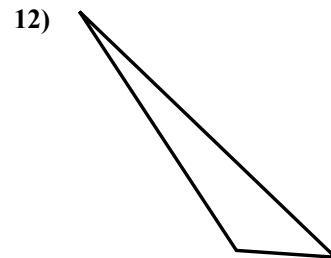
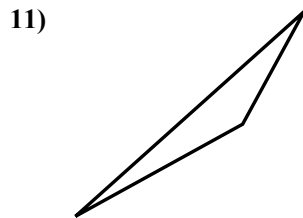
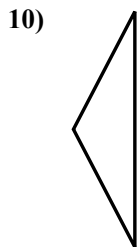

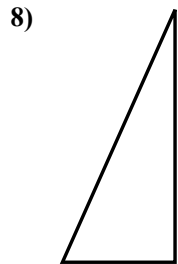

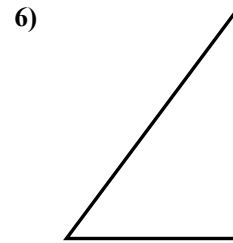
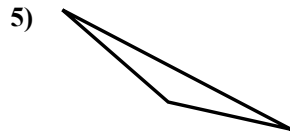
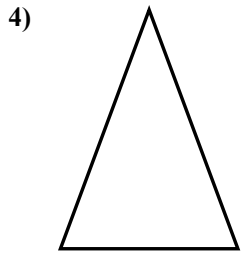
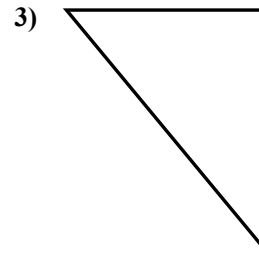
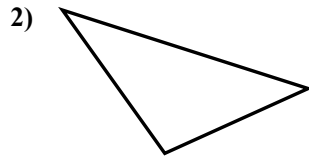
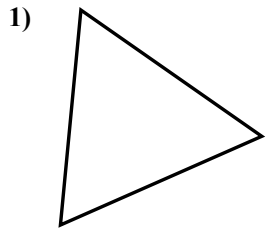


- 1. _____
- 2. _____
- 3. _____
- 4. _____
- 5. _____
- 6. _____
- 7. _____
- 8. _____
- 9. _____
- 10. _____
- 11. _____
- 12. _____
- 13. _____
- 14. _____
- 15. _____



Определите, прямоугольный ли перед нами треугольник или нет.

Ответы



1. нет

2. нет

3. да

4. нет

5. нет

6. да

7. нет

8. да

9. нет

10. нет

11. нет

12. нет

13. нет

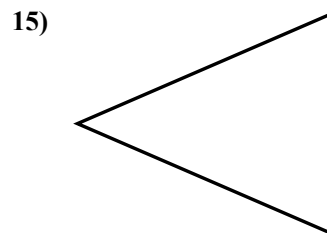
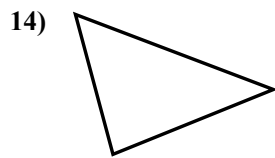
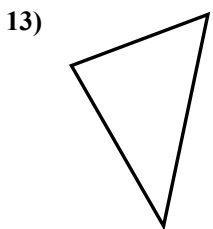
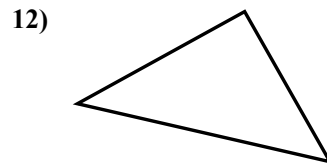
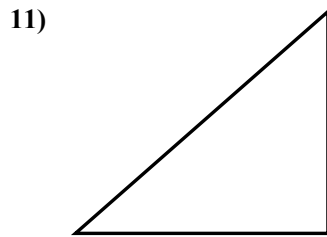
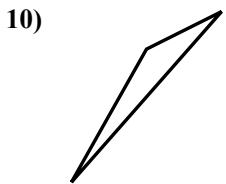
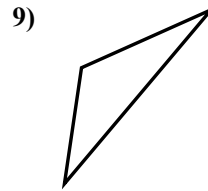
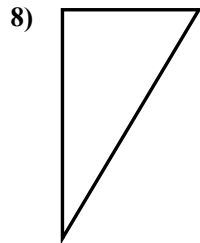
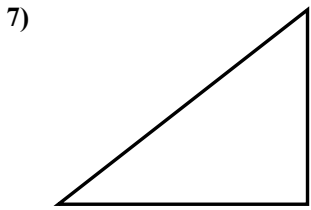
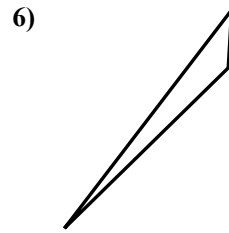
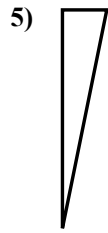
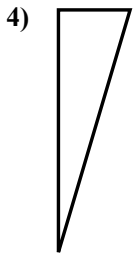
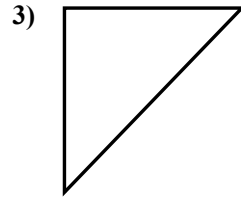
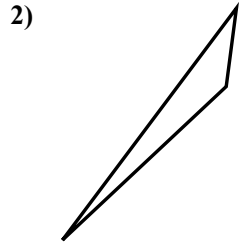
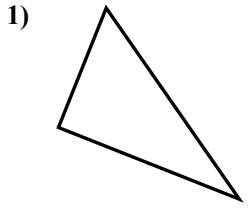
14. да

15. да



Определите, прямоугольный ли перед нами треугольник или нет.

ОТВЕТЫ

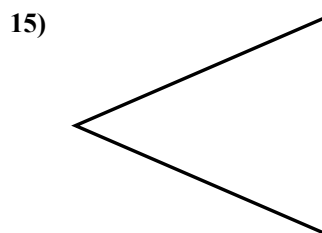
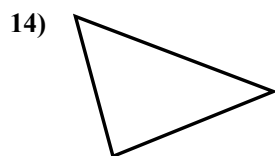
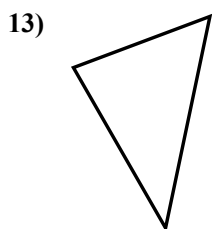
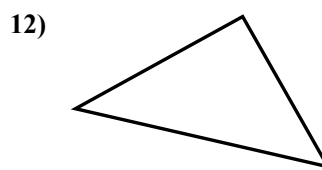
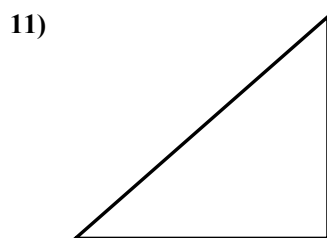
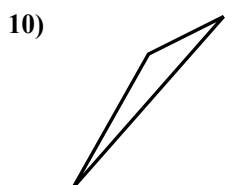
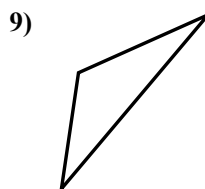
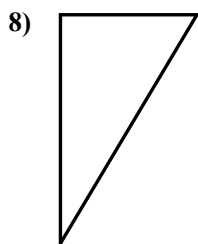
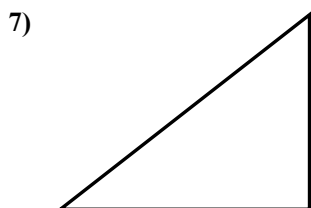
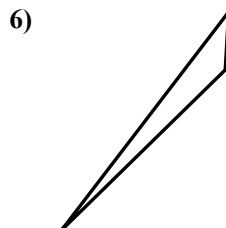
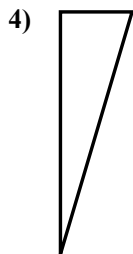
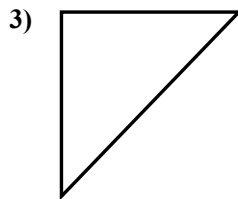
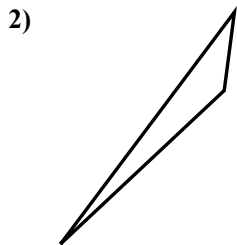
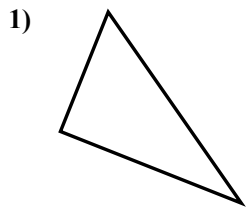


- 1. _____
- 2. _____
- 3. _____
- 4. _____
- 5. _____
- 6. _____
- 7. _____
- 8. _____
- 9. _____
- 10. _____
- 11. _____
- 12. _____
- 13. _____
- 14. _____
- 15. _____



Определите, прямоугольный ли перед нами треугольник или нет.

Ответы



1. да

2. нет

3. да

4. да

5. да

6. нет

7. да

8. да

9. нет

10. нет

11. да

12. да

13. нет

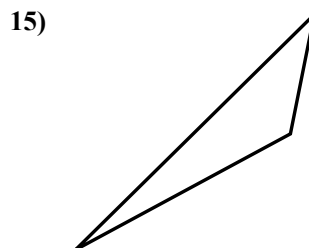
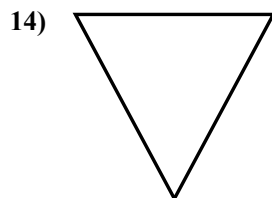
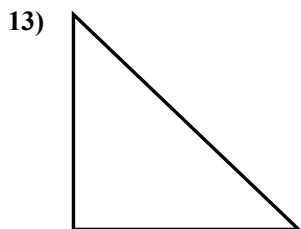
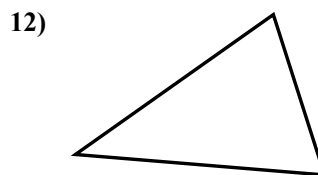
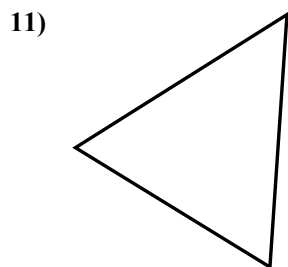
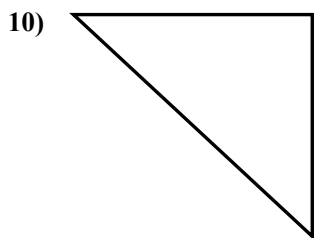
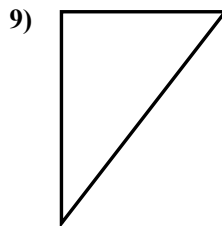
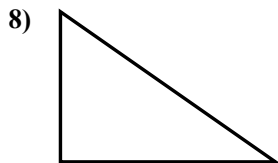
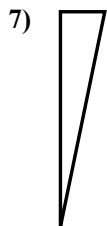
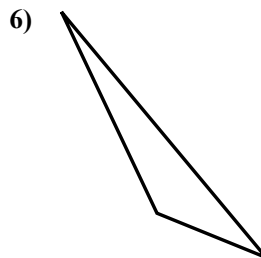
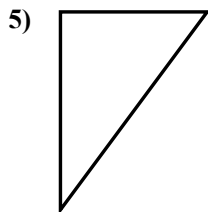

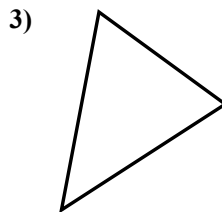
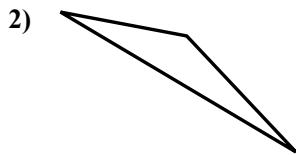
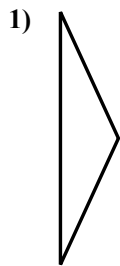
14. нет

15. нет



Определите, прямоугольный ли перед нами треугольник или нет.

Ответы



1. _____

2. _____

3. _____

4. _____

5. _____

6. _____

7. _____

8. _____

9. _____

10. _____

11. _____

12. _____

13. _____

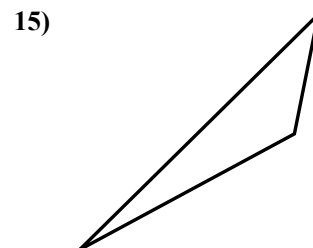
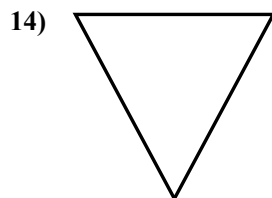
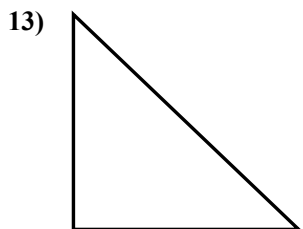
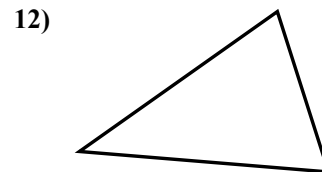
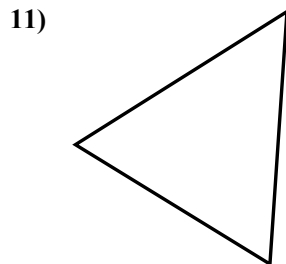
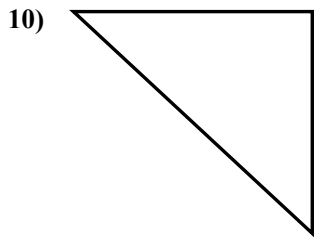
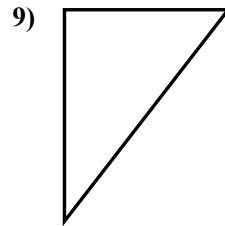
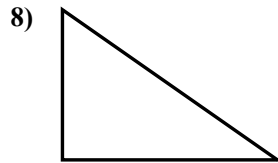
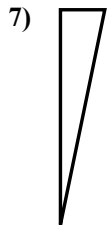
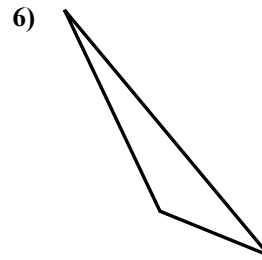
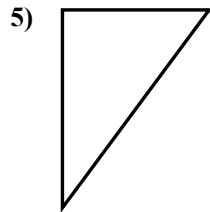
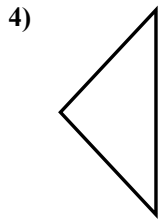
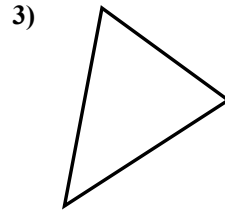
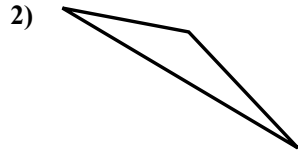
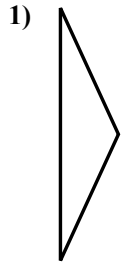
14. _____

15. _____



Определите, прямоугольный ли перед нами треугольник или нет.

Ответы



1. нет

2. нет

3. нет

4. нет

5. да

6. нет

7. да

8. да

9. да

10. да

11. нет

12. нет

13. да

14. нет

15. нет